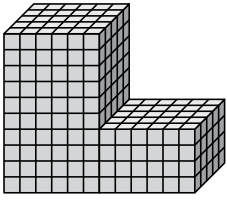




Trouvez le volume total de chaque figure. La mesure est en cm (pas à l'échelle).

Réponses

1)



1. _____

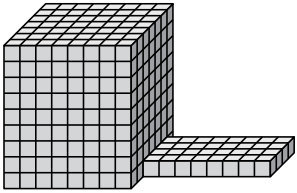
2. _____

3. _____

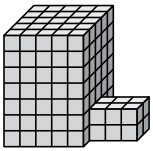
4. _____

5. _____

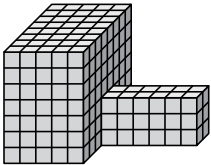
2)



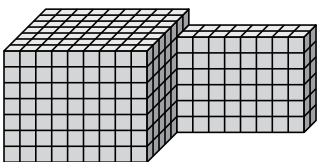
3)



4)

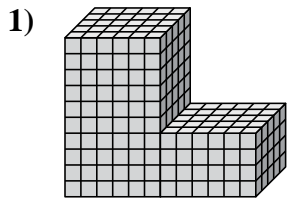


5)



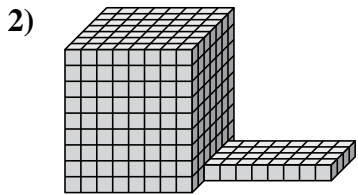


Trouvez le volume total de chaque figure. La mesure est en cm (pas à l'échelle).

Réponses

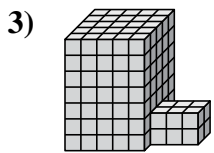
$$6 \times 5 \times 10 = 300$$
$$6 \times 5 \times 4 = 120$$

1. 420 cm³



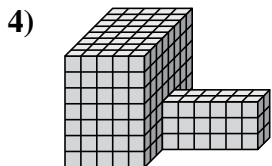
$$8 \times 7 \times 9 = 504$$
$$8 \times 4 \times 1 = 32$$

2. 536 cm³



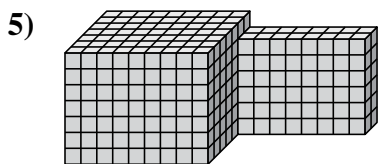
$$5 \times 5 \times 7 = 175$$
$$3 \times 2 \times 2 = 12$$

3. 187 cm³



$$5 \times 8 \times 7 = 280$$
$$6 \times 2 \times 3 = 36$$

4. 316 cm³



$$9 \times 7 \times 7 = 441$$
$$8 \times 2 \times 6 = 96$$

5. 537 cm³