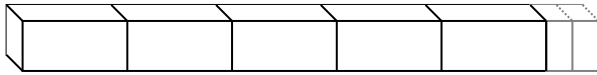
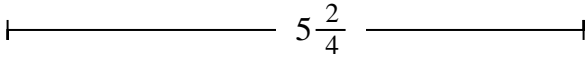




Déterminez la plus petite fraction qui peut être faite à partir d'une plus grosse pièce.

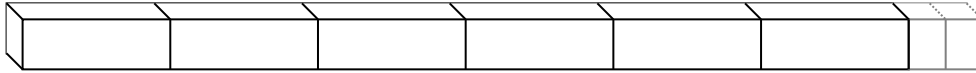
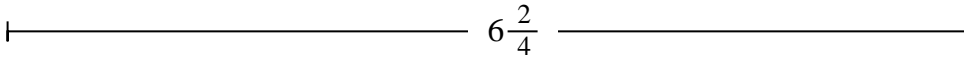
**Réponses**

Ex)



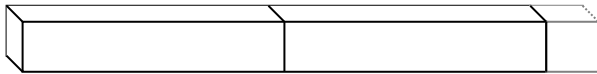
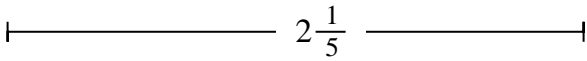
Ex. **22**

1)




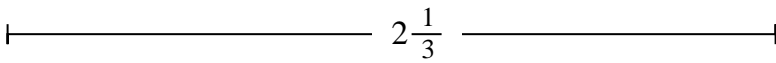
1. \_\_\_\_\_

2)




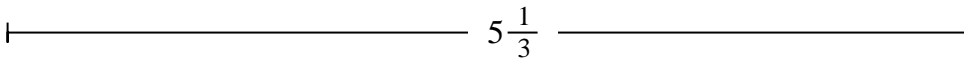
2. \_\_\_\_\_

3)



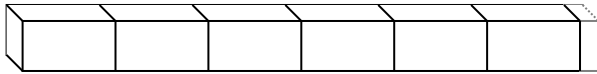
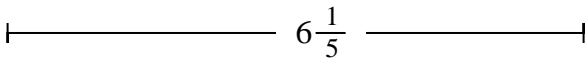
3. \_\_\_\_\_

4)




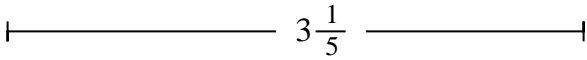
4. \_\_\_\_\_

5)




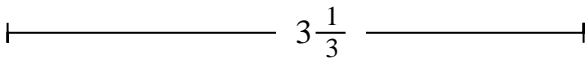
5. \_\_\_\_\_

6)




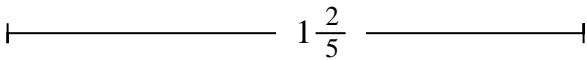
6. \_\_\_\_\_

7)



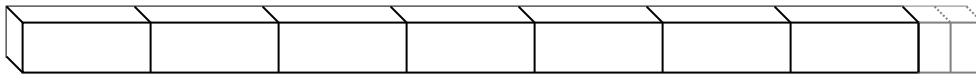
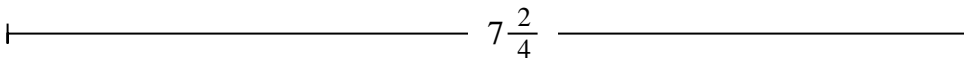
7. \_\_\_\_\_

8)




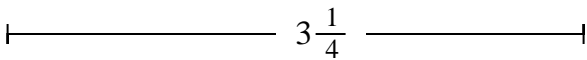
8. \_\_\_\_\_

9)



9. \_\_\_\_\_

10)



10. \_\_\_\_\_



Déterminez la plus petite fraction qui peut être faite à partir d'une plus grosse pièce.

**Réponses**

Ex)  $5\frac{2}{4}$

1)  $6\frac{2}{4}$

2)  $2\frac{1}{5}$

3)  $2\frac{1}{3}$

4)  $5\frac{1}{3}$

5)  $6\frac{1}{5}$

6)  $3\frac{1}{5}$

7)  $3\frac{1}{3}$

8)  $1\frac{2}{5}$

9)  $7\frac{2}{4}$

10)  $3\frac{1}{4}$

- Ex. 22
1. 26
2. 11
3. 7
4. 16
5. 31
6. 16
7. 10
8. 7
9. 30
10. 13