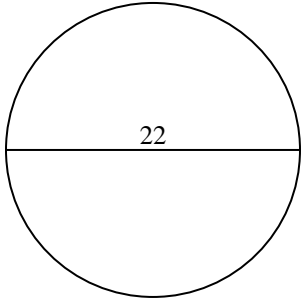


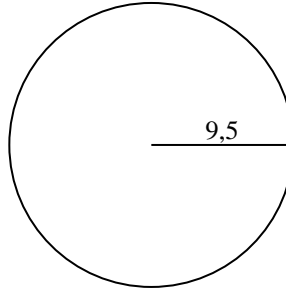


Calculez l'aire et la circonférence de chaque cercle. Les cercles ne sont pas à l'échelle.

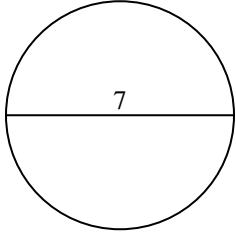
1)



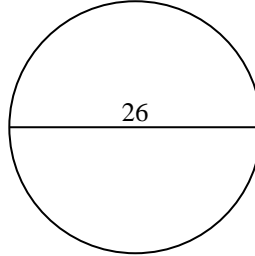
2)



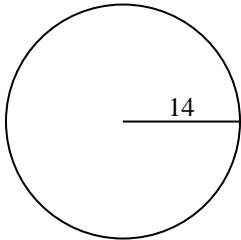
3)



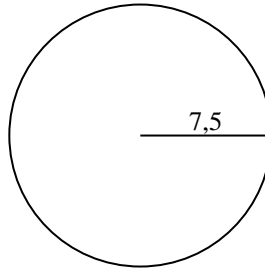
4)



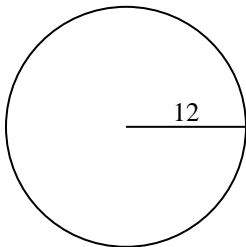
5)



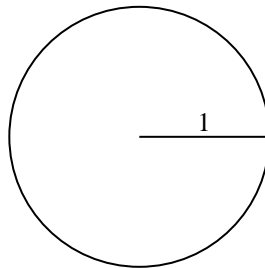
6)



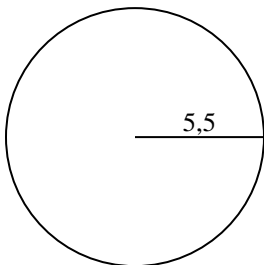
7)



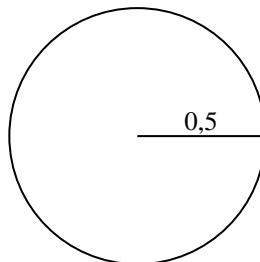
8)



9)



10)

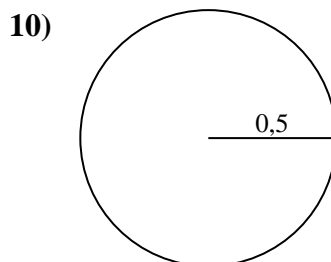
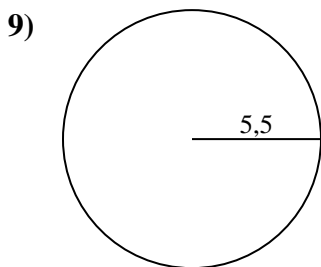
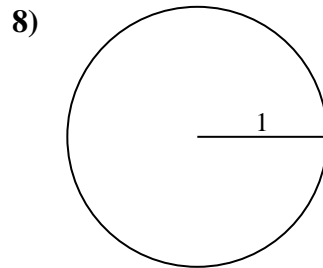
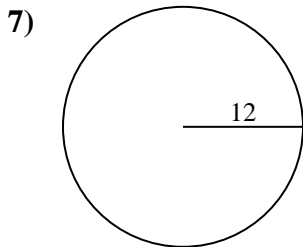
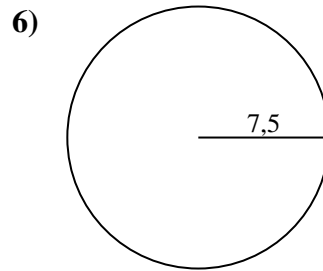
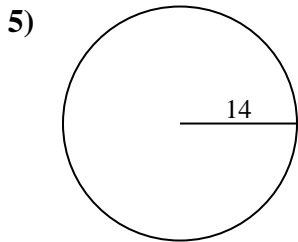
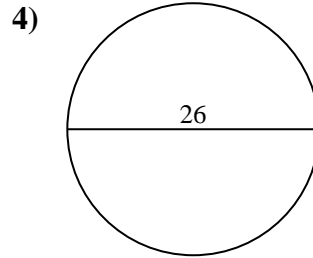
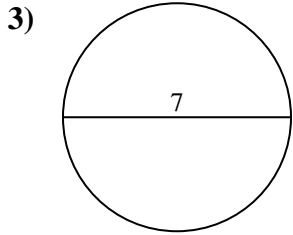
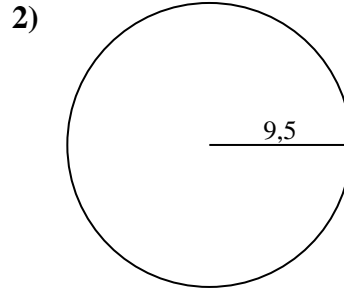
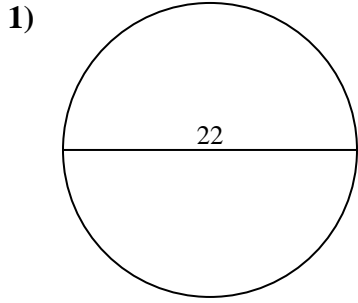


Réponses

- 1. _____
- 2. _____
- 3. _____
- 4. _____
- 5. _____
- 6. _____
- 7. _____
- 8. _____
- 9. _____
- 10. _____



Calculez l'aire et la circonférence de chaque cercle. Les cercles ne sont pas à l'échelle.



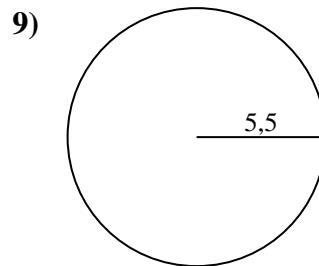
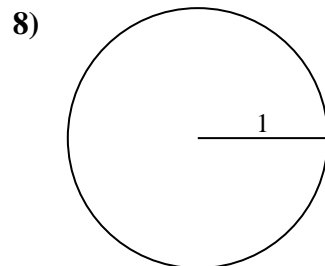
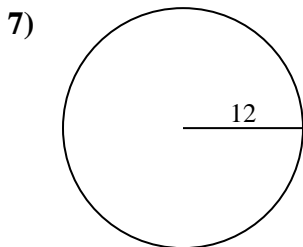
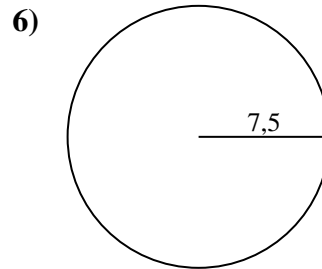
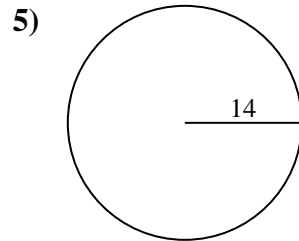
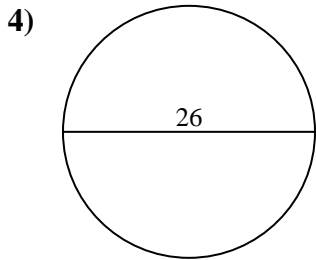
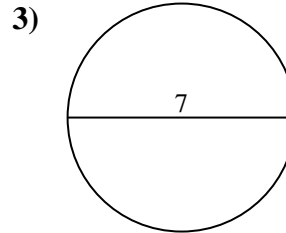
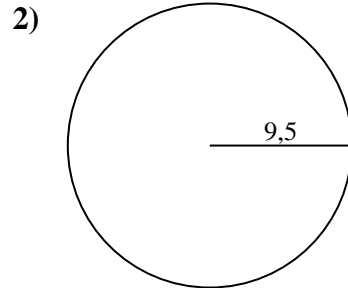
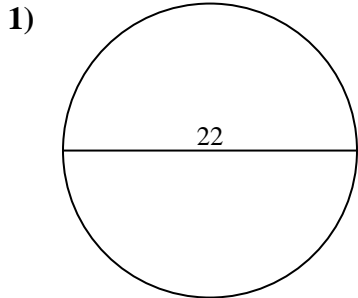
Réponses

| | | |
|-----|--------------|-------------|
| 1. | <u>380,1</u> | <u>69,1</u> |
| 2. | <u>283,5</u> | <u>59,7</u> |
| 3. | <u>38,5</u> | <u>22</u> |
| 4. | <u>530,9</u> | <u>81,7</u> |
| 5. | <u>615,8</u> | <u>88</u> |
| 6. | <u>176,7</u> | <u>47,1</u> |
| 7. | <u>452,4</u> | <u>75,4</u> |
| 8. | <u>3,1</u> | <u>6,3</u> |
| 9. | <u>95</u> | <u>34,6</u> |
| 10. | <u>0,8</u> | <u>3,1</u> |



Calculez l'aire et la circonférence de chaque cercle. Les cercles ne sont pas à l'échelle.

| | | | | |
|------|------|-------|-------|-------|
| 95 | 34,6 | 283,5 | 380,1 | 530,9 |
| 75,4 | 59,7 | 615,8 | 452,4 | 6,3 |
| 81,7 | 3,1 | 47,1 | 22 | 176,7 |
| 69,1 | 38,5 | 88 | | |



Réponses

1. _____
2. _____
3. _____
4. _____
5. _____
6. _____
7. _____
8. _____
9. _____