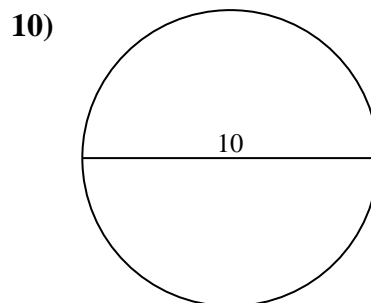
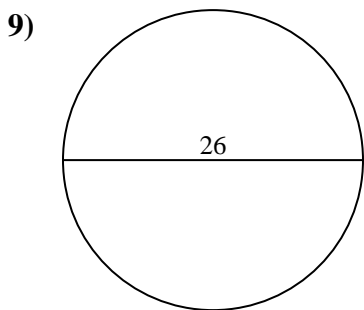
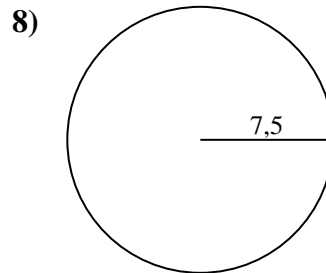
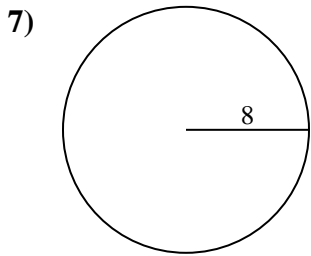
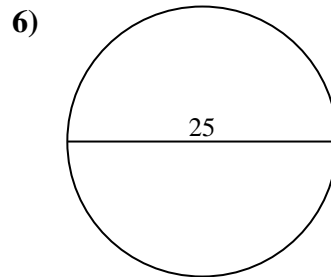
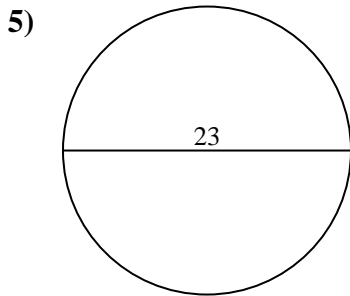
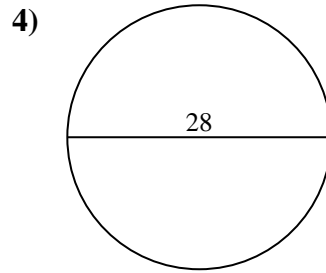
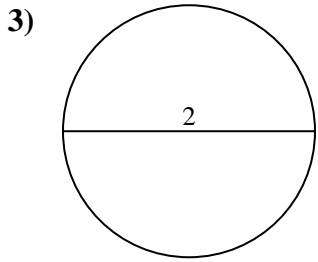
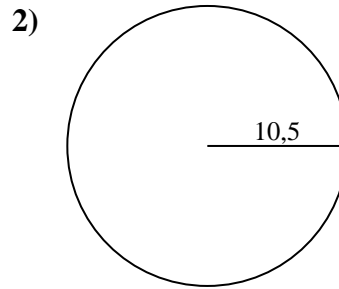
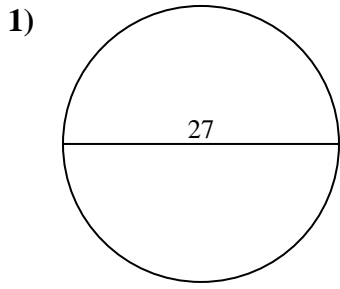




Calculez l'aire et la circonférence de chaque cercle. Les cercles ne sont pas à l'échelle.



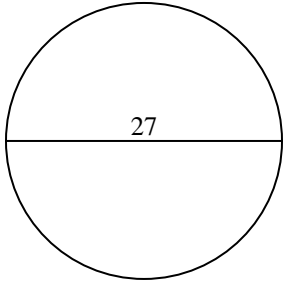
Réponses

- 1. _____
- 2. _____
- 3. _____
- 4. _____
- 5. _____
- 6. _____
- 7. _____
- 8. _____
- 9. _____
- 10. _____

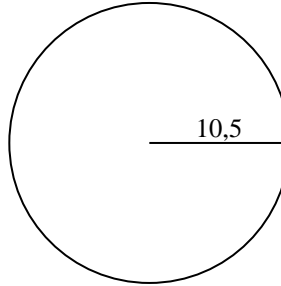


Calculez l'aire et la circonférence de chaque cercle. Les cercles ne sont pas à l'échelle.

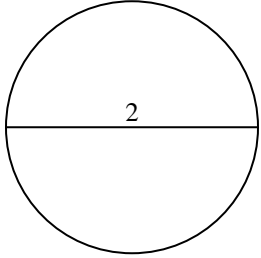
1)



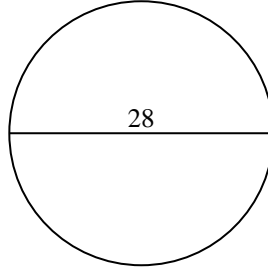
2)



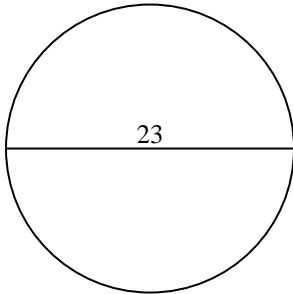
3)



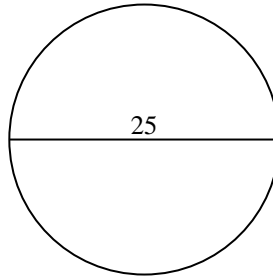
4)



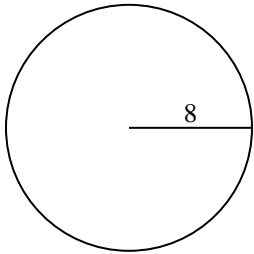
5)



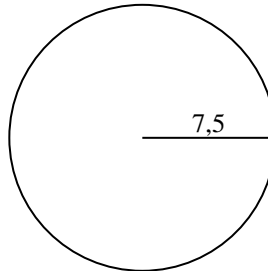
6)



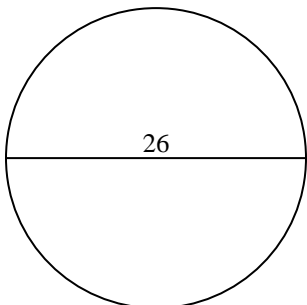
7)



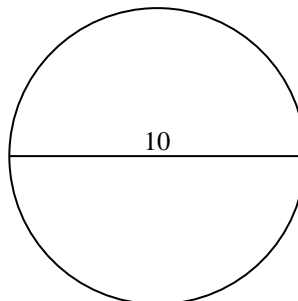
8)



9)



10)



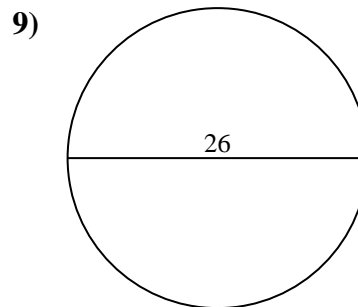
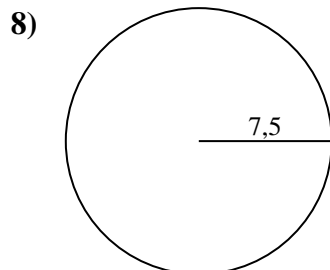
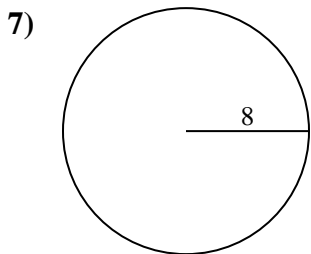
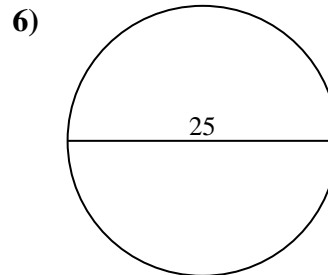
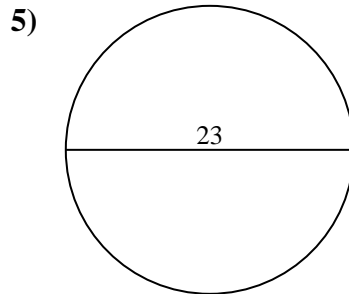
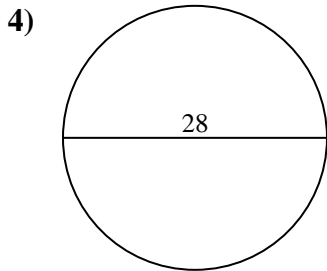
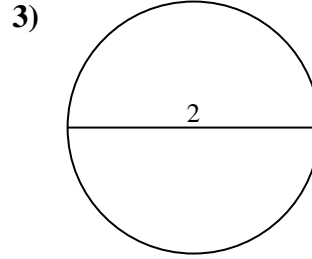
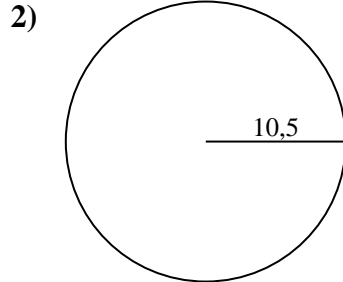
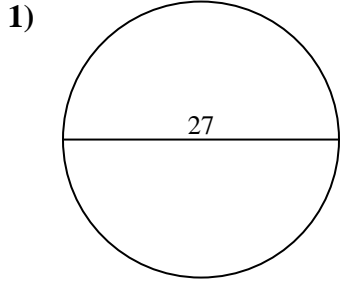
Réponses

1.	<u>572,6</u>	<u>84,8</u>
2.	<u>346,4</u>	<u>66</u>
3.	<u>3,1</u>	<u>6,3</u>
4.	<u>615,8</u>	<u>88</u>
5.	<u>415,5</u>	<u>72,3</u>
6.	<u>490,9</u>	<u>78,5</u>
7.	<u>201,1</u>	<u>50,3</u>
8.	<u>176,7</u>	<u>47,1</u>
9.	<u>530,9</u>	<u>81,7</u>
10.	<u>78,5</u>	<u>31,4</u>



Calculez l'aire et la circonférence de chaque cercle. Les cercles ne sont pas à l'échelle.

3,1	346,4	530,9	6,3	572,6
66	490,9	201,1	415,5	176,7
47,1	615,8	88	78,5	72,3
81,7	50,3	84,8		



Réponses

1. _____
2. _____
3. _____
4. _____
5. _____
6. _____
7. _____
8. _____
9. _____