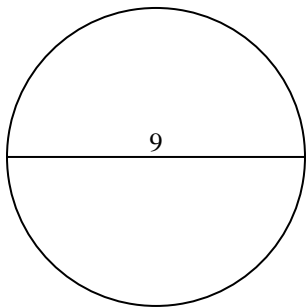


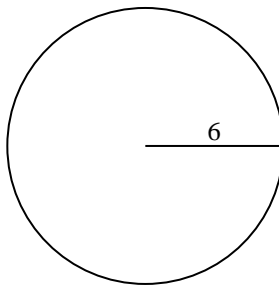


Calculez l'aire et la circonférence de chaque cercle. Les cercles ne sont pas à l'échelle.

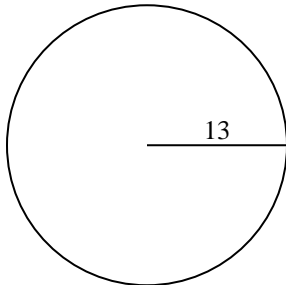
1)



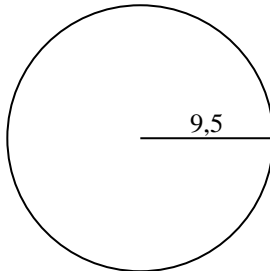
2)



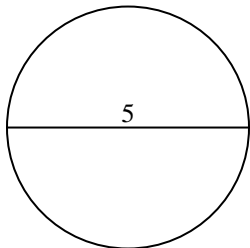
3)



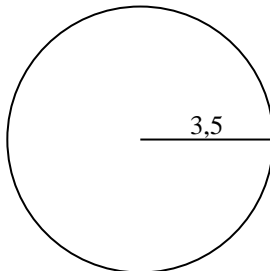
4)



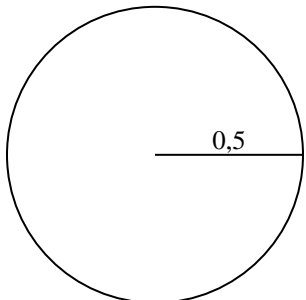
5)



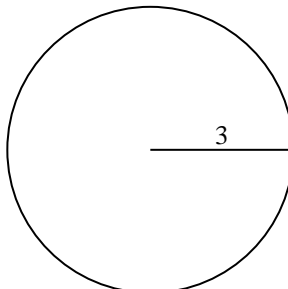
6)



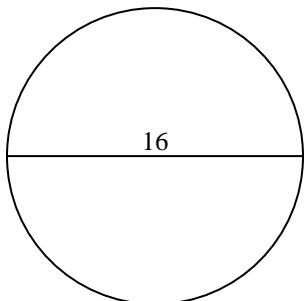
7)



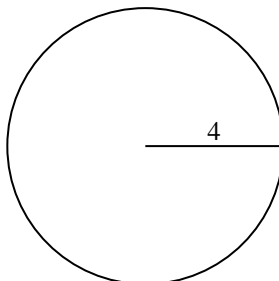
8)



9)



10)



Réponses

1. _____

2. _____

3. _____

4. _____

5. _____

6. _____

7. _____

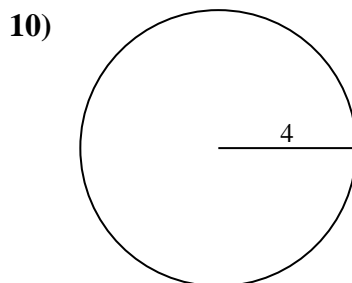
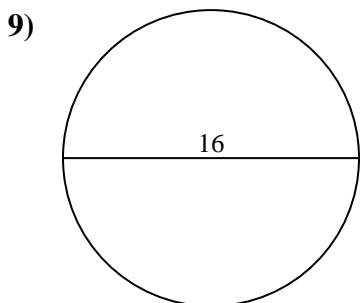
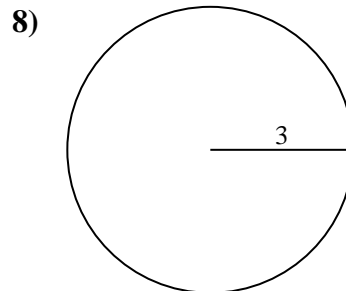
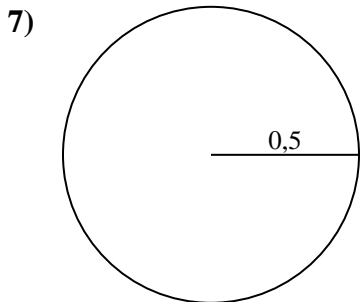
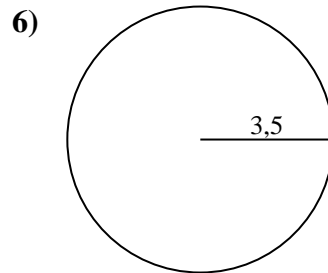
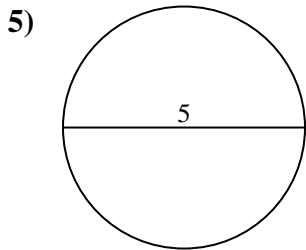
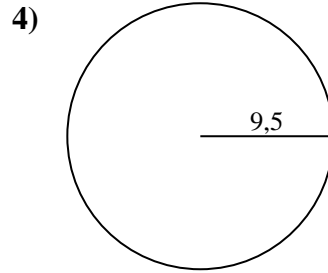
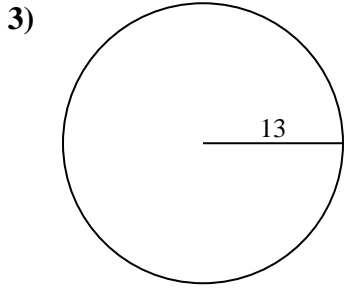
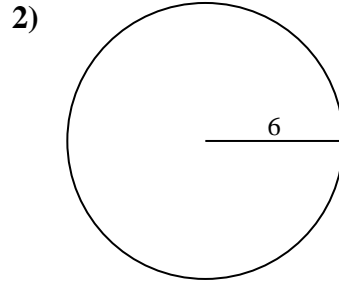
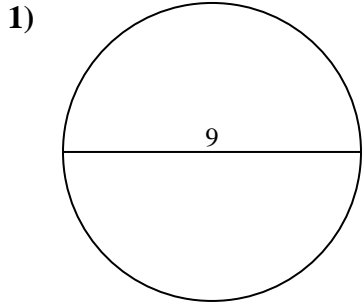
8. _____

9. _____

10. _____



Calculez l'aire et la circonférence de chaque cercle. Les cercles ne sont pas à l'échelle.



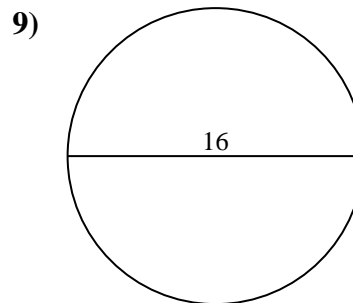
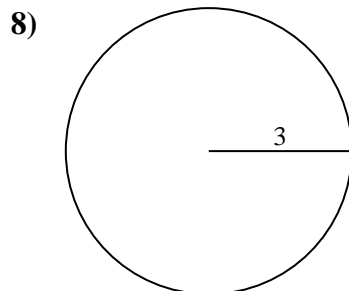
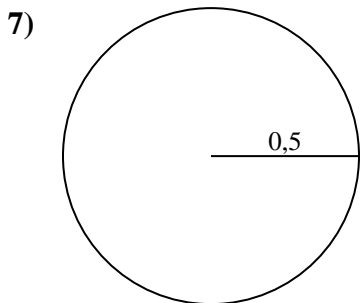
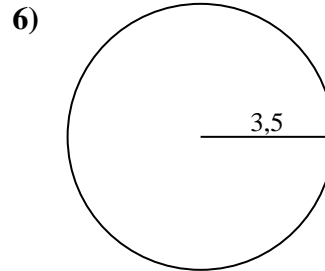
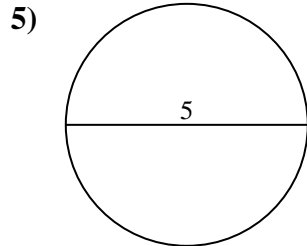
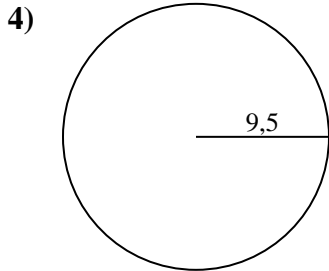
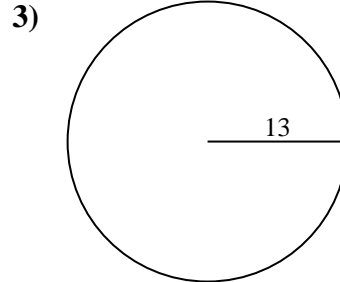
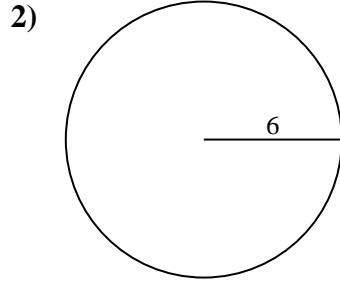
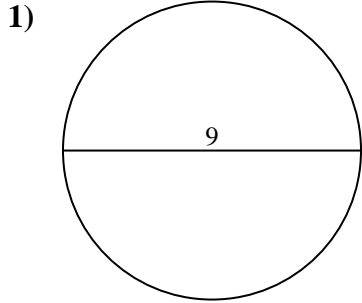
Réponses

1.	<u>63,6</u>	<u>28,3</u>
2.	<u>113,1</u>	<u>37,7</u>
3.	<u>530,9</u>	<u>81,7</u>
4.	<u>283,5</u>	<u>59,7</u>
5.	<u>19,6</u>	<u>15,7</u>
6.	<u>38,5</u>	<u>22</u>
7.	<u>0,8</u>	<u>3,1</u>
8.	<u>28,3</u>	<u>18,8</u>
9.	<u>201,1</u>	<u>50,3</u>
10.	<u>50,3</u>	<u>25,1</u>



Calculez l'aire et la circonférence de chaque cercle. Les cercles ne sont pas à l'échelle.

18,8	0,8	59,7	28,3	201,1
38,5	37,7	63,6	15,7	19,6
28,3	50,3	81,7	283,5	530,9
22	3,1	113,1		



Réponses

1. _____
2. _____
3. _____
4. _____
5. _____
6. _____
7. _____
8. _____
9. _____