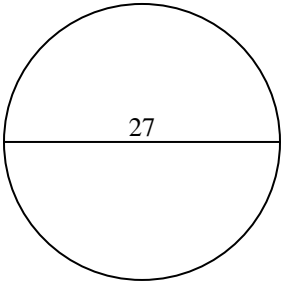


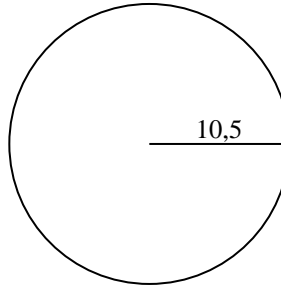


Calculez l'aire de chaque cercle. Les cercles ne sont pas à l'échelle.

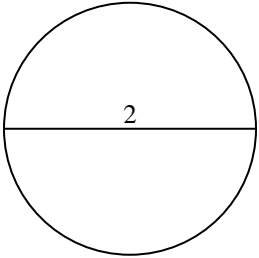
1)



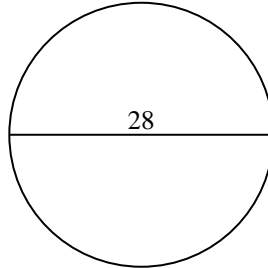
2)



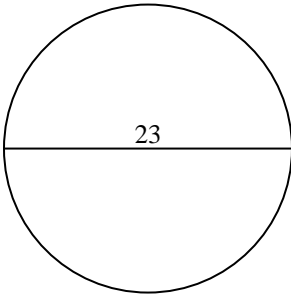
3)



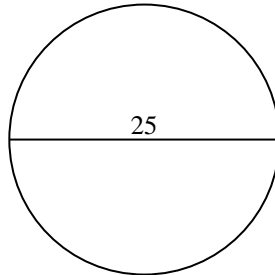
4)



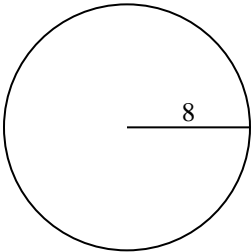
5)



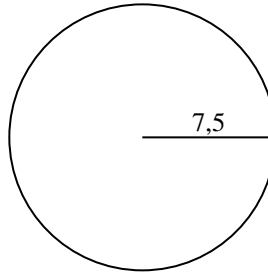
6)



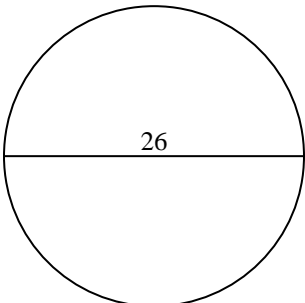
7)



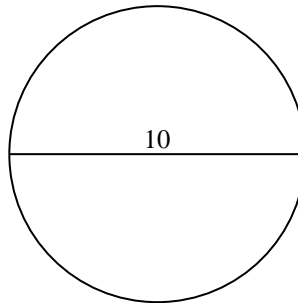
8)



9)



10)

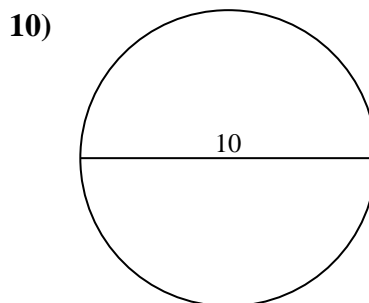
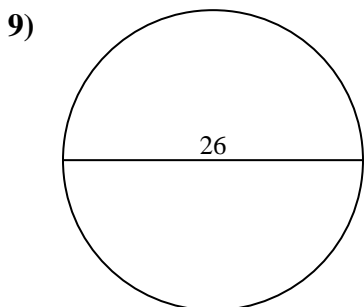
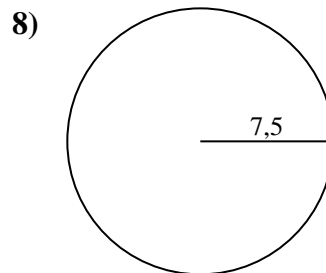
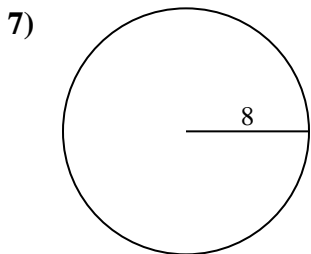
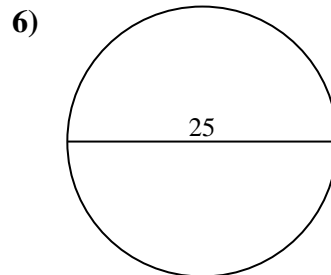
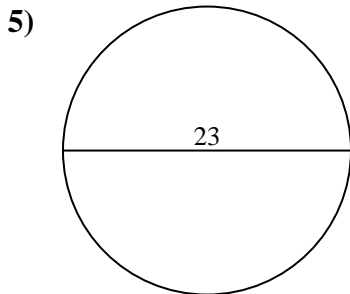
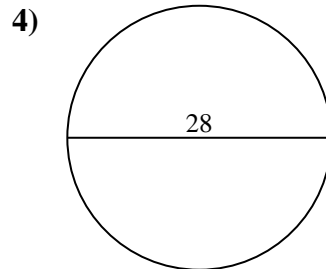
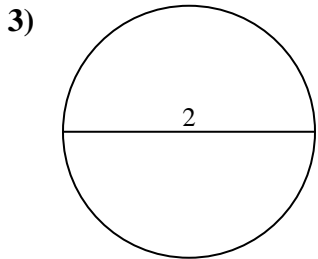
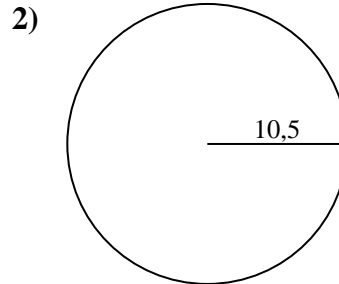
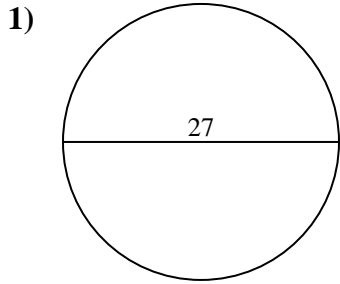


**Réponses**

- 1. \_\_\_\_\_
- 2. \_\_\_\_\_
- 3. \_\_\_\_\_
- 4. \_\_\_\_\_
- 5. \_\_\_\_\_
- 6. \_\_\_\_\_
- 7. \_\_\_\_\_
- 8. \_\_\_\_\_
- 9. \_\_\_\_\_
- 10. \_\_\_\_\_



Calculez l'aire de chaque cercle. Les cercles ne sont pas à l'échelle.



**Réponses**

1. 572,6

2. 346,4

3. 3,1

4. 615,8

5. 415,5

6. 490,9

7. 201,1

8. 176,7

9. 530,9

10. 78,5

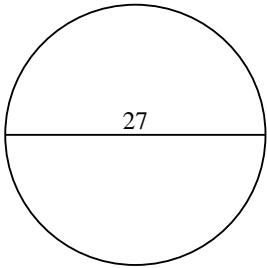


Calculez l'aire de chaque cercle. Les cercles ne sont pas à l'échelle.

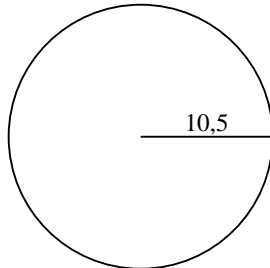
530,9	3,1	615,8	201,1	490,9
572,6	415,5	176,7	346,4	

**Réponses**

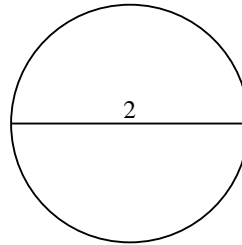
1)



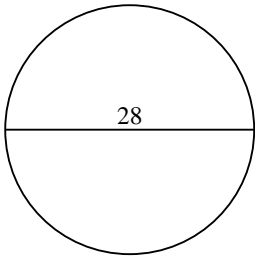
2)



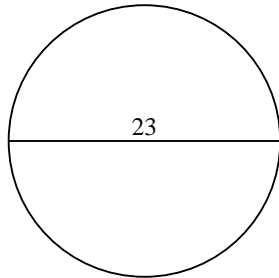
3)



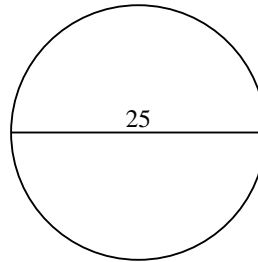
4)



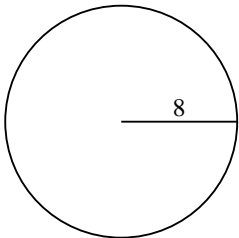
5)



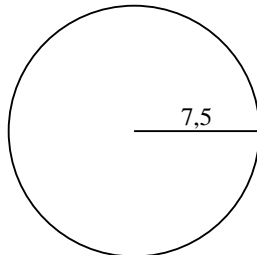
6)



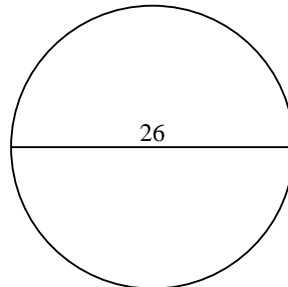
7)



8)



9)



- 1. \_\_\_\_\_
- 2. \_\_\_\_\_
- 3. \_\_\_\_\_
- 4. \_\_\_\_\_
- 5. \_\_\_\_\_
- 6. \_\_\_\_\_
- 7. \_\_\_\_\_
- 8. \_\_\_\_\_
- 9. \_\_\_\_\_