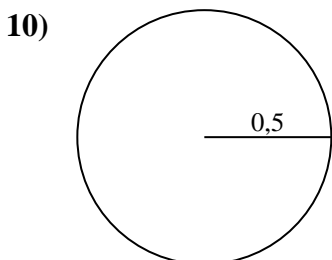
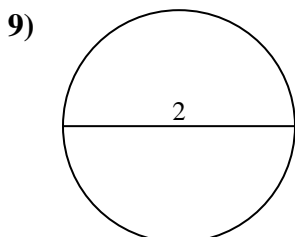
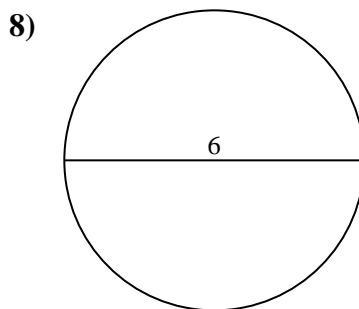
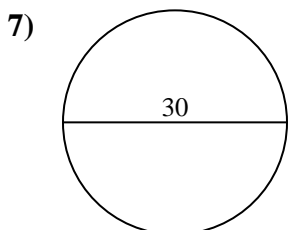
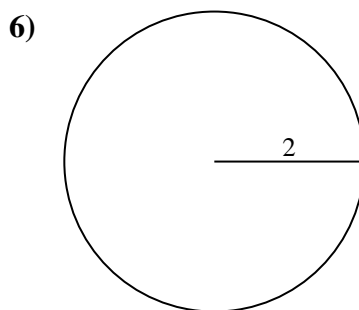
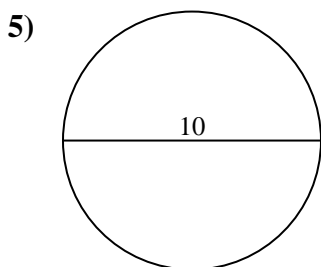
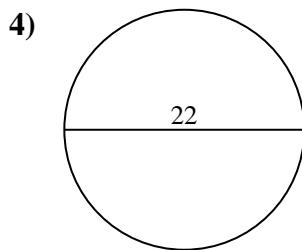
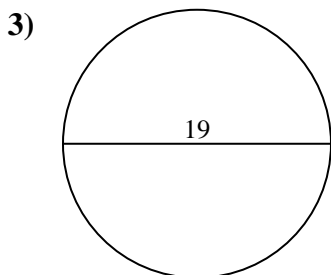
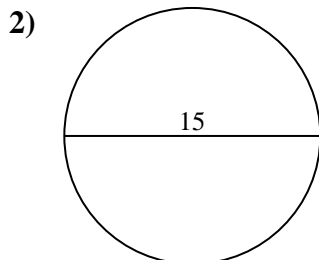
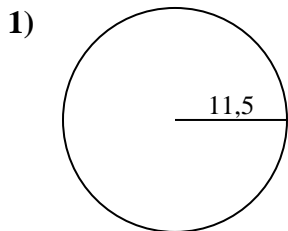




Calculez l'aire de chaque cercle. Les cercles ne sont pas à l'échelle.

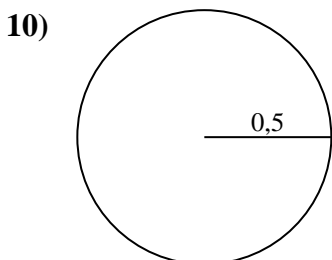
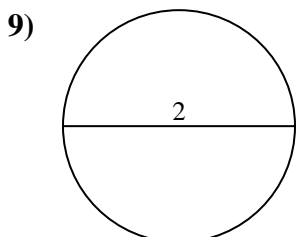
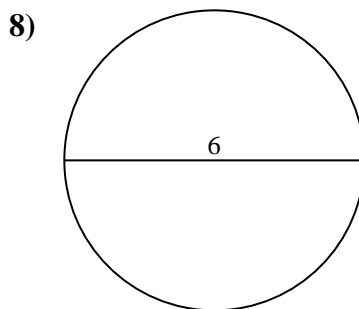
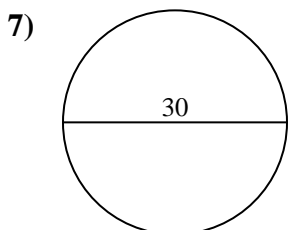
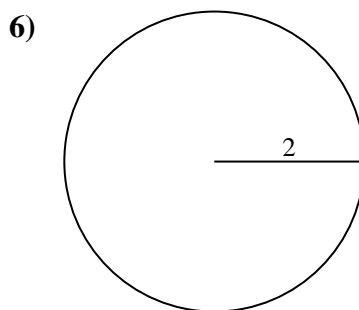
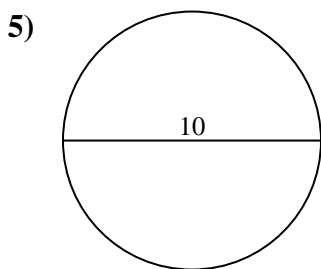
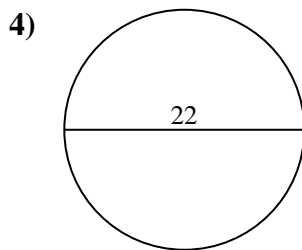
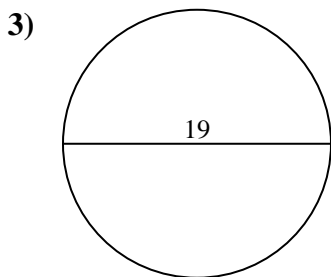
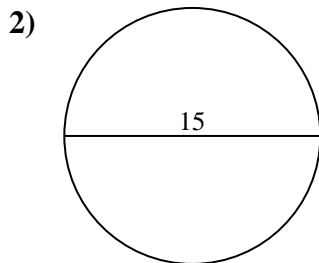
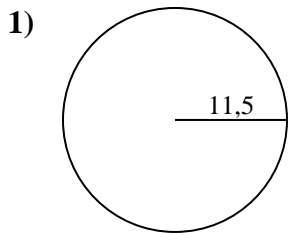


Réponses

- 1. _____
- 2. _____
- 3. _____
- 4. _____
- 5. _____
- 6. _____
- 7. _____
- 8. _____
- 9. _____
- 10. _____



Calculez l'aire de chaque cercle. Les cercles ne sont pas à l'échelle.

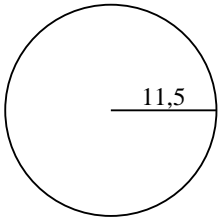
**Réponses**1. 415,52. 176,73. 283,54. 380,15. 78,56. 12,67. 706,98. 28,39. 3,110. 0,8



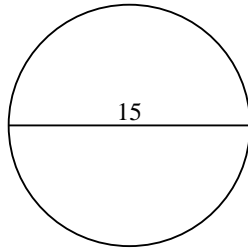
Calculez l'aire de chaque cercle. Les cercles ne sont pas à l'échelle.

283,5	176,7	415,5	3,1	78,5
380,1	706,9	28,3	12,6	

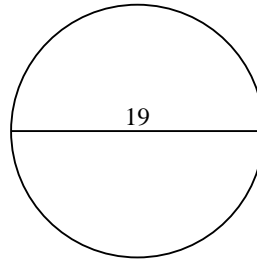
1)



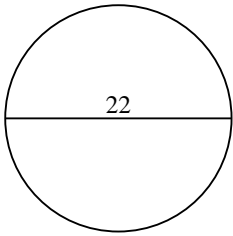
2)



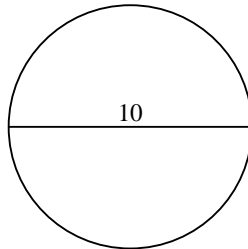
3)



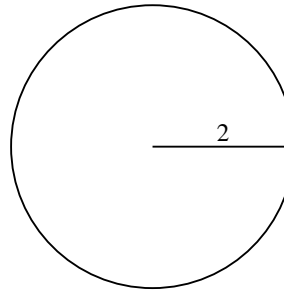
4)



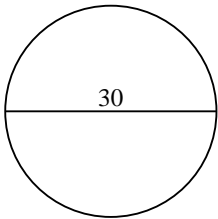
5)



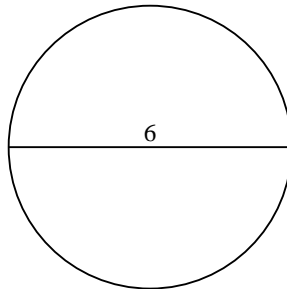
6)



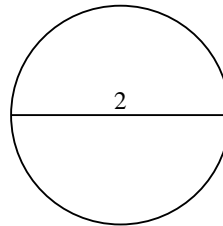
7)



8)



9)



Réponses

- 1. _____
- 2. _____
- 3. _____
- 4. _____
- 5. _____
- 6. _____
- 7. _____
- 8. _____
- 9. _____