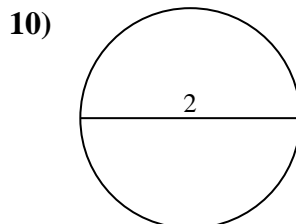
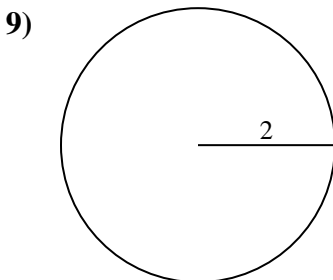
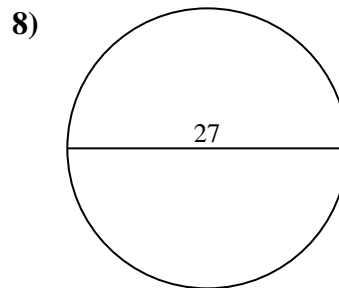
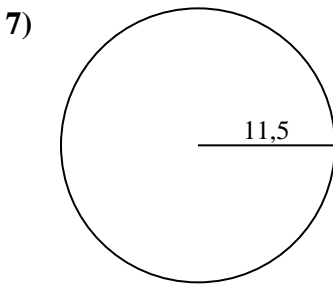
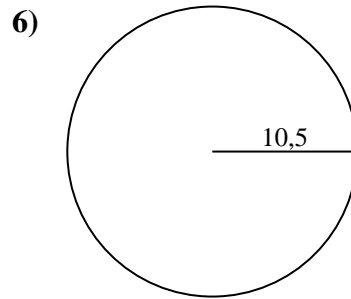
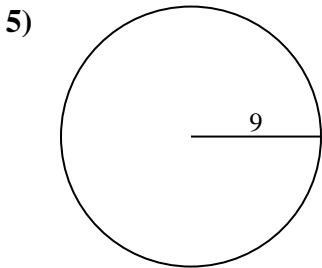
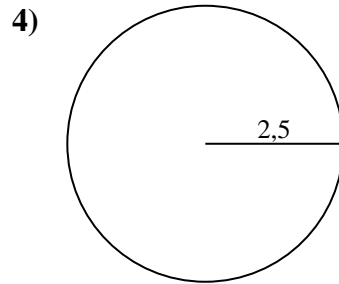
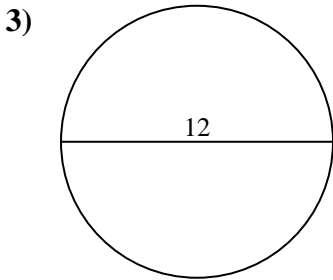
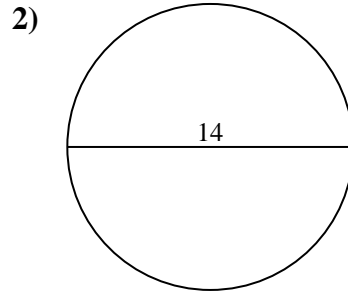
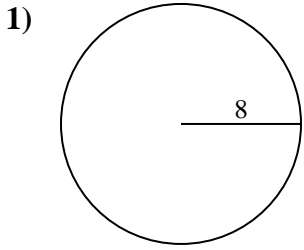




Calculez l'aire de chaque cercle. Les cercles ne sont pas à l'échelle.



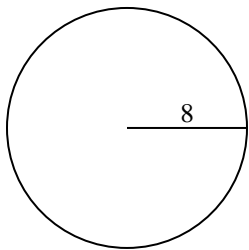
**Réponses**

1. \_\_\_\_\_
2. \_\_\_\_\_
3. \_\_\_\_\_
4. \_\_\_\_\_
5. \_\_\_\_\_
6. \_\_\_\_\_
7. \_\_\_\_\_
8. \_\_\_\_\_
9. \_\_\_\_\_
10. \_\_\_\_\_

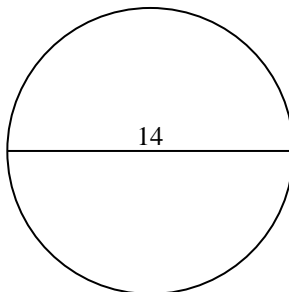


Calculez l'aire de chaque cercle. Les cercles ne sont pas à l'échelle.

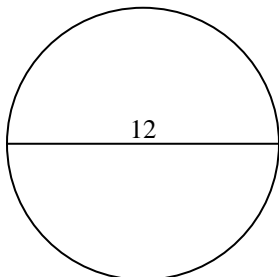
1)



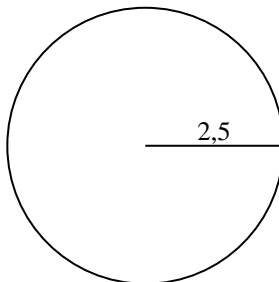
2)



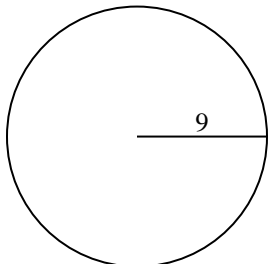
3)



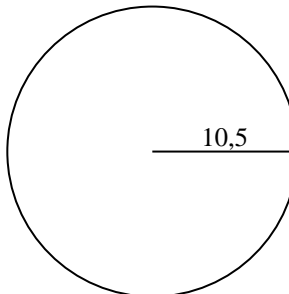
4)



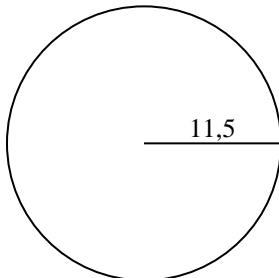
5)



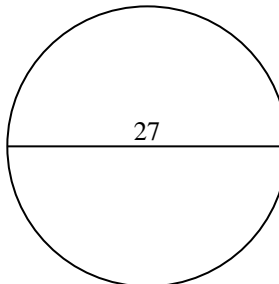
6)



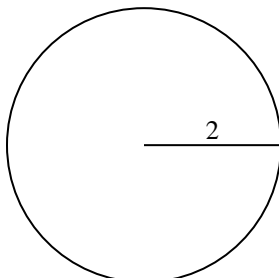
7)



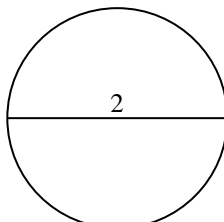
8)



9)



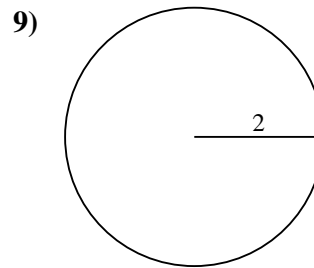
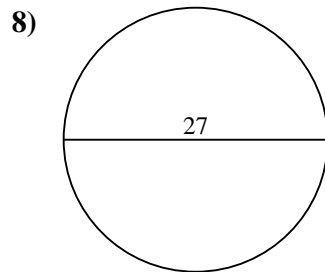
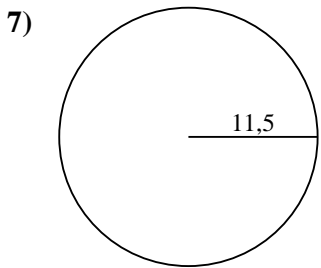
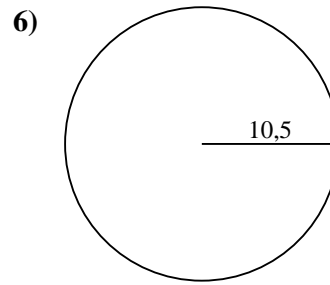
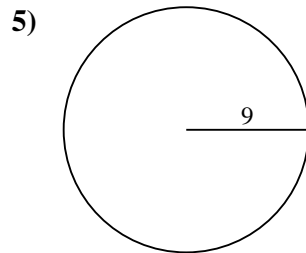
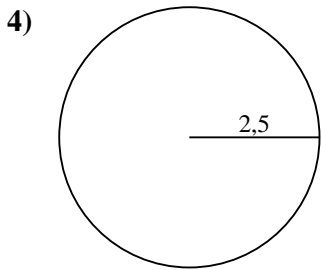
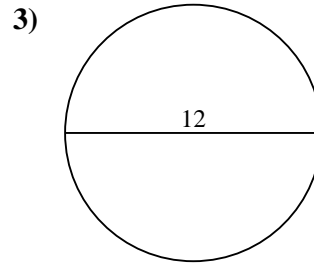
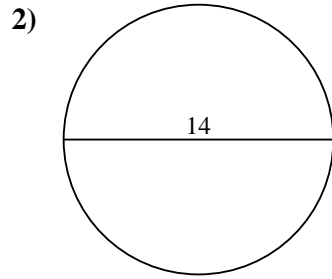
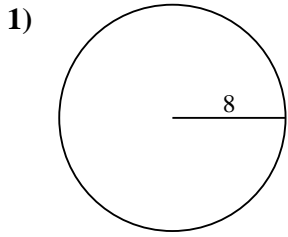
10)

**Réponses**1. 201,12. 153,93. 113,14. 19,65. 254,56. 346,47. 415,58. 572,69. 12,610. 3,1



Calculez l'aire de chaque cercle. Les cercles ne sont pas à l'échelle.

572,6	113,1	415,5	12,6	346,4
201,1	153,9	254,5	19,6	



**Réponses**

1. \_\_\_\_\_
2. \_\_\_\_\_
3. \_\_\_\_\_
4. \_\_\_\_\_
5. \_\_\_\_\_
6. \_\_\_\_\_
7. \_\_\_\_\_
8. \_\_\_\_\_
9. \_\_\_\_\_