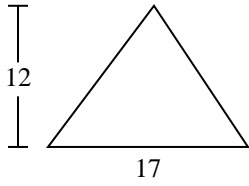


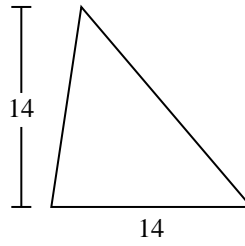


Calculez l'aire de chaque triangle. Les triangles ne sont pas à l'échelle.

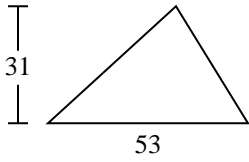
1)



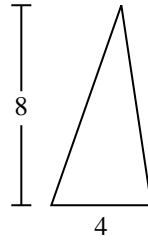
2)



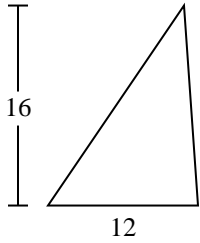
3)



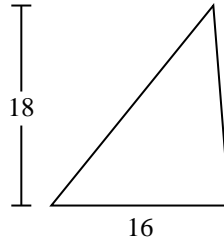
4)



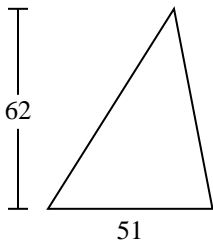
5)



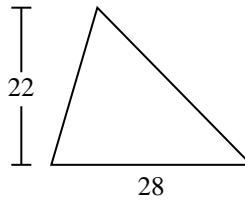
6)



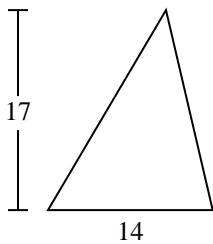
7)



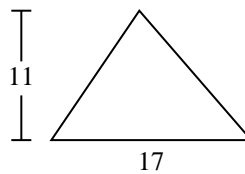
8)



9)



10)



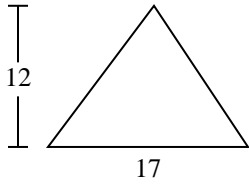
Réponses

- 1. _____
- 2. _____
- 3. _____
- 4. _____
- 5. _____
- 6. _____
- 7. _____
- 8. _____
- 9. _____
- 10. _____

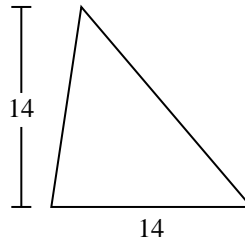


Calculez l'aire de chaque triangle. Les triangles ne sont pas à l'échelle.

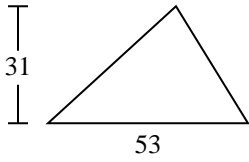
1)



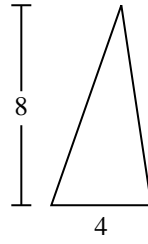
2)



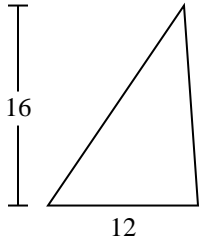
3)



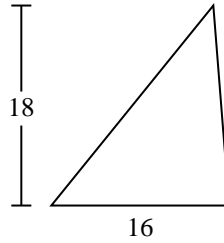
4)



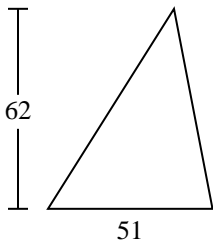
5)



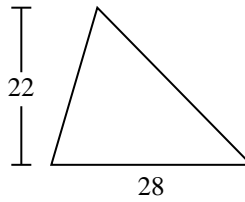
6)



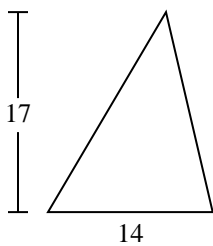
7)



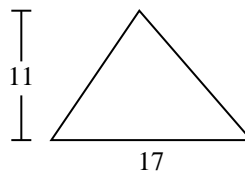
8)



9)



10)

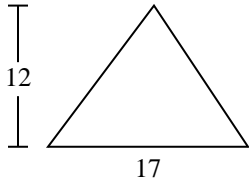
**Réponses**1. **102**2. **98**3. **821,5**4. **16**5. **96**6. **144**7. **1 581**8. **308**9. **119**10. **93,5**



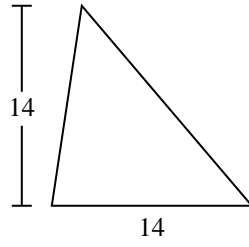
Calculez l'aire de chaque triangle. Les triangles ne sont pas à l'échelle.

| | | | | |
|-----|-------|-----|-----|----|
| 102 | 1 581 | 308 | 144 | 16 |
| 119 | 821,5 | 98 | 96 | |

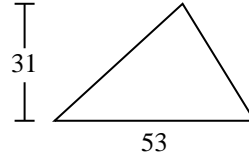
1)



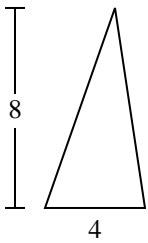
2)



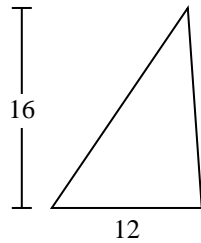
3)



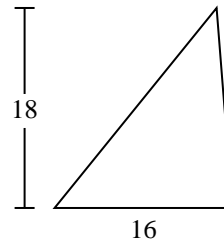
4)



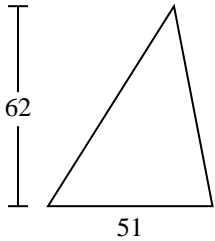
5)



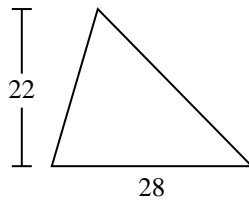
6)



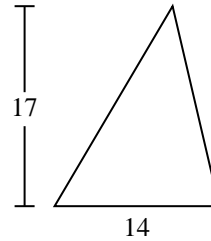
7)



8)



9)



Réponses

1. _____
2. _____
3. _____
4. _____
5. _____
6. _____
7. _____
8. _____
9. _____