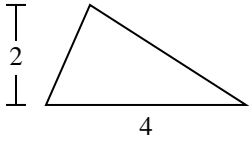


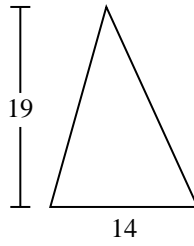


Calculez l'aire de chaque triangle. Les triangles ne sont pas à l'échelle.

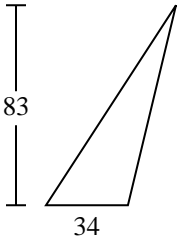
1)



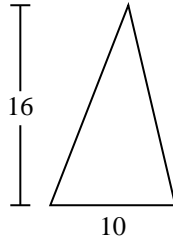
2)



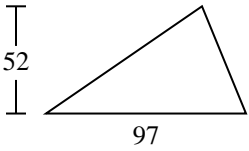
3)



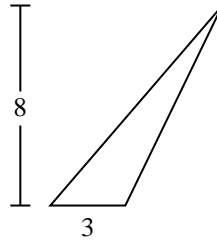
4)



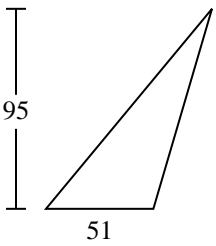
5)



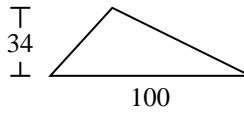
6)



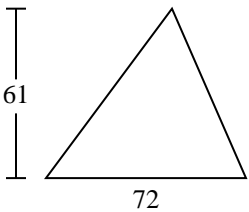
7)



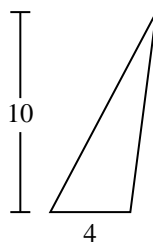
8)



9)



10)



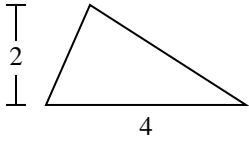
**Réponses**

1. \_\_\_\_\_
2. \_\_\_\_\_
3. \_\_\_\_\_
4. \_\_\_\_\_
5. \_\_\_\_\_
6. \_\_\_\_\_
7. \_\_\_\_\_
8. \_\_\_\_\_
9. \_\_\_\_\_
10. \_\_\_\_\_

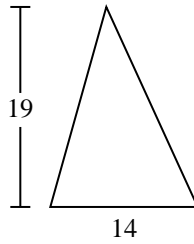


Calculez l'aire de chaque triangle. Les triangles ne sont pas à l'échelle.

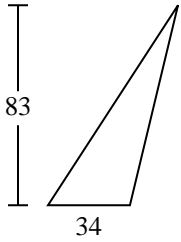
1)



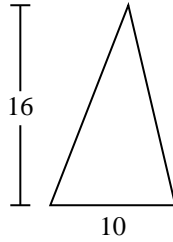
2)



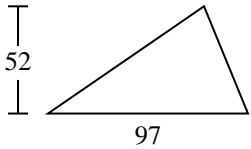
3)



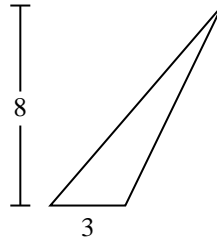
4)



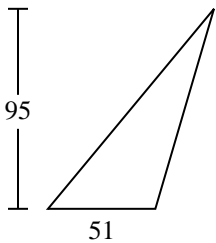
5)



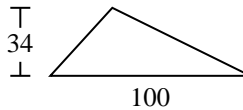
6)



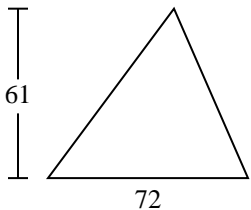
7)



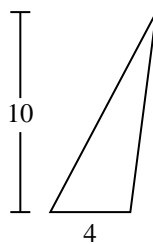
8)



9)



10)

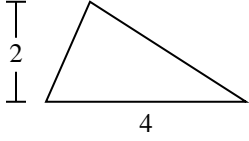
**Réponses**1. 42. 1333. 1 4114. 805. 2 5226. 127. 2 422,58. 1 7009. 2 19610. 20



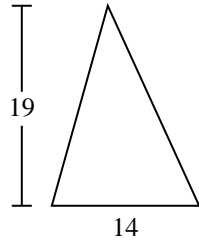
Calculez l'aire de chaque triangle. Les triangles ne sont pas à l'échelle.

133	4	1 411	2 522	2 196
1 700	2 422,5	80	12	

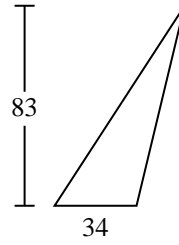
1)



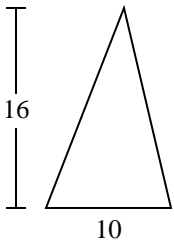
2)



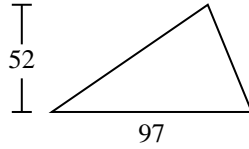
3)



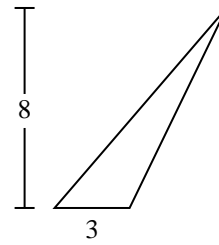
4)



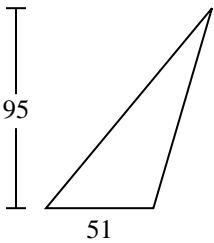
5)



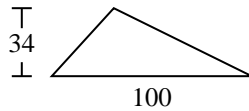
6)



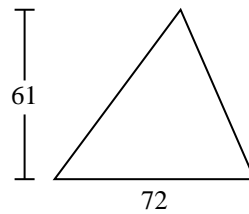
7)



8)



9)



**Réponses**

1. \_\_\_\_\_
2. \_\_\_\_\_
3. \_\_\_\_\_
4. \_\_\_\_\_
5. \_\_\_\_\_
6. \_\_\_\_\_
7. \_\_\_\_\_
8. \_\_\_\_\_
9. \_\_\_\_\_