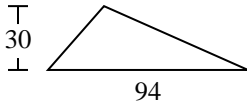


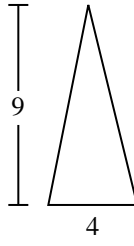


Calculez l'aire de chaque triangle. Les triangles ne sont pas à l'échelle.

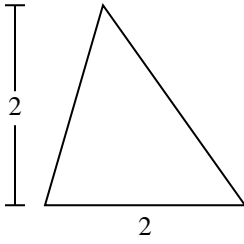
1)



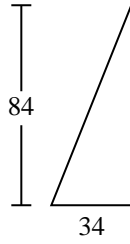
2)



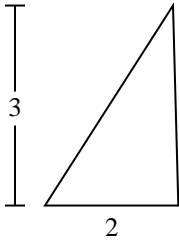
3)



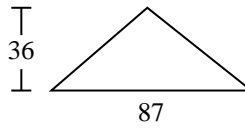
4)



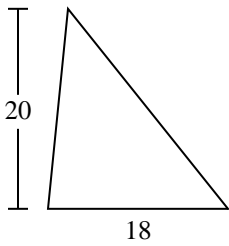
5)



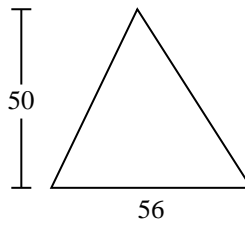
6)



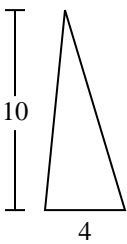
7)



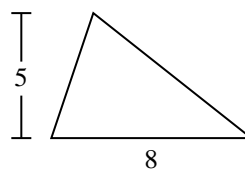
8)



9)



10)



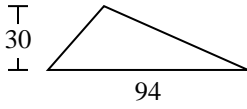
**Réponses**

- 1. \_\_\_\_\_
- 2. \_\_\_\_\_
- 3. \_\_\_\_\_
- 4. \_\_\_\_\_
- 5. \_\_\_\_\_
- 6. \_\_\_\_\_
- 7. \_\_\_\_\_
- 8. \_\_\_\_\_
- 9. \_\_\_\_\_
- 10. \_\_\_\_\_

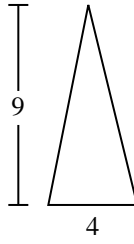


Calculez l'aire de chaque triangle. Les triangles ne sont pas à l'échelle.

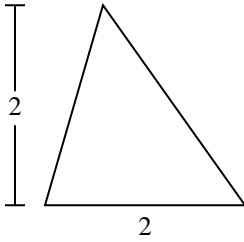
1)



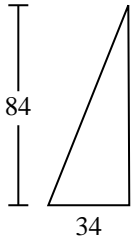
2)



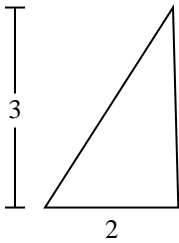
3)



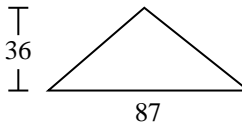
4)



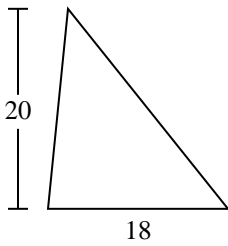
5)



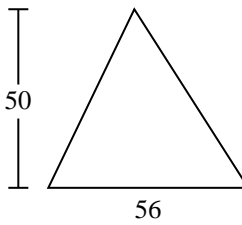
6)



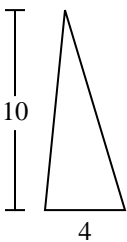
7)



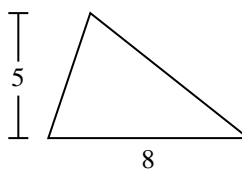
8)



9)



10)

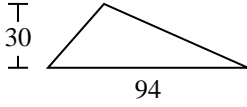
**Réponses**1. 1 4102. 183. 24. 1 4285. 36. 1 5667. 1808. 1 4009. 2010. 20



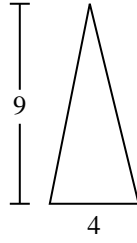
Calculez l'aire de chaque triangle. Les triangles ne sont pas à l'échelle.

180	1 428	18	1 566	1 400
3	2	20	1 410	

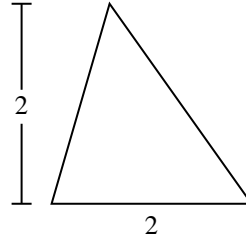
1)



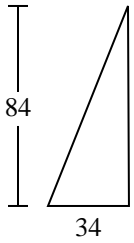
2)



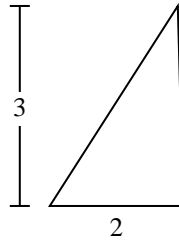
3)



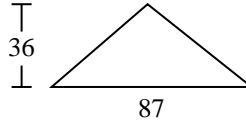
4)



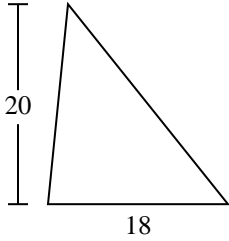
5)



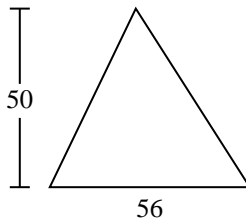
6)



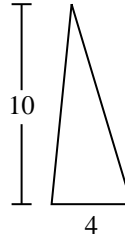
7)



8)



9)



**Réponses**

1. \_\_\_\_\_
2. \_\_\_\_\_
3. \_\_\_\_\_
4. \_\_\_\_\_
5. \_\_\_\_\_
6. \_\_\_\_\_
7. \_\_\_\_\_
8. \_\_\_\_\_
9. \_\_\_\_\_