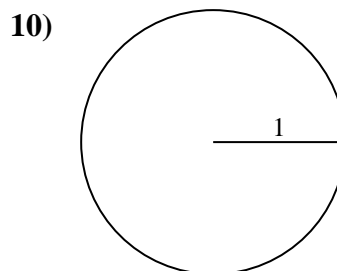
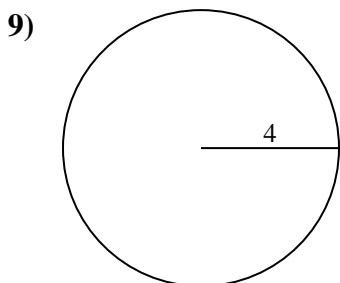
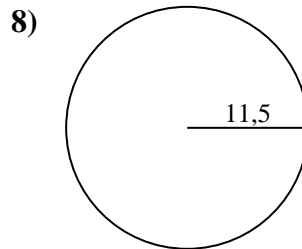
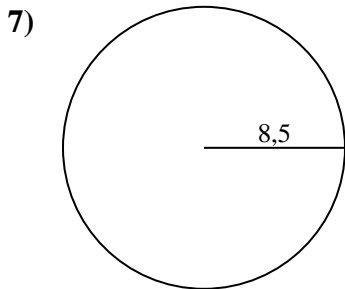
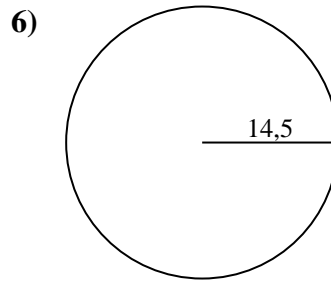
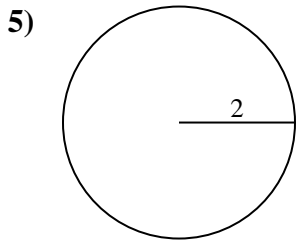
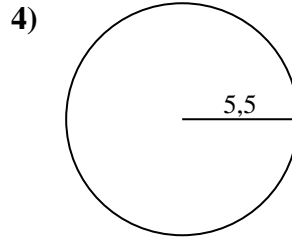
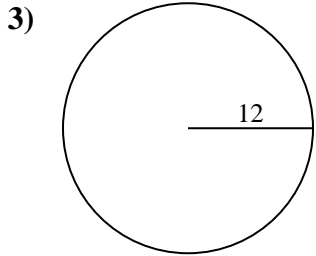
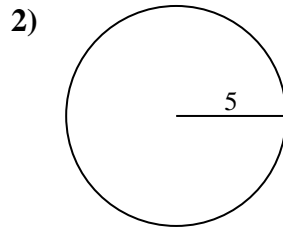
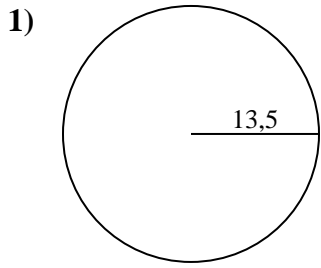




Calculez la circonférence de chaque cercle. Les cercles ne sont pas à l'échelle.

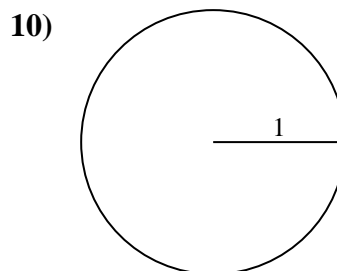
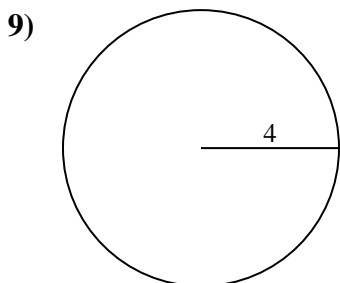
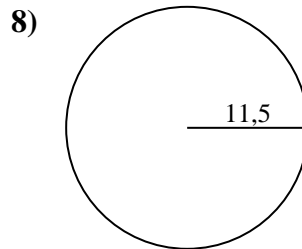
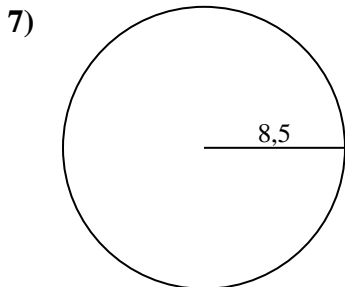
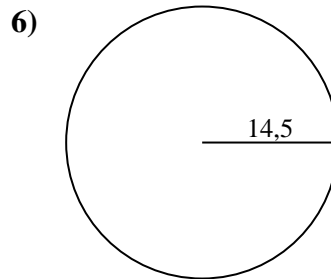
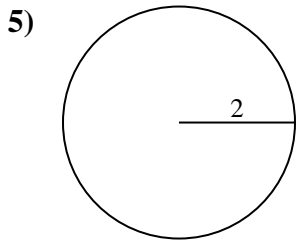
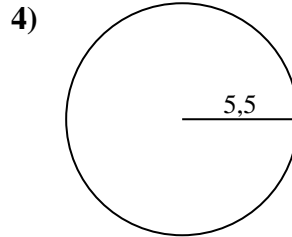
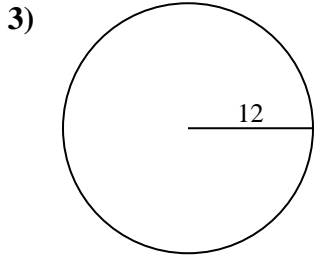
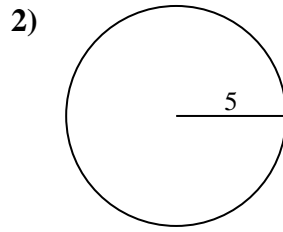
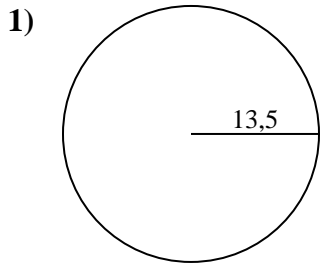


Réponses

- 1. _____
- 2. _____
- 3. _____
- 4. _____
- 5. _____
- 6. _____
- 7. _____
- 8. _____
- 9. _____
- 10. _____



Calculez la circonférence de chaque cercle. Les cercles ne sont pas à l'échelle.

**Réponses**1. 84,82 cm2. 31,42 cm3. 75,4 cm4. 34,56 cm5. 12,57 cm6. 91,11 cm7. 53,41 cm8. 72,26 cm9. 25,13 cm10. 6,28 cm



Calculez la circonférence de chaque cercle. Les cercles ne sont pas à l'échelle.

53,41 cm

84,82 cm

31,42 cm

72,26 cm

34,56 cm

12,57 cm

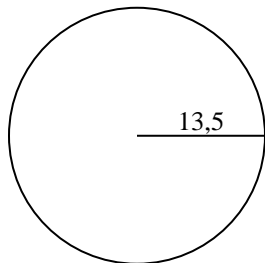
75,4 cm

91,11 cm

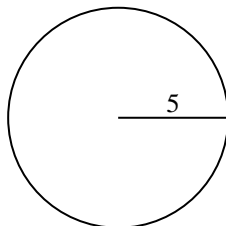
6,28 cm

25,13 cm

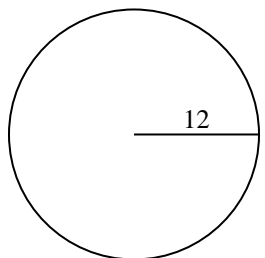
1)



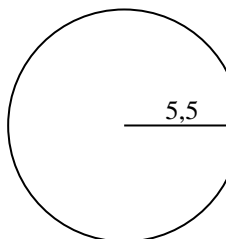
2)



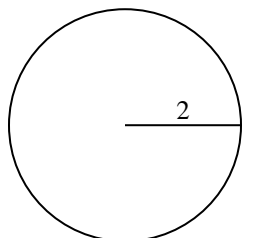
3)



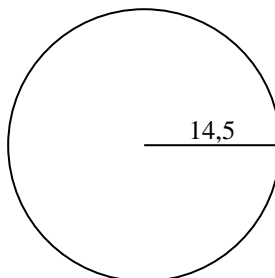
4)



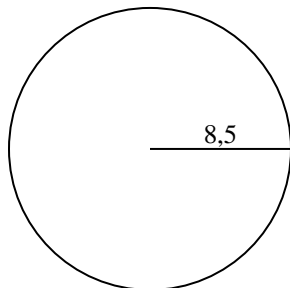
5)



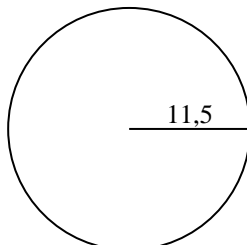
6)



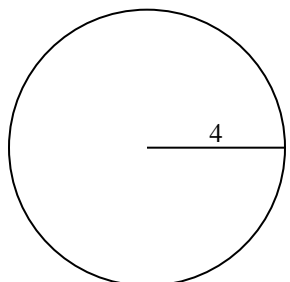
7)



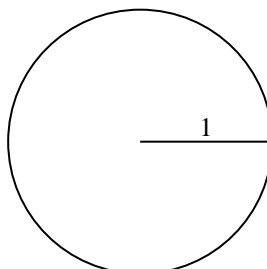
8)



9)



10)

**Réponses**

1. _____

2. _____

3. _____

4. _____

5. _____

6. _____

7. _____

8. _____

9. _____

10. _____