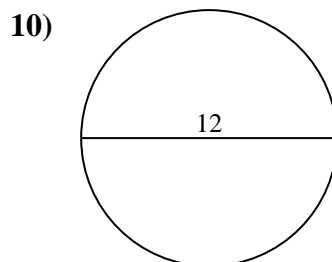
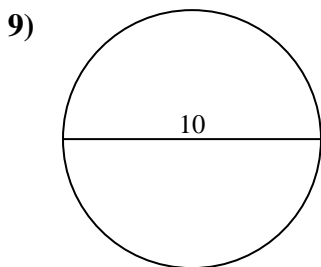
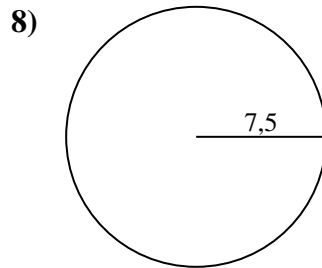
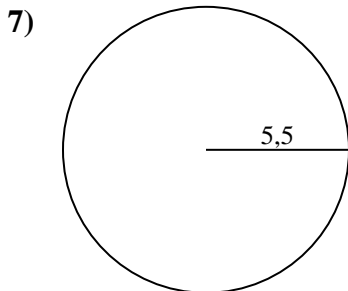
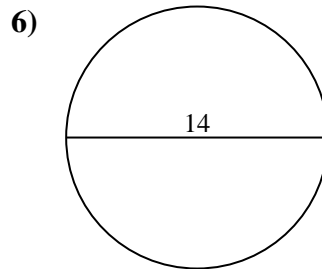
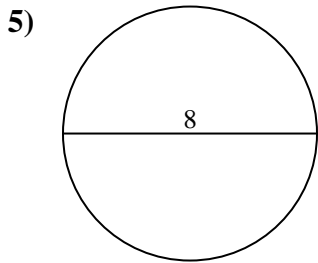
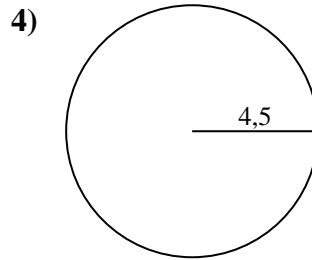
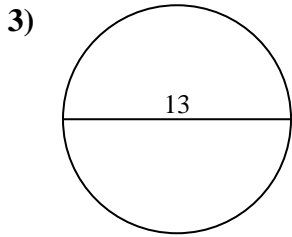
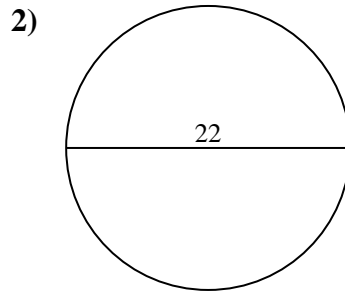
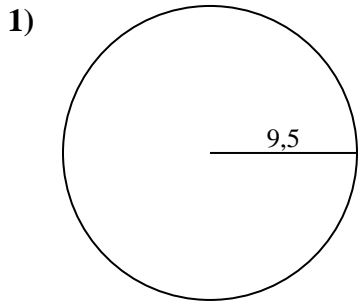




Calculez la circonférence de chaque cercle. Les cercles ne sont pas à l'échelle.

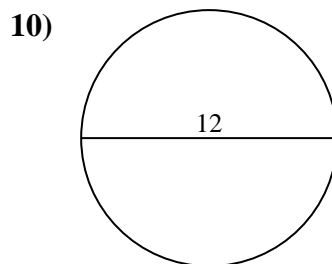
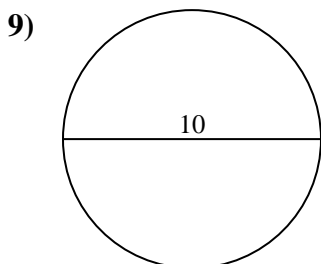
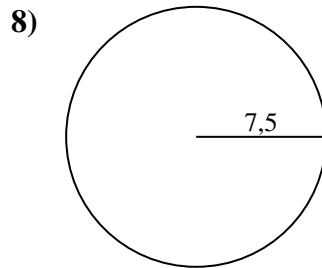
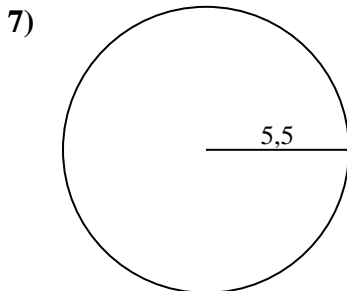
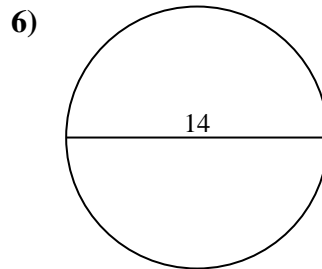
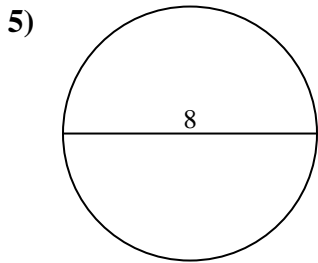
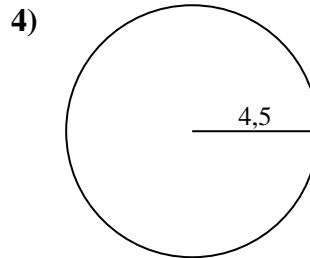
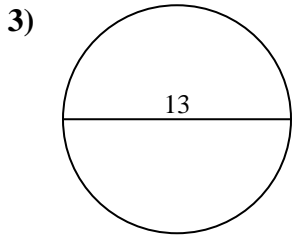
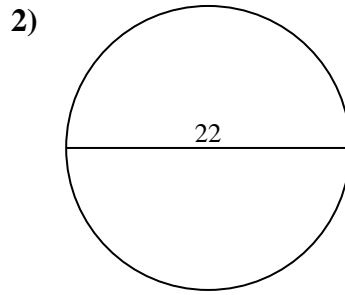
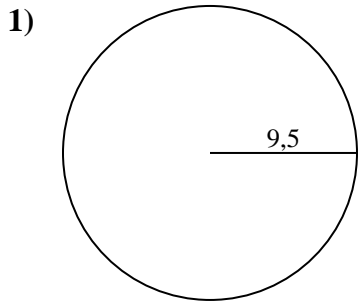


**Réponses**

- 1. \_\_\_\_\_
- 2. \_\_\_\_\_
- 3. \_\_\_\_\_
- 4. \_\_\_\_\_
- 5. \_\_\_\_\_
- 6. \_\_\_\_\_
- 7. \_\_\_\_\_
- 8. \_\_\_\_\_
- 9. \_\_\_\_\_
- 10. \_\_\_\_\_



Calculez la circonférence de chaque cercle. Les cercles ne sont pas à l'échelle.

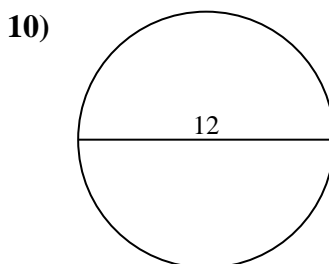
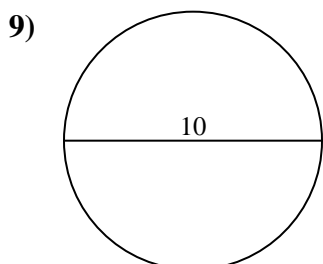
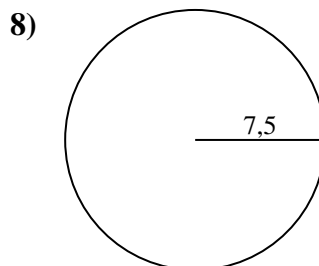
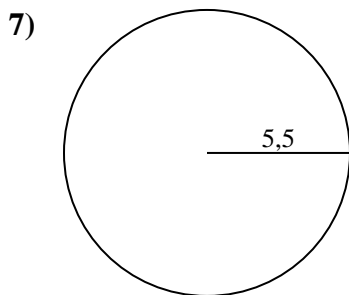
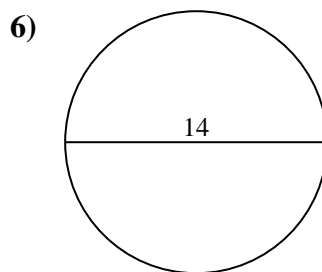
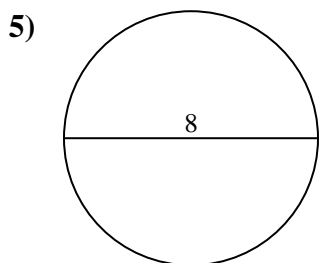
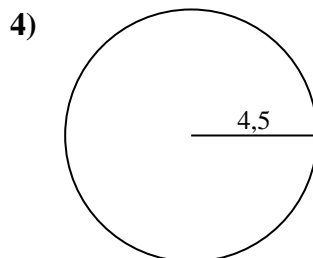
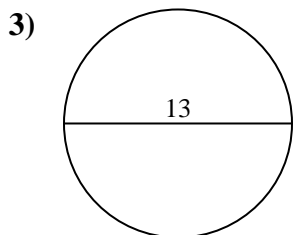
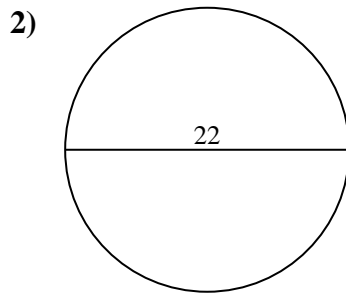
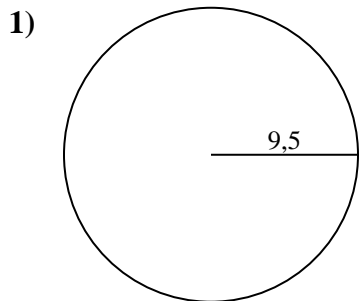
**Réponses**1. 59,69 cm2. 69,12 cm3. 40,84 cm4. 28,27 cm5. 25,13 cm6. 43,98 cm7. 34,56 cm8. 47,12 cm9. 31,42 cm10. 37,7 cm



Calculez la circonférence de chaque cercle. Les cercles ne sont pas à l'échelle.

59,69 cm	25,13 cm	31,42 cm	40,84 cm	34,56 cm
28,27 cm	37,7 cm	69,12 cm	47,12 cm	43,98 cm

**Réponses**



- 1. \_\_\_\_\_
- 2. \_\_\_\_\_
- 3. \_\_\_\_\_
- 4. \_\_\_\_\_
- 5. \_\_\_\_\_
- 6. \_\_\_\_\_
- 7. \_\_\_\_\_
- 8. \_\_\_\_\_
- 9. \_\_\_\_\_
- 10. \_\_\_\_\_