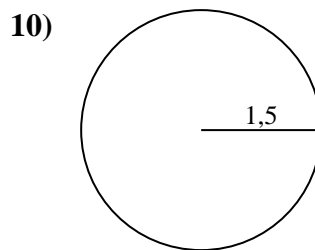
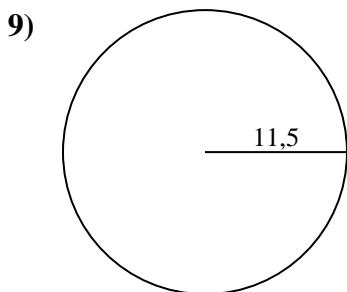
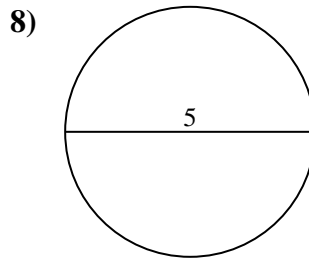
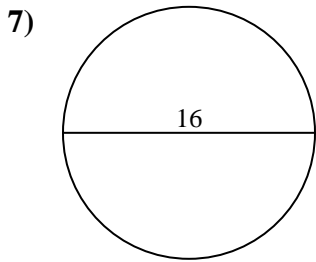
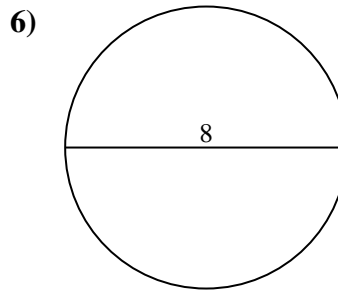
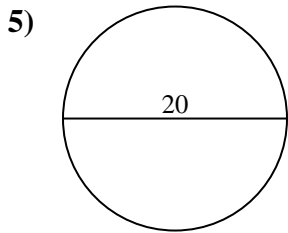
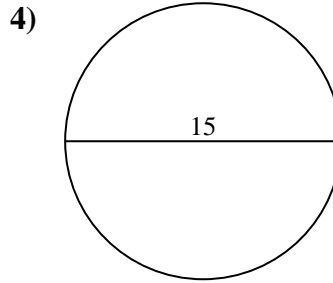
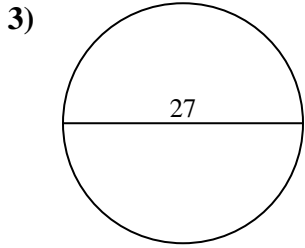
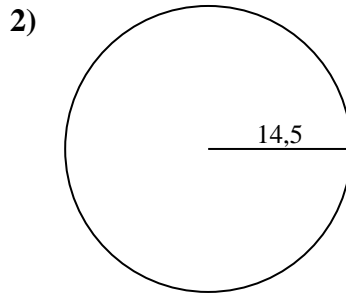
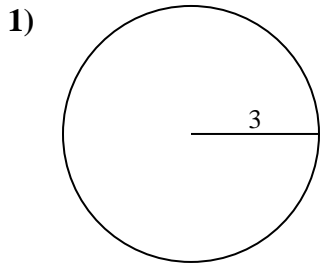




Calculez la circonférence de chaque cercle. Les cercles ne sont pas à l'échelle.



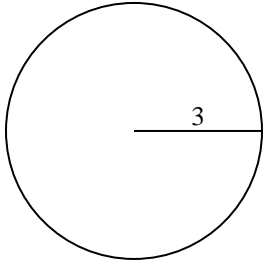
**Réponses**

- 1. \_\_\_\_\_
- 2. \_\_\_\_\_
- 3. \_\_\_\_\_
- 4. \_\_\_\_\_
- 5. \_\_\_\_\_
- 6. \_\_\_\_\_
- 7. \_\_\_\_\_
- 8. \_\_\_\_\_
- 9. \_\_\_\_\_
- 10. \_\_\_\_\_

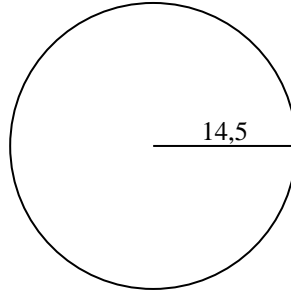


Calculez la circonférence de chaque cercle. Les cercles ne sont pas à l'échelle.

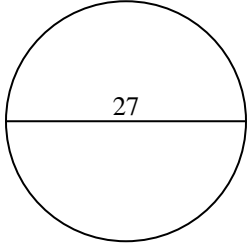
1)



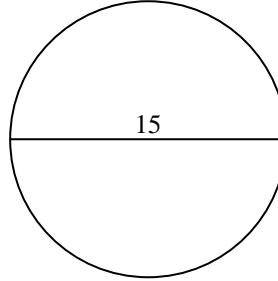
2)



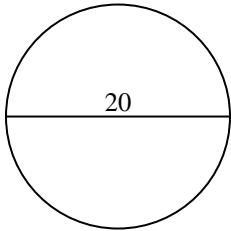
3)



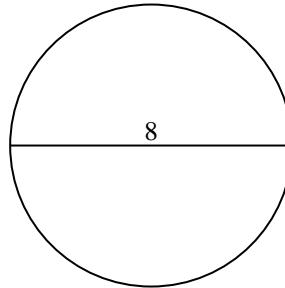
4)



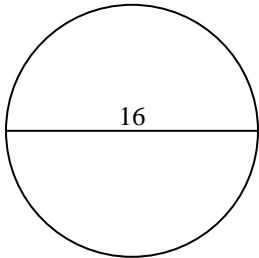
5)



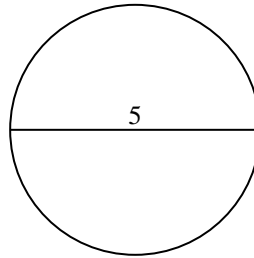
6)



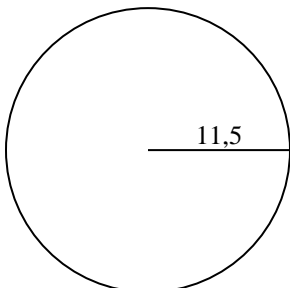
7)



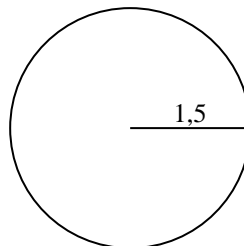
8)



9)



10)

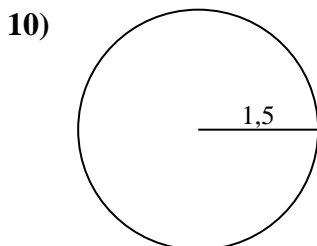
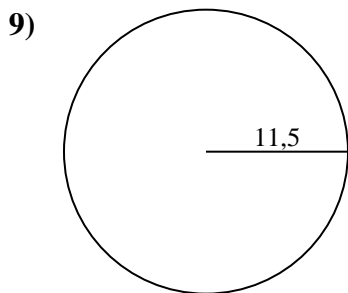
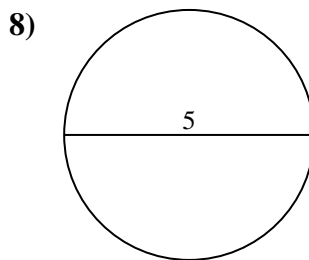
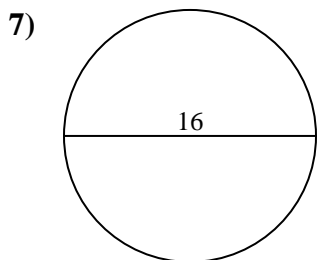
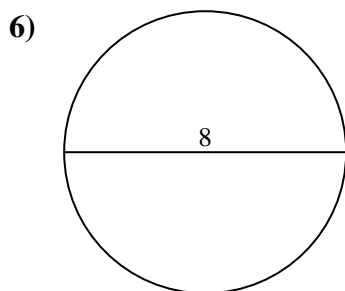
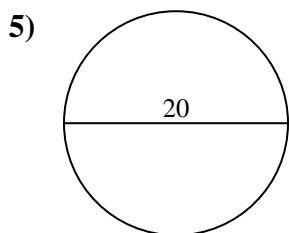
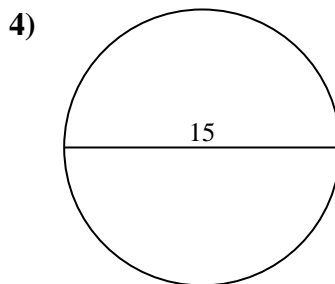
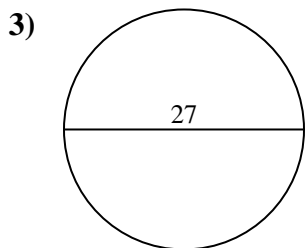
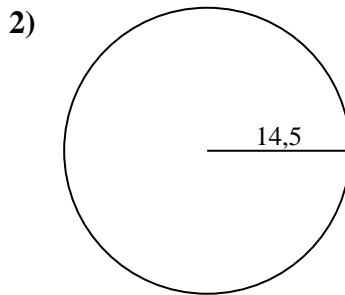
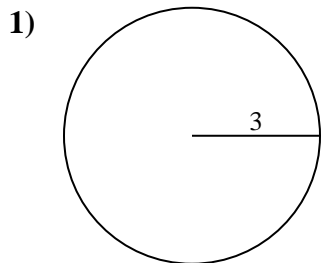
**Réponses**1. 18,85 cm2. 91,11 cm3. 84,82 cm4. 47,12 cm5. 62,83 cm6. 25,13 cm7. 50,27 cm8. 15,71 cm9. 72,26 cm10. 9,42 cm



Calculez la circonférence de chaque cercle. Les cercles ne sont pas à l'échelle.

72,26 cm	9,42 cm	18,85 cm	62,83 cm	50,27 cm
91,11 cm	47,12 cm	84,82 cm	15,71 cm	25,13 cm

**Réponses**



- 1. \_\_\_\_\_
- 2. \_\_\_\_\_
- 3. \_\_\_\_\_
- 4. \_\_\_\_\_
- 5. \_\_\_\_\_
- 6. \_\_\_\_\_
- 7. \_\_\_\_\_
- 8. \_\_\_\_\_
- 9. \_\_\_\_\_
- 10. \_\_\_\_\_