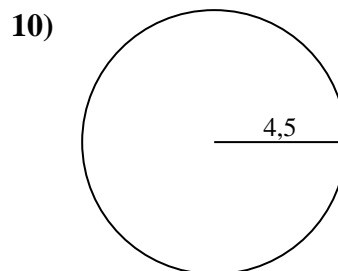
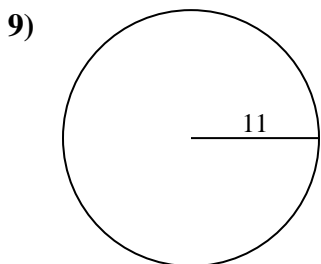
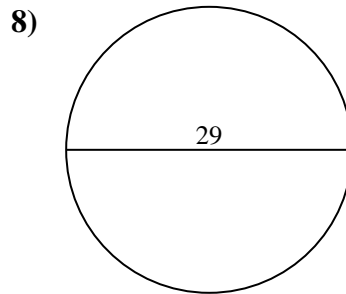
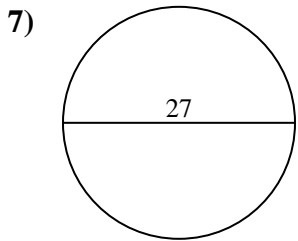
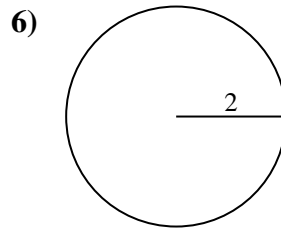
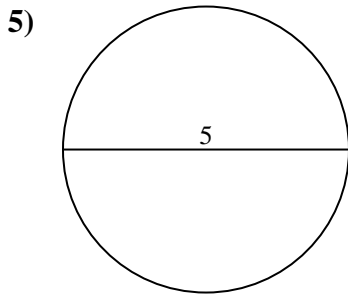
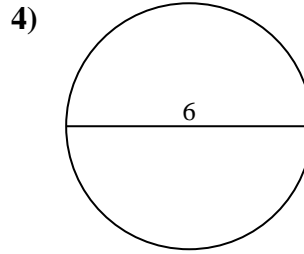
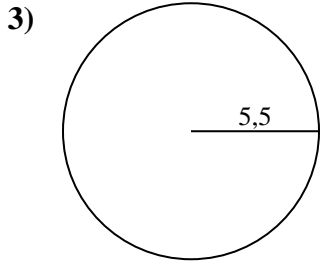
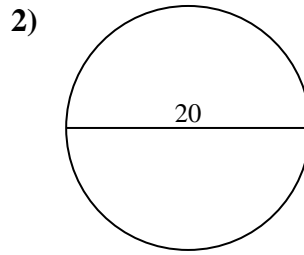
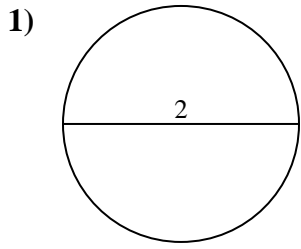




Calculez la circonférence de chaque cercle. Les cercles ne sont pas à l'échelle.



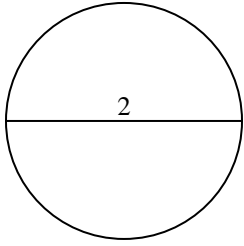
Réponses

- 1. _____
- 2. _____
- 3. _____
- 4. _____
- 5. _____
- 6. _____
- 7. _____
- 8. _____
- 9. _____
- 10. _____

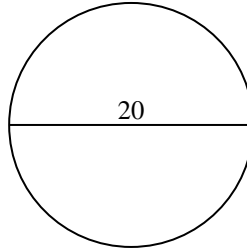


Calculez la circonférence de chaque cercle. Les cercles ne sont pas à l'échelle.

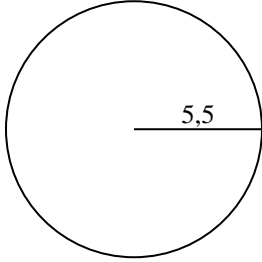
1)



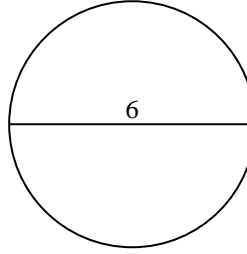
2)



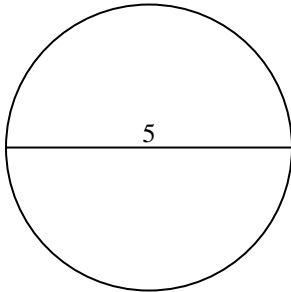
3)



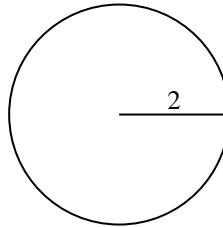
4)



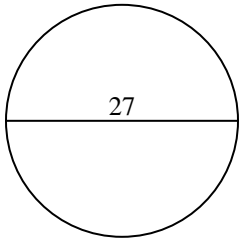
5)



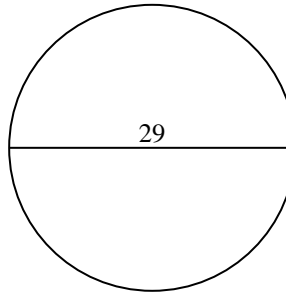
6)



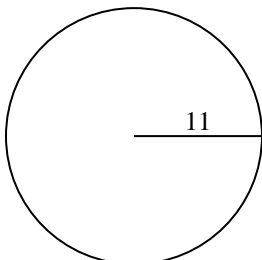
7)



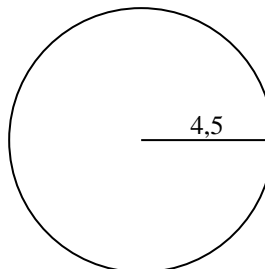
8)



9)



10)

**Réponses**1. 6,28 cm2. 62,83 cm3. 34,56 cm4. 18,85 cm5. 15,71 cm6. 12,57 cm7. 84,82 cm8. 91,11 cm9. 69,12 cm10. 28,27 cm



Calculez la circonférence de chaque cercle. Les cercles ne sont pas à l'échelle.

12,57 cm

34,56 cm

18,85 cm

28,27 cm

91,11 cm

84,82 cm

6,28 cm

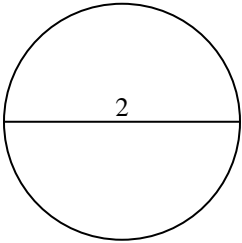
69,12 cm

15,71 cm

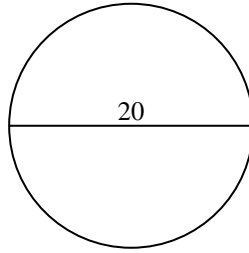
62,83 cm

Réponses

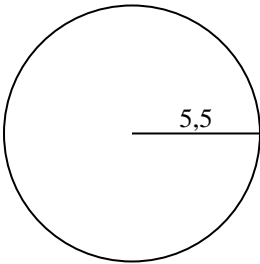
1)



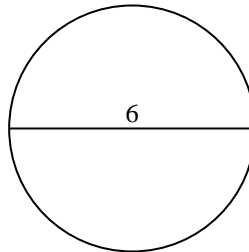
2)



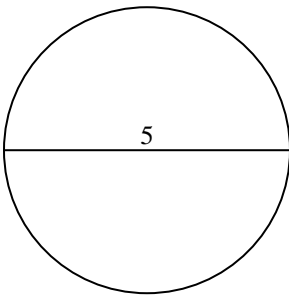
3)



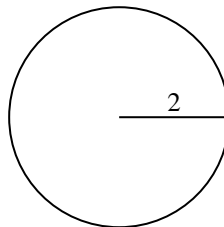
4)



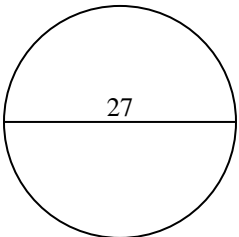
5)



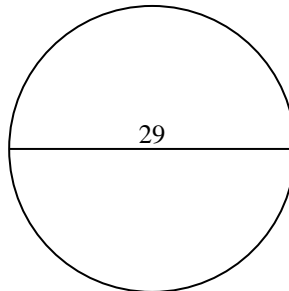
6)



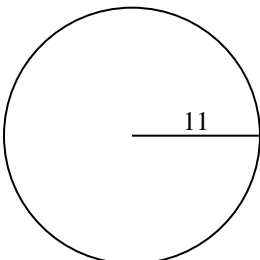
7)



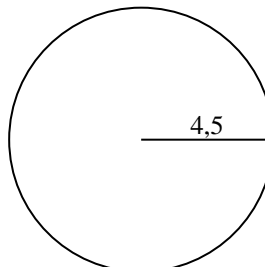
8)



9)



10)



1. _____
2. _____
3. _____
4. _____
5. _____
6. _____
7. _____
8. _____
9. _____
10. _____