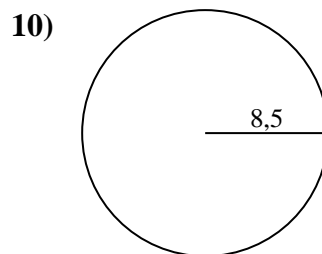
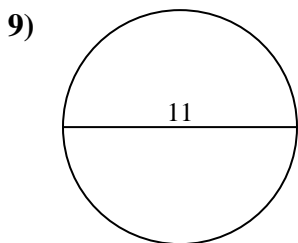
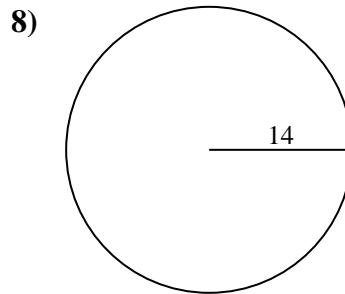
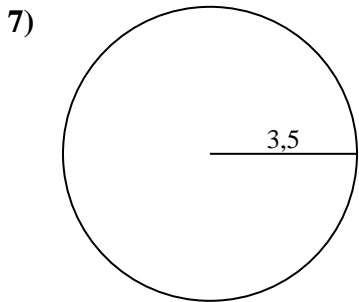
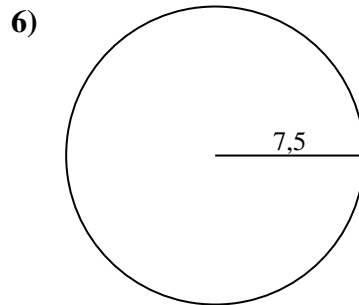
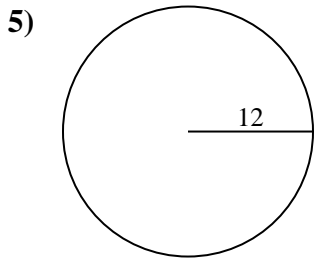
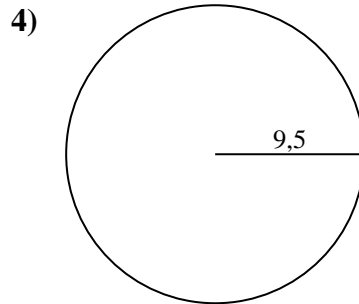
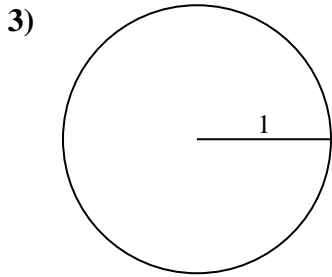
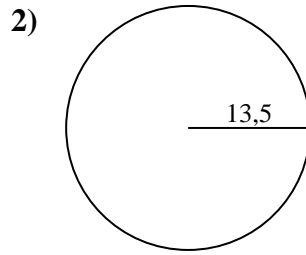
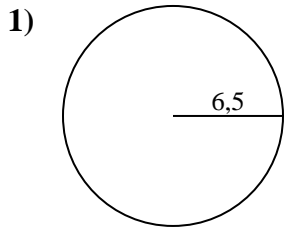




Calculez la circonférence de chaque cercle. Les cercles ne sont pas à l'échelle.

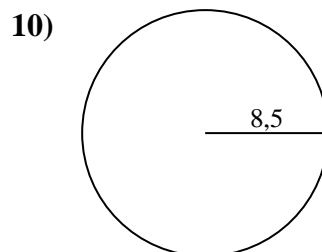
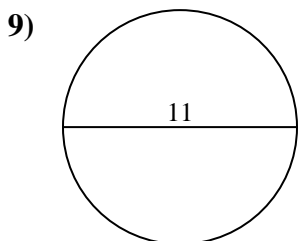
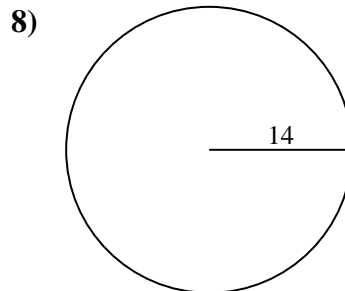
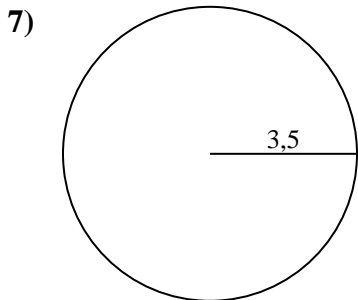
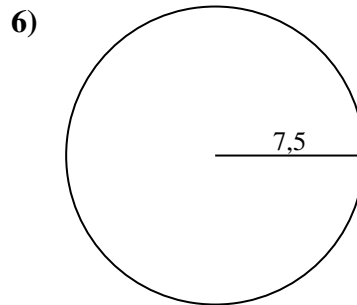
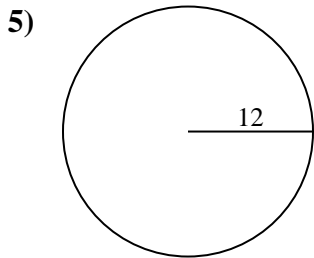
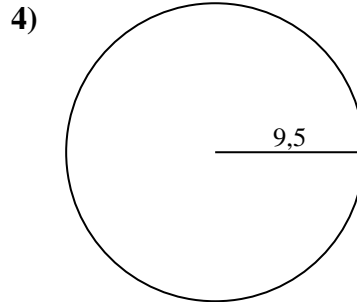
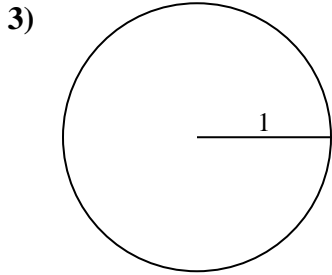
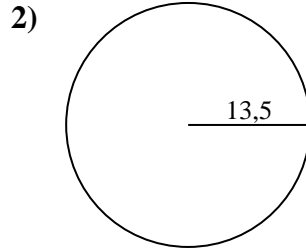
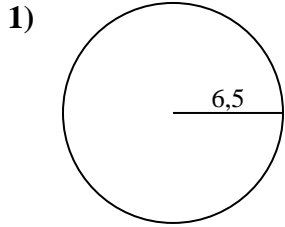


Réponses

- 1. _____
- 2. _____
- 3. _____
- 4. _____
- 5. _____
- 6. _____
- 7. _____
- 8. _____
- 9. _____
- 10. _____



Calculez la circonférence de chaque cercle. Les cercles ne sont pas à l'échelle.

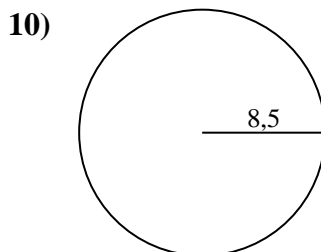
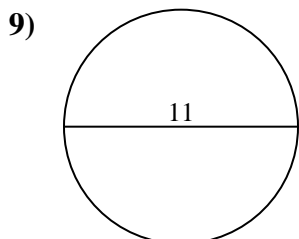
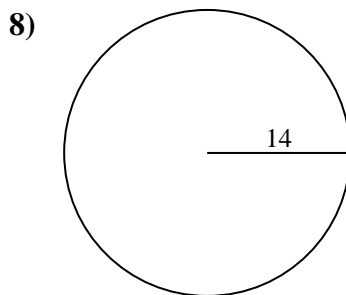
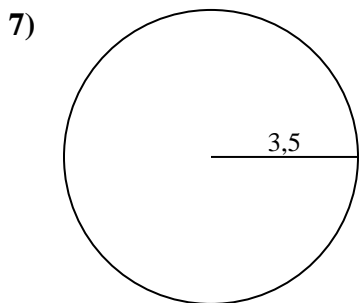
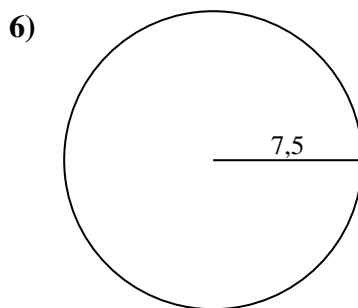
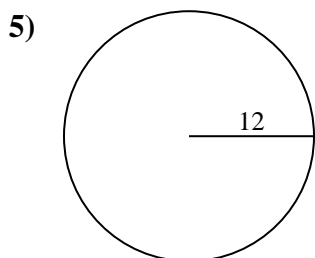
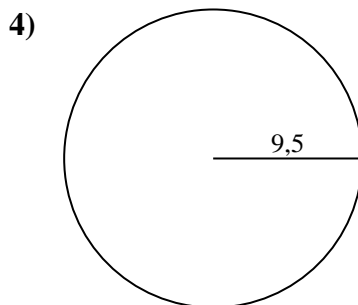
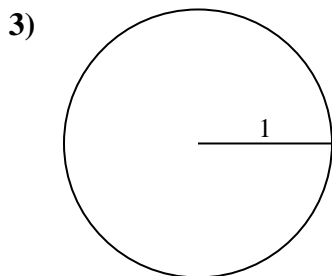
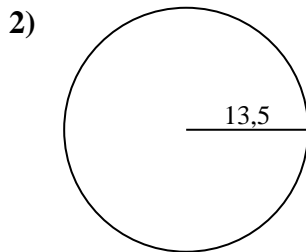
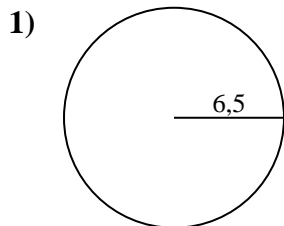
**Réponses**1. 40,84 cm2. 84,82 cm3. 6,28 cm4. 59,69 cm5. 75,4 cm6. 47,12 cm7. 21,99 cm8. 87,96 cm9. 34,56 cm10. 53,41 cm



Calculez la circonférence de chaque cercle. Les cercles ne sont pas à l'échelle.

21,99 cm	6,28 cm	34,56 cm	84,82 cm	87,96 cm
59,69 cm	75,4 cm	40,84 cm	53,41 cm	47,12 cm

Réponses



- 1. _____
- 2. _____
- 3. _____
- 4. _____
- 5. _____
- 6. _____
- 7. _____
- 8. _____
- 9. _____
- 10. _____