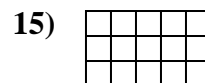

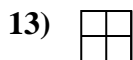
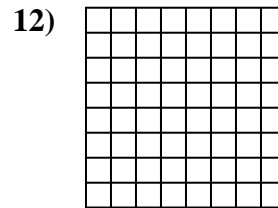
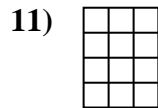
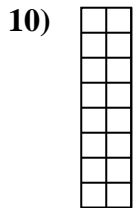
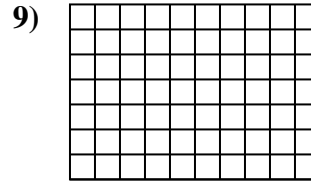
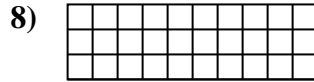
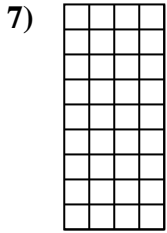
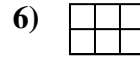
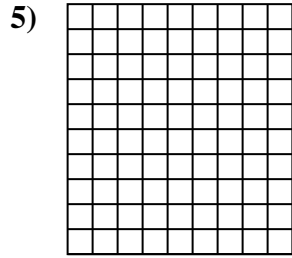
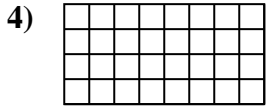
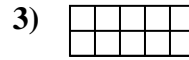
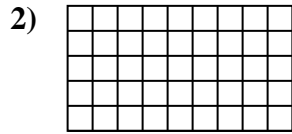
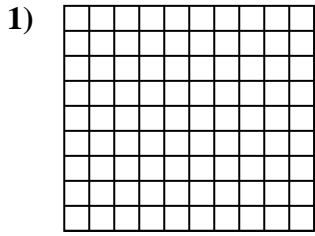


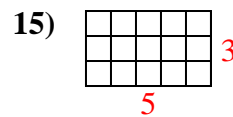
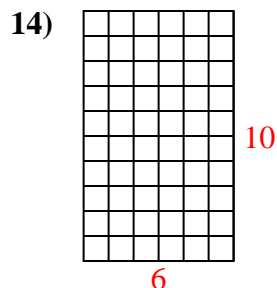
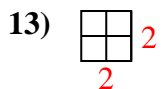
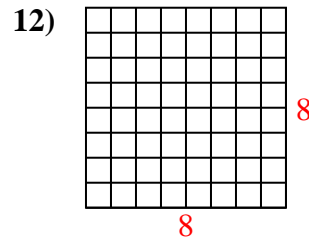
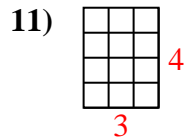
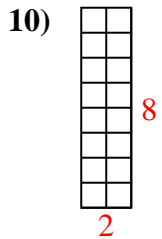
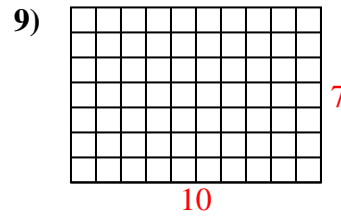
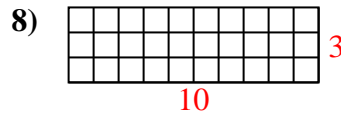
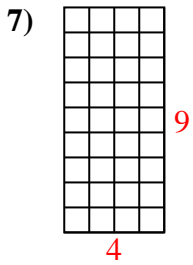
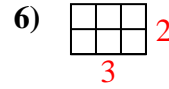
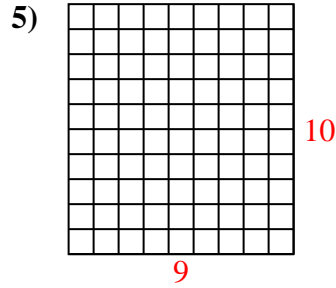
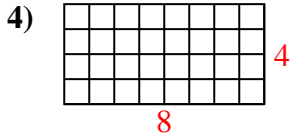
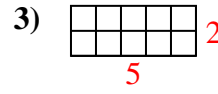
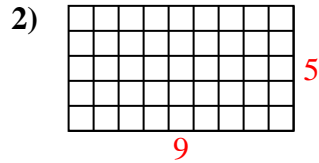
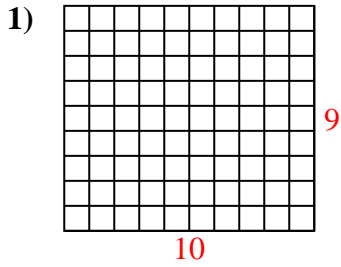


Calculez l'Aire. Chaque bloque = 1 unité (u²).



Réponses

- 1. _____
- 2. _____
- 3. _____
- 4. _____
- 5. _____
- 6. _____
- 7. _____
- 8. _____
- 9. _____
- 10. _____
- 11. _____
- 12. _____
- 13. _____
- 14. _____
- 15. _____

Calculez l'Aire. Chaque bloque = 1 unité (u^2).**Réponses**1. 90 u^2 2. 45 u^2 3. 10 u^2 4. 32 u^2 5. 90 u^2 6. 6 u^2 7. 36 u^2 8. 30 u^2 9. 70 u^2 10. 16 u^2 11. 12 u^2 12. 64 u^2 13. 4 u^2 14. 60 u^2 15. 15 u^2