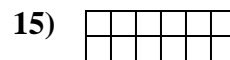
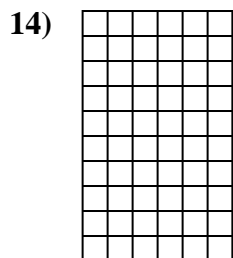
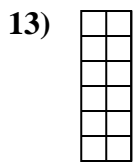
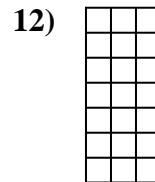
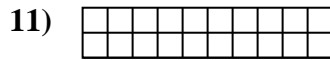
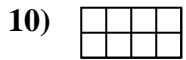
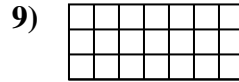
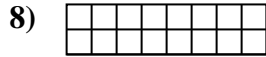
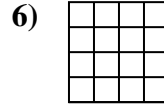

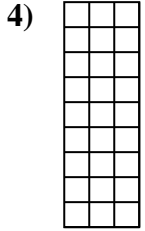

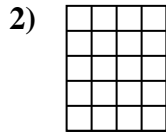
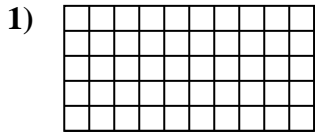




Calculez l'Aire. Chaque bloque = 1 unité (u<sup>2</sup>).



**Réponses**

1. \_\_\_\_\_

2. \_\_\_\_\_

3. \_\_\_\_\_

4. \_\_\_\_\_

5. \_\_\_\_\_

6. \_\_\_\_\_

7. \_\_\_\_\_

8. \_\_\_\_\_

9. \_\_\_\_\_

10. \_\_\_\_\_

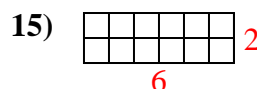
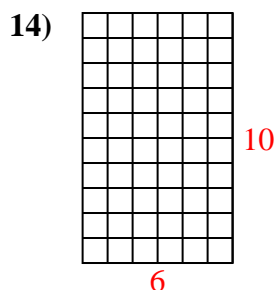
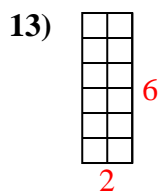
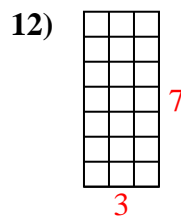
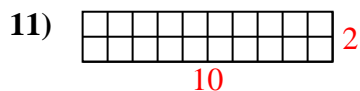
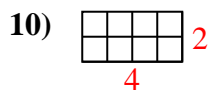
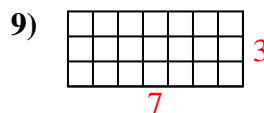
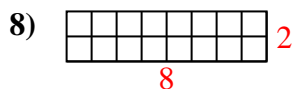
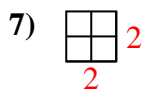
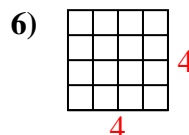
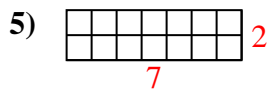
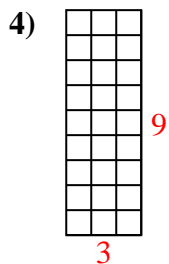
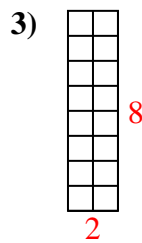
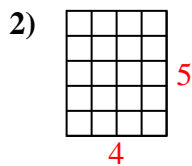
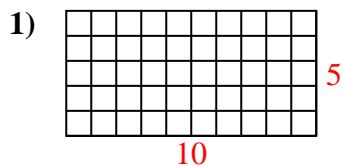
11. \_\_\_\_\_

12. \_\_\_\_\_

13. \_\_\_\_\_

14. \_\_\_\_\_

15. \_\_\_\_\_

Calculez l'Aire. Chaque bloque = 1 unité ( $u^2$ ).**Réponses**1. 50  $u^2$ 2. 20  $u^2$ 3. 16  $u^2$ 4. 27  $u^2$ 5. 14  $u^2$ 6. 16  $u^2$ 7. 4  $u^2$ 8. 16  $u^2$ 9. 21  $u^2$ 10. 8  $u^2$ 11. 20  $u^2$ 12. 21  $u^2$ 13. 12  $u^2$ 14. 60  $u^2$ 15. 12  $u^2$