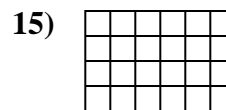
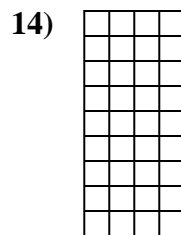
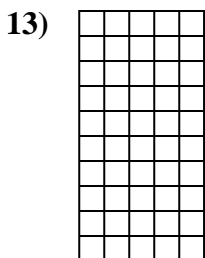
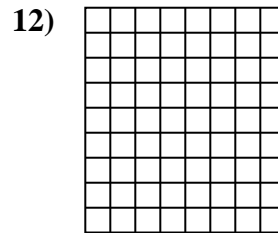
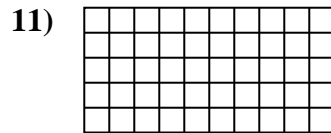
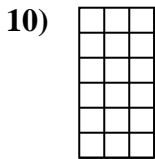
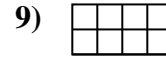

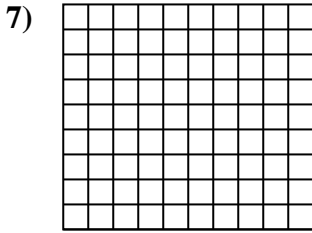
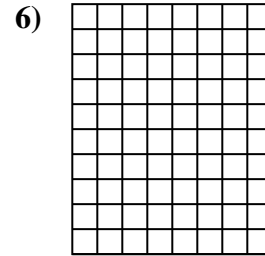
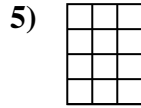
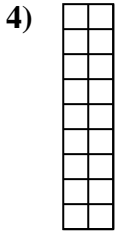
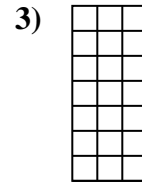
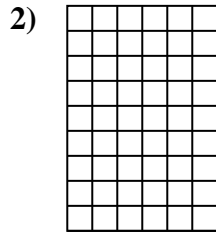
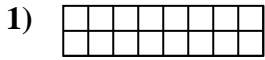


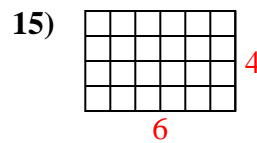
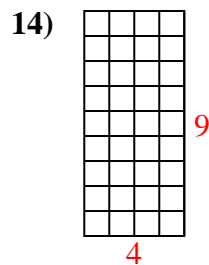
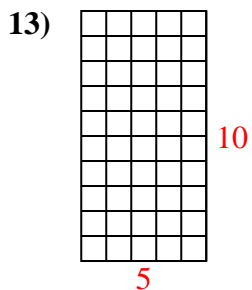
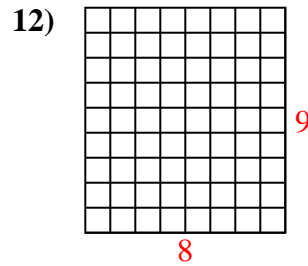
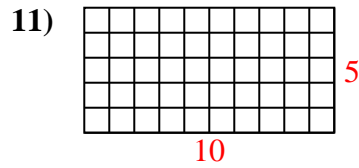
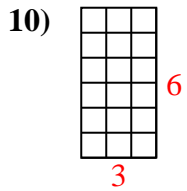
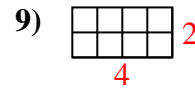
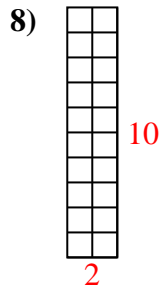
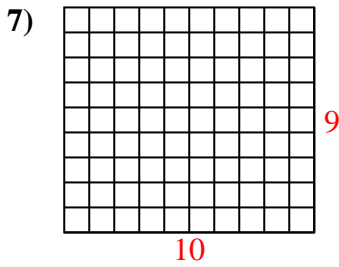
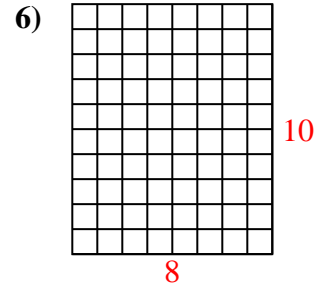
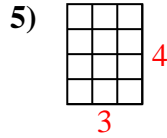
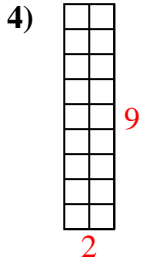
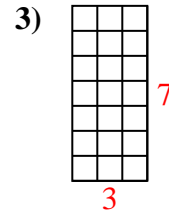
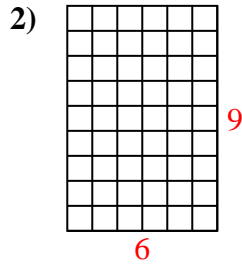
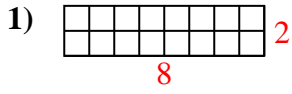


Calculez l'Aire. Chaque bloque = 1 unité (u<sup>2</sup>).



**Réponses**

1. \_\_\_\_\_
2. \_\_\_\_\_
3. \_\_\_\_\_
4. \_\_\_\_\_
5. \_\_\_\_\_
6. \_\_\_\_\_
7. \_\_\_\_\_
8. \_\_\_\_\_
9. \_\_\_\_\_
10. \_\_\_\_\_
11. \_\_\_\_\_
12. \_\_\_\_\_
13. \_\_\_\_\_
14. \_\_\_\_\_
15. \_\_\_\_\_

Calculez l'Aire. Chaque bloque = 1 unité ( $u^2$ ).**Réponses**1. 16  $u^2$ 2. 54  $u^2$ 3. 21  $u^2$ 4. 18  $u^2$ 5. 12  $u^2$ 6. 80  $u^2$ 7. 90  $u^2$ 8. 20  $u^2$ 9. 8  $u^2$ 10. 18  $u^2$ 11. 50  $u^2$ 12. 72  $u^2$ 13. 50  $u^2$ 14. 36  $u^2$ 15. 24  $u^2$