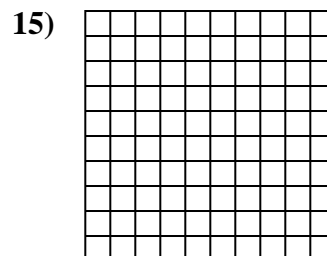
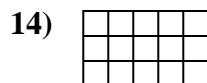
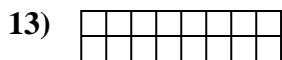
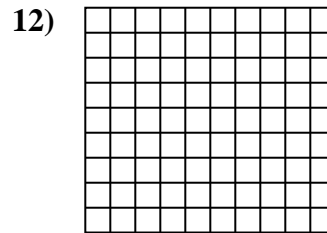
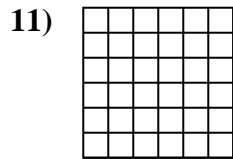
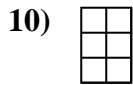
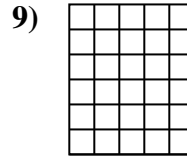

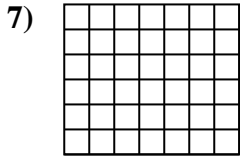

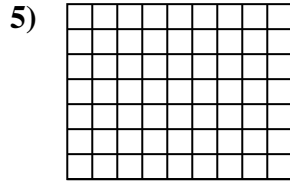
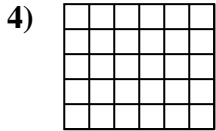
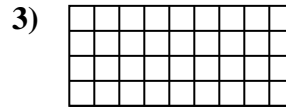
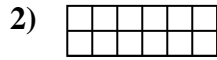
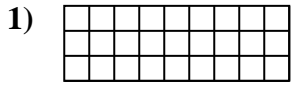


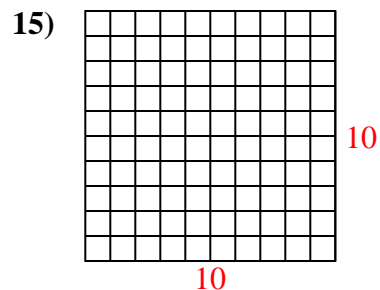
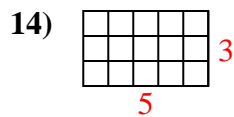
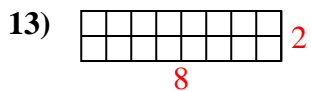
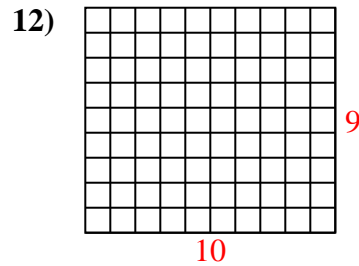
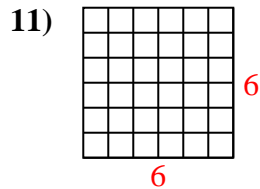
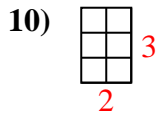
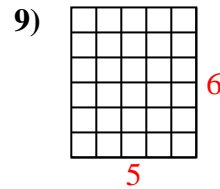
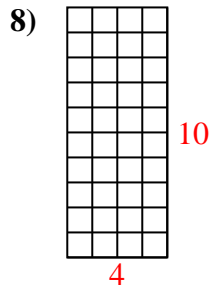
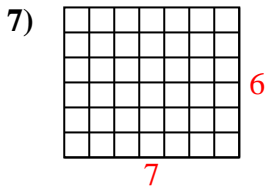
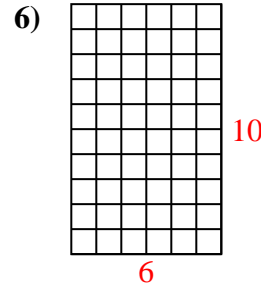
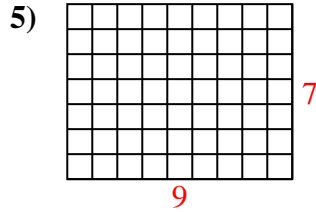
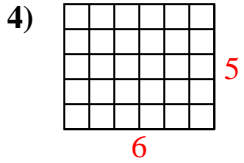
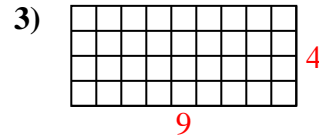
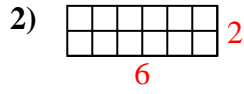
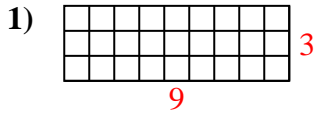


Calculez l'Aire. Chaque bloque = 1 unité (u<sup>2</sup>).



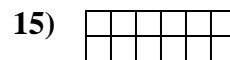
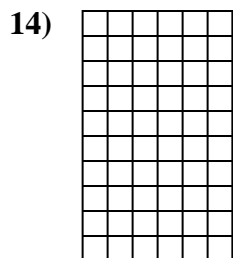
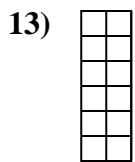
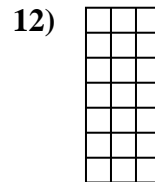
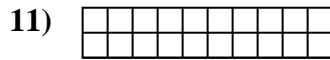
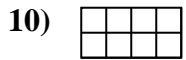
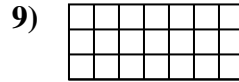
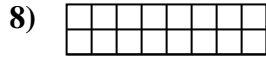
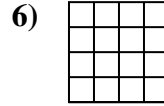

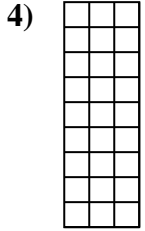

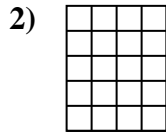
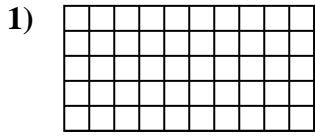
**Réponses**

- 1. \_\_\_\_\_
- 2. \_\_\_\_\_
- 3. \_\_\_\_\_
- 4. \_\_\_\_\_
- 5. \_\_\_\_\_
- 6. \_\_\_\_\_
- 7. \_\_\_\_\_
- 8. \_\_\_\_\_
- 9. \_\_\_\_\_
- 10. \_\_\_\_\_
- 11. \_\_\_\_\_
- 12. \_\_\_\_\_
- 13. \_\_\_\_\_
- 14. \_\_\_\_\_
- 15. \_\_\_\_\_

Calculez l'Aire. Chaque bloque = 1 unité ( $u^2$ ).**Réponses**1. 27  $u^2$ 2. 12  $u^2$ 3. 36  $u^2$ 4. 30  $u^2$ 5. 63  $u^2$ 6. 60  $u^2$ 7. 42  $u^2$ 8. 40  $u^2$ 9. 30  $u^2$ 10. 6  $u^2$ 11. 36  $u^2$ 12. 90  $u^2$ 13. 16  $u^2$ 14. 15  $u^2$ 15. 100  $u^2$



Calculez l'Aire. Chaque bloque = 1 unité (u<sup>2</sup>).



**Réponses**

1. \_\_\_\_\_

2. \_\_\_\_\_

3. \_\_\_\_\_

4. \_\_\_\_\_

5. \_\_\_\_\_

6. \_\_\_\_\_

7. \_\_\_\_\_

8. \_\_\_\_\_

9. \_\_\_\_\_

10. \_\_\_\_\_

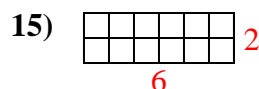
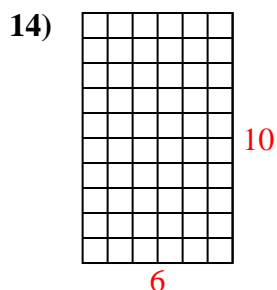
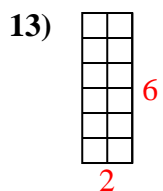
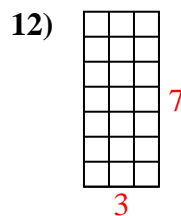
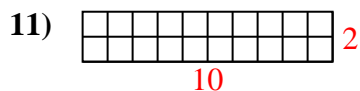
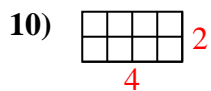
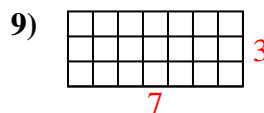
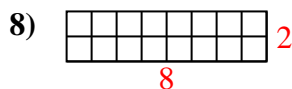
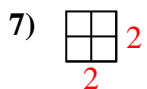
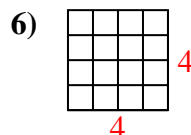
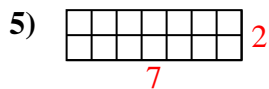
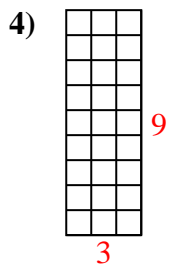
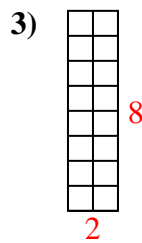
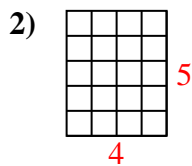
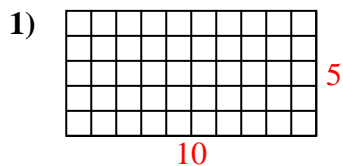
11. \_\_\_\_\_

12. \_\_\_\_\_

13. \_\_\_\_\_

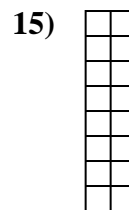

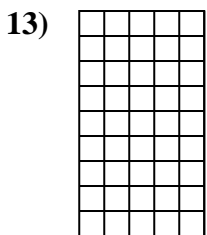
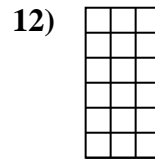
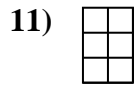
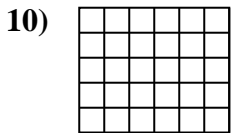


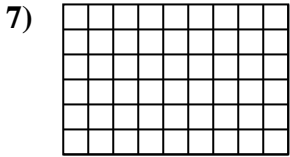

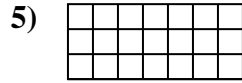
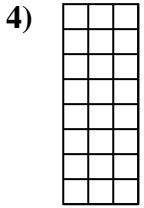
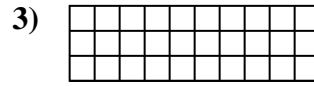
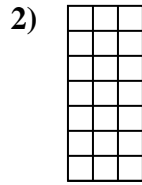

14. \_\_\_\_\_

15. \_\_\_\_\_

Calculez l'Aire. Chaque bloque = 1 unité ( $u^2$ ).**Réponses**1. 50  $u^2$ 2. 20  $u^2$ 3. 16  $u^2$ 4. 27  $u^2$ 5. 14  $u^2$ 6. 16  $u^2$ 7. 4  $u^2$ 8. 16  $u^2$ 9. 21  $u^2$ 10. 8  $u^2$ 11. 20  $u^2$ 12. 21  $u^2$ 13. 12  $u^2$ 14. 60  $u^2$ 15. 12  $u^2$

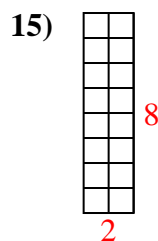
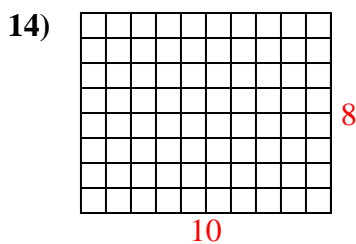
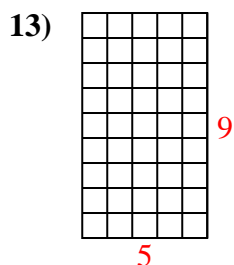
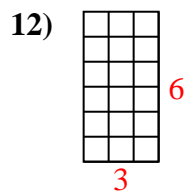
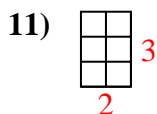
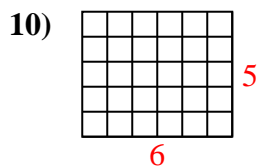
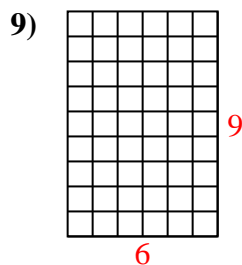
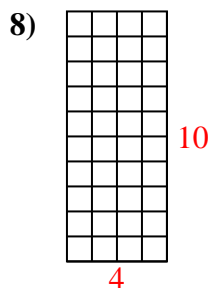
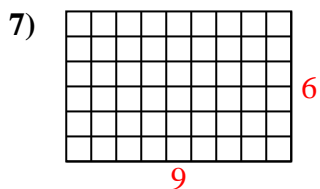
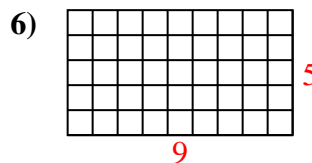
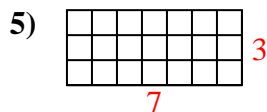
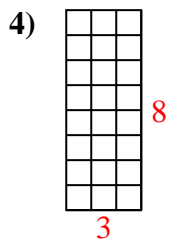
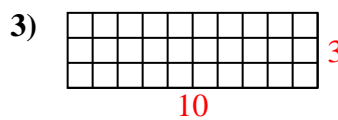
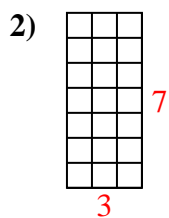
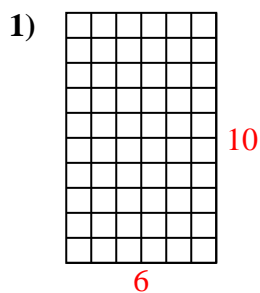


Calculez l'Aire. Chaque bloque = 1 unité (u<sup>2</sup>).



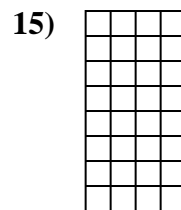
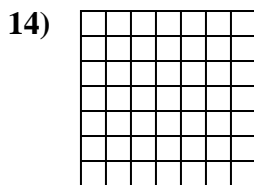
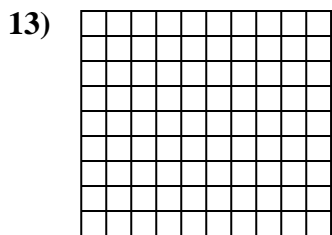
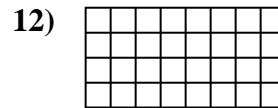
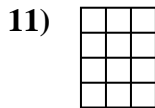
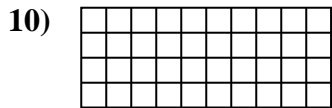
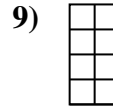
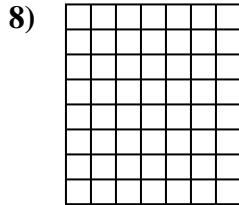
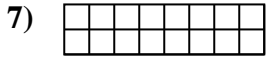

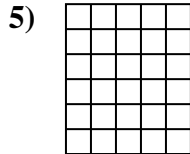
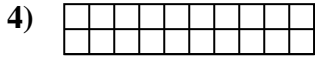
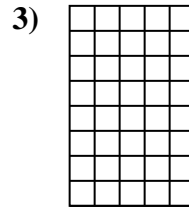
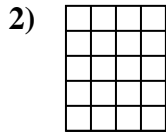
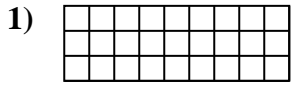
**Réponses**

1. \_\_\_\_\_
2. \_\_\_\_\_
3. \_\_\_\_\_
4. \_\_\_\_\_
5. \_\_\_\_\_
6. \_\_\_\_\_
7. \_\_\_\_\_
8. \_\_\_\_\_
9. \_\_\_\_\_
10. \_\_\_\_\_
11. \_\_\_\_\_
12. \_\_\_\_\_
13. \_\_\_\_\_
14. \_\_\_\_\_
15. \_\_\_\_\_

Calculez l'Aire. Chaque bloque = 1 unité ( $u^2$ ).**Réponses**1. 60  $u^2$ 2. 21  $u^2$ 3. 30  $u^2$ 4. 24  $u^2$ 5. 21  $u^2$ 6. 45  $u^2$ 7. 54  $u^2$ 8. 40  $u^2$ 9. 54  $u^2$ 10. 30  $u^2$ 11. 6  $u^2$ 12. 18  $u^2$ 13. 45  $u^2$ 14. 80  $u^2$ 15. 16  $u^2$

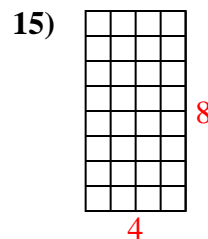
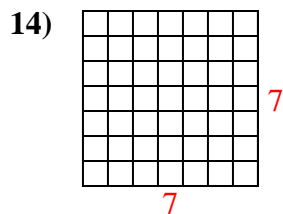
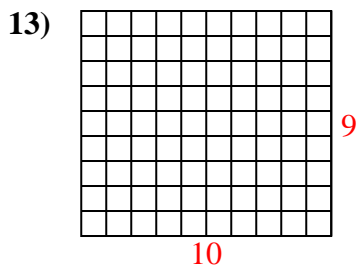
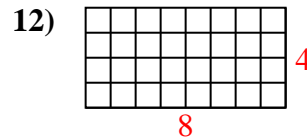
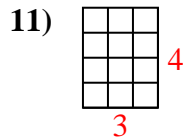
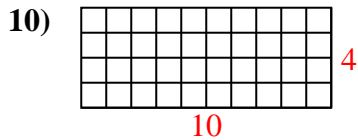
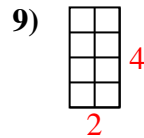
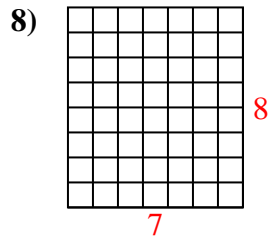
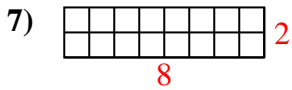
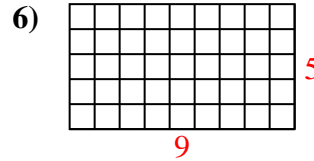
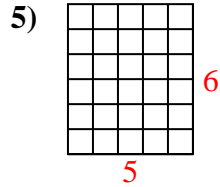
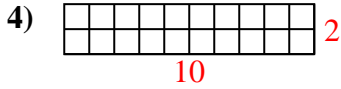
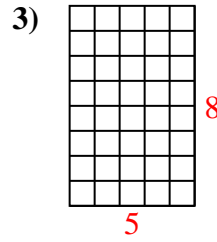
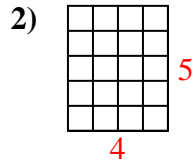
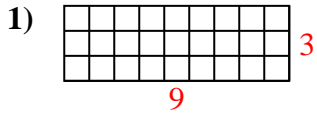


Calculez l'Aire. Chaque bloque = 1 unité (u<sup>2</sup>).



**Réponses**

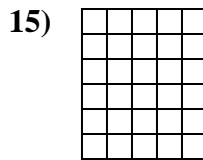
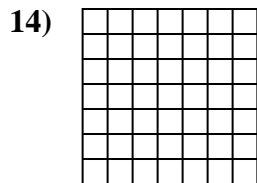
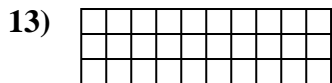

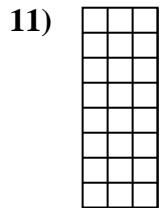
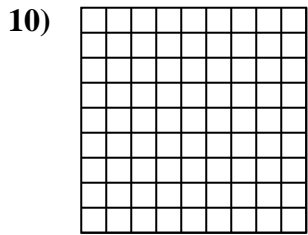
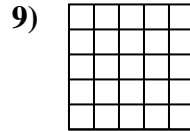
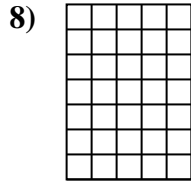
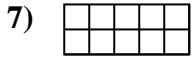
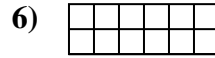
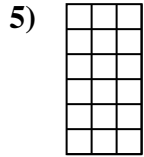
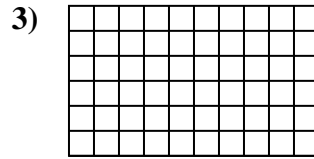
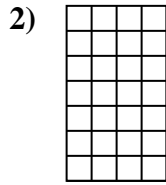
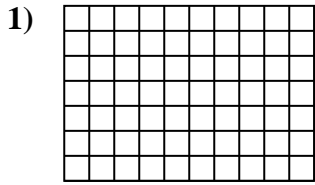
- 1. \_\_\_\_\_
- 2. \_\_\_\_\_
- 3. \_\_\_\_\_
- 4. \_\_\_\_\_
- 5. \_\_\_\_\_
- 6. \_\_\_\_\_
- 7. \_\_\_\_\_
- 8. \_\_\_\_\_
- 9. \_\_\_\_\_
- 10. \_\_\_\_\_
- 11. \_\_\_\_\_
- 12. \_\_\_\_\_
- 13. \_\_\_\_\_
- 14. \_\_\_\_\_
- 15. \_\_\_\_\_

Calculez l'Aire. Chaque bloque = 1 unité ( $u^2$ ).**Réponses**1. 27  $u^2$ 2. 20  $u^2$ 3. 40  $u^2$ 4. 20  $u^2$ 5. 30  $u^2$ 6. 45  $u^2$ 7. 16  $u^2$ 8. 56  $u^2$ 9. 8  $u^2$ 10. 40  $u^2$ 11. 12  $u^2$ 12. 32  $u^2$ 13. 90  $u^2$ 14. 49  $u^2$ 15. 32  $u^2$



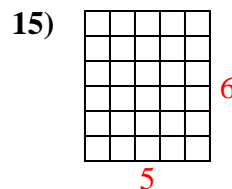
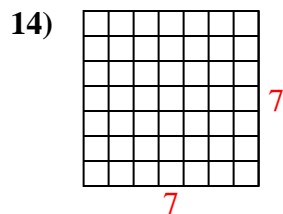
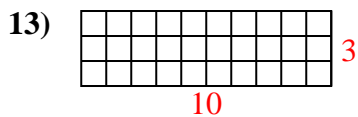
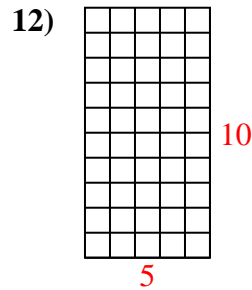
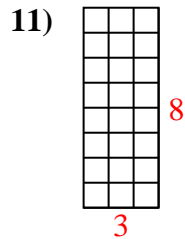
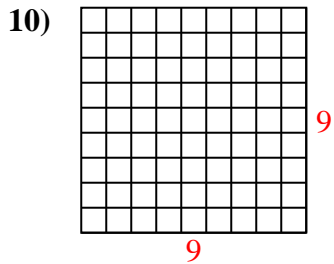
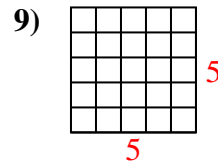
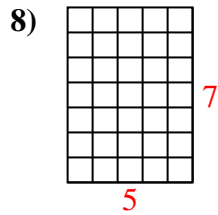
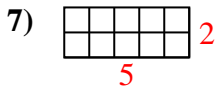
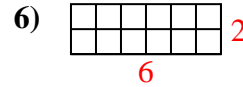
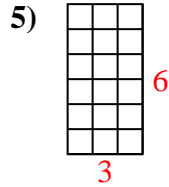
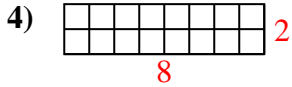
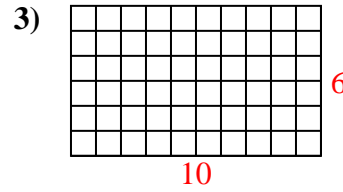
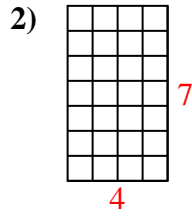
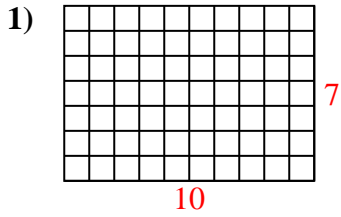


Calculez l'Aire. Chaque bloque = 1 unité (u<sup>2</sup>).



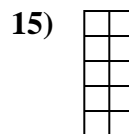
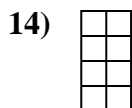
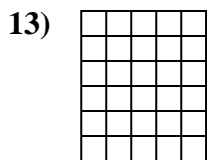
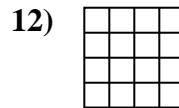
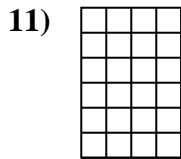
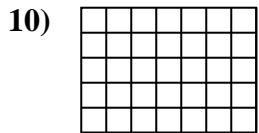
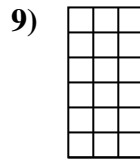
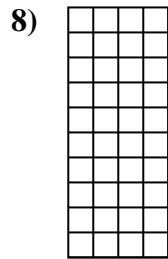
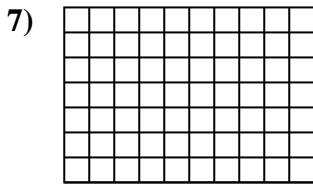
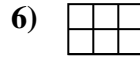
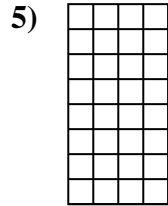
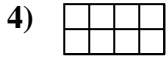
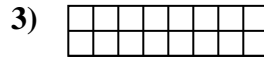
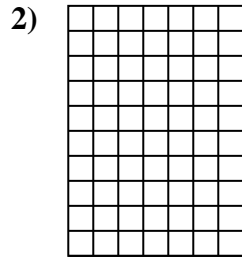
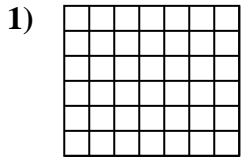
**Réponses**

1. \_\_\_\_\_
2. \_\_\_\_\_
3. \_\_\_\_\_
4. \_\_\_\_\_
5. \_\_\_\_\_
6. \_\_\_\_\_
7. \_\_\_\_\_
8. \_\_\_\_\_
9. \_\_\_\_\_
10. \_\_\_\_\_
11. \_\_\_\_\_
12. \_\_\_\_\_
13. \_\_\_\_\_
14. \_\_\_\_\_
15. \_\_\_\_\_

Calculez l'Aire. Chaque bloque = 1 unité ( $u^2$ ).**Réponses**1. 70  $u^2$ 2. 28  $u^2$ 3. 60  $u^2$ 4. 16  $u^2$ 5. 18  $u^2$ 6. 12  $u^2$ 7. 10  $u^2$ 8. 35  $u^2$ 9. 25  $u^2$ 10. 81  $u^2$ 11. 24  $u^2$ 12. 50  $u^2$ 13. 30  $u^2$ 14. 49  $u^2$ 15. 30  $u^2$

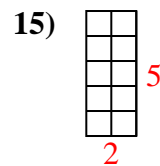
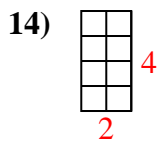
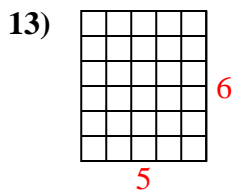
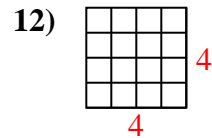
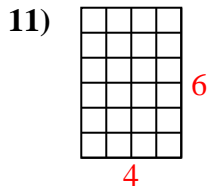
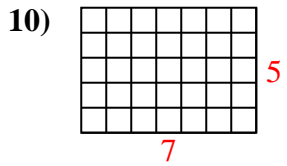
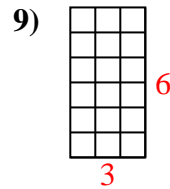
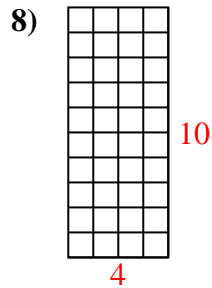
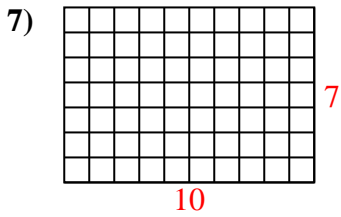
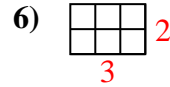
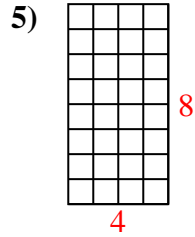
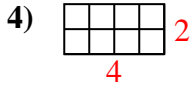
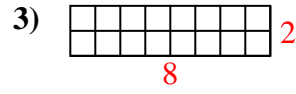
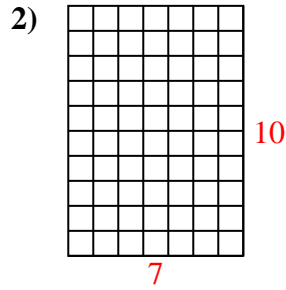
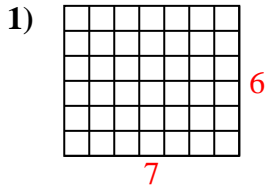


Calculez l'Aire. Chaque bloque = 1 unité (u<sup>2</sup>).




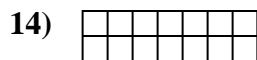
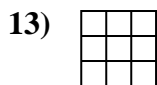
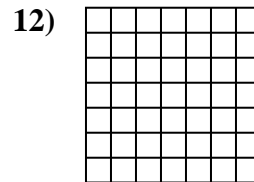
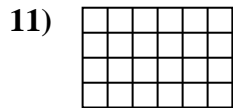
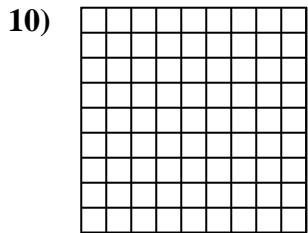

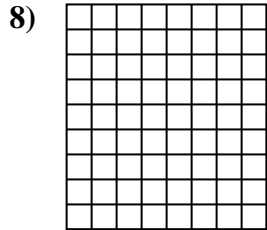
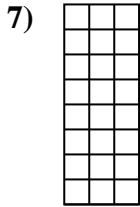
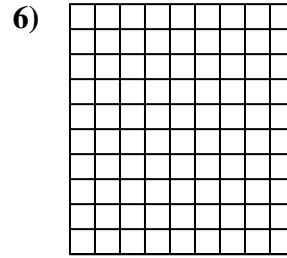
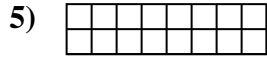
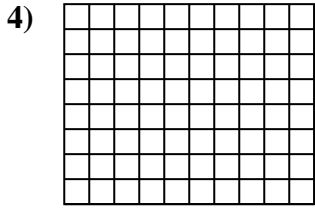
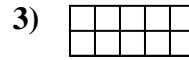
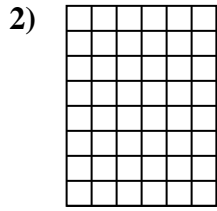
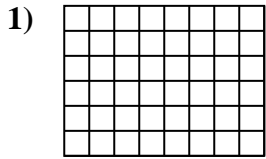
**Réponses**

1. \_\_\_\_\_
2. \_\_\_\_\_
3. \_\_\_\_\_
4. \_\_\_\_\_
5. \_\_\_\_\_
6. \_\_\_\_\_
7. \_\_\_\_\_
8. \_\_\_\_\_
9. \_\_\_\_\_
10. \_\_\_\_\_
11. \_\_\_\_\_
12. \_\_\_\_\_
13. \_\_\_\_\_
14. \_\_\_\_\_
15. \_\_\_\_\_

Calculez l'Aire. Chaque bloque = 1 unité ( $u^2$ ).**Réponses**1. 42  $u^2$ 2. 70  $u^2$ 3. 16  $u^2$ 4. 8  $u^2$ 5. 32  $u^2$ 6. 6  $u^2$ 7. 70  $u^2$ 8. 40  $u^2$ 9. 18  $u^2$ 10. 35  $u^2$ 11. 24  $u^2$ 12. 16  $u^2$ 13. 30  $u^2$ 14. 8  $u^2$ 15. 10  $u^2$

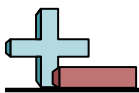
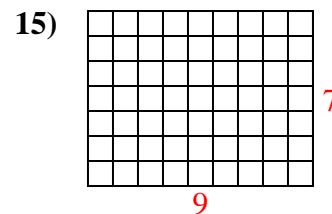
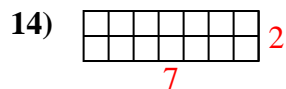
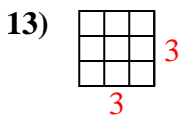
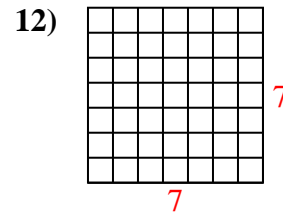
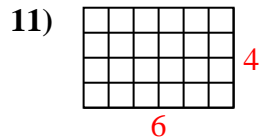
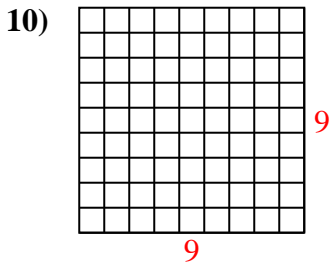
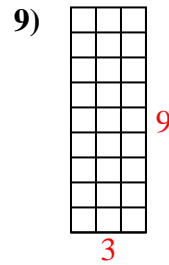
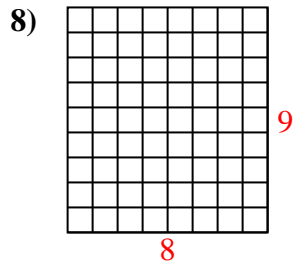
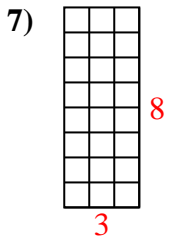
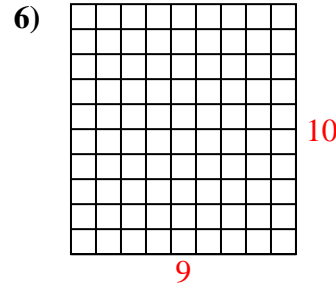
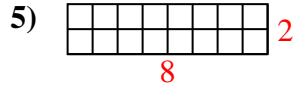
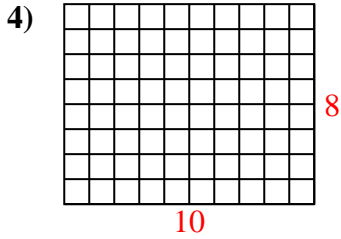
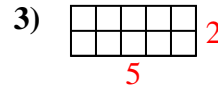
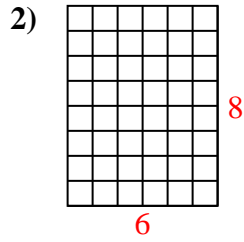
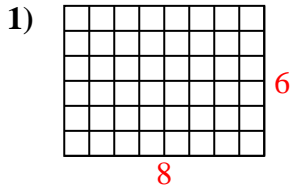


Calculez l'Aire. Chaque bloque = 1 unité (u<sup>2</sup>).



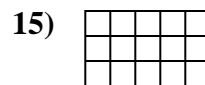
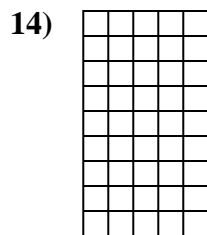
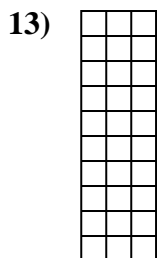
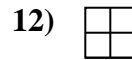
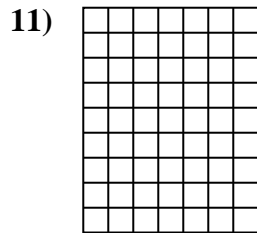
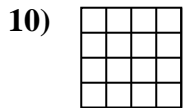
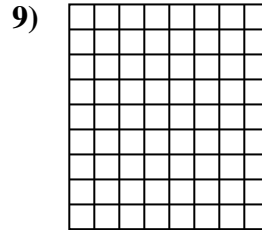

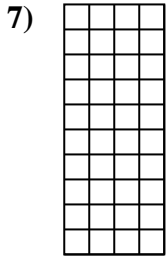

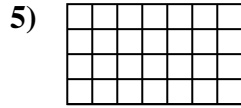
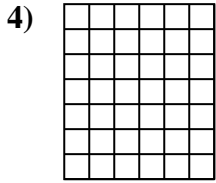
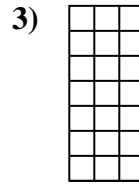
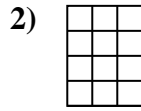
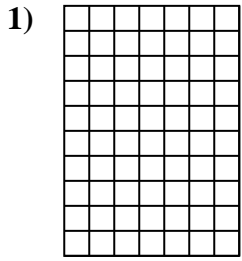
**Réponses**

1. \_\_\_\_\_
2. \_\_\_\_\_
3. \_\_\_\_\_
4. \_\_\_\_\_
5. \_\_\_\_\_
6. \_\_\_\_\_
7. \_\_\_\_\_
8. \_\_\_\_\_
9. \_\_\_\_\_
10. \_\_\_\_\_
11. \_\_\_\_\_
12. \_\_\_\_\_
13. \_\_\_\_\_
14. \_\_\_\_\_
15. \_\_\_\_\_

Calculez l'Aire. Chaque bloque = 1 unité ( $u^2$ ).**Réponses**1. 48  $u^2$ 2. 48  $u^2$ 3. 10  $u^2$ 4. 80  $u^2$ 5. 16  $u^2$ 6. 90  $u^2$ 7. 24  $u^2$ 8. 72  $u^2$ 9. 27  $u^2$ 10. 81  $u^2$ 11. 24  $u^2$ 12. 49  $u^2$ 13. 9  $u^2$ 14. 14  $u^2$ 15. 63  $u^2$

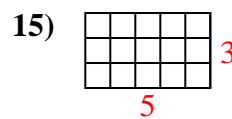
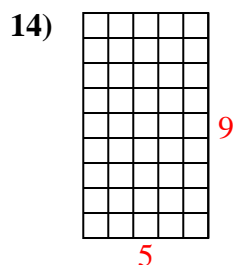
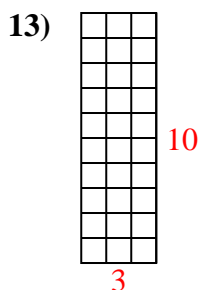
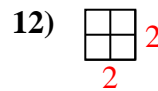
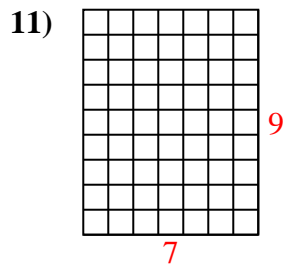
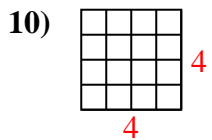
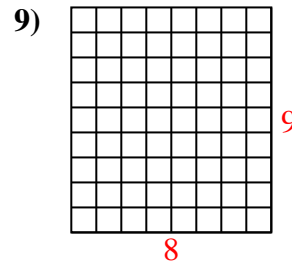
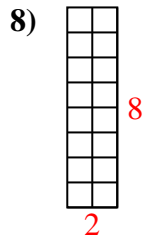
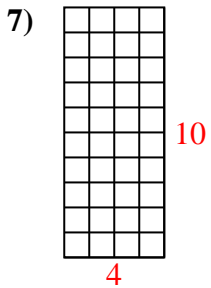
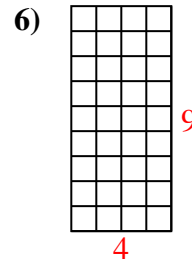
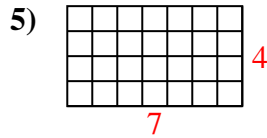
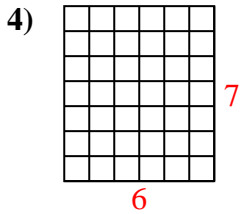
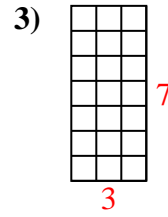
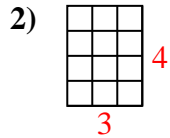
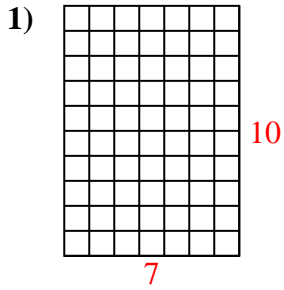


Calculez l'Aire. Chaque bloque = 1 unité (u<sup>2</sup>).



**Réponses**

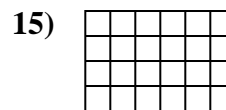
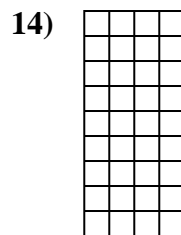
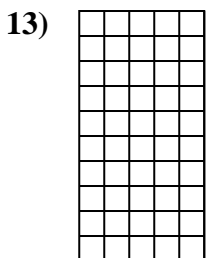
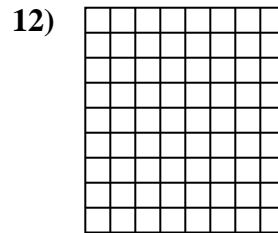
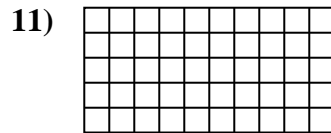
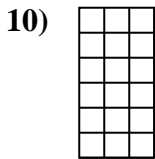
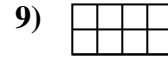

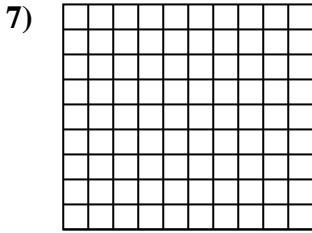
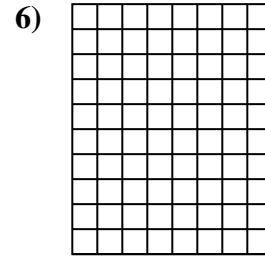
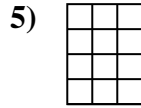
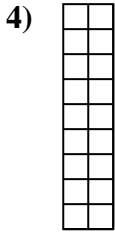
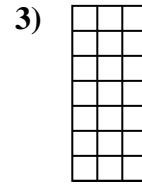
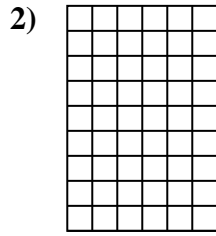
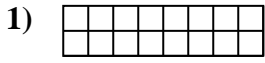
1. \_\_\_\_\_
2. \_\_\_\_\_
3. \_\_\_\_\_
4. \_\_\_\_\_
5. \_\_\_\_\_
6. \_\_\_\_\_
7. \_\_\_\_\_
8. \_\_\_\_\_
9. \_\_\_\_\_
10. \_\_\_\_\_
11. \_\_\_\_\_
12. \_\_\_\_\_
13. \_\_\_\_\_
14. \_\_\_\_\_
15. \_\_\_\_\_

Calculez l'Aire. Chaque bloque = 1 unité ( $u^2$ ).**Réponses**1. 70  $u^2$ 2. 12  $u^2$ 3. 21  $u^2$ 4. 42  $u^2$ 5. 28  $u^2$ 6. 36  $u^2$ 7. 40  $u^2$ 8. 16  $u^2$ 9. 72  $u^2$ 10. 16  $u^2$ 11. 63  $u^2$ 12. 4  $u^2$ 13. 30  $u^2$ 14. 45  $u^2$ 15. 15  $u^2$





Calculez l'Aire. Chaque bloque = 1 unité (u<sup>2</sup>).



**Réponses**

1. \_\_\_\_\_

2. \_\_\_\_\_

3. \_\_\_\_\_

4. \_\_\_\_\_

5. \_\_\_\_\_

6. \_\_\_\_\_

7. \_\_\_\_\_

8. \_\_\_\_\_

9. \_\_\_\_\_

10. \_\_\_\_\_

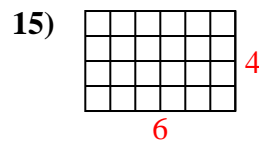
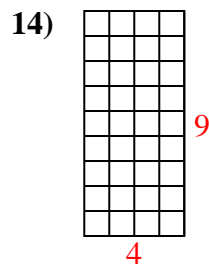
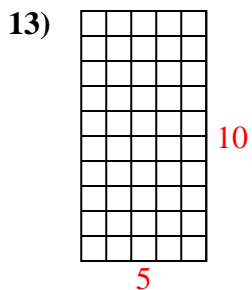
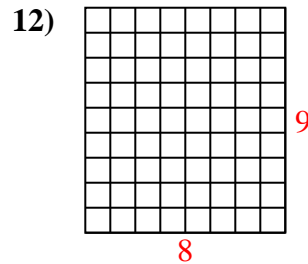
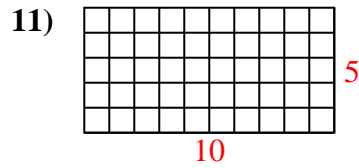
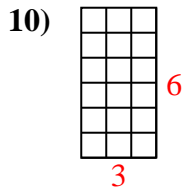
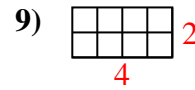
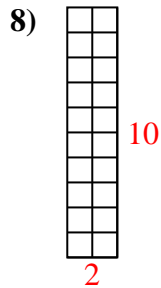
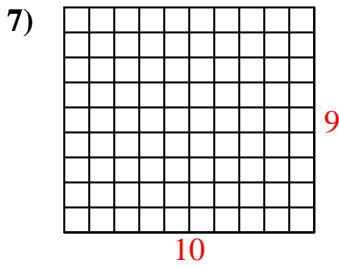
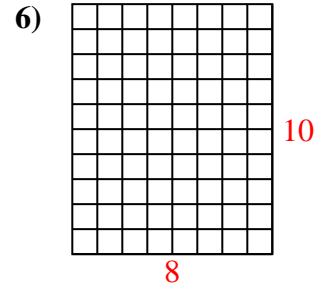
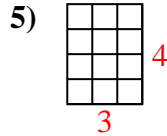
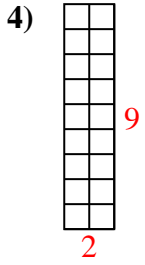
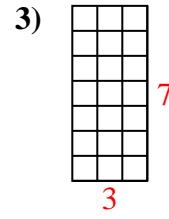
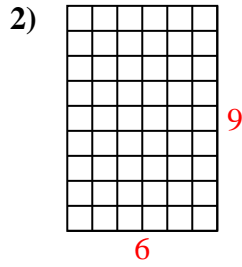
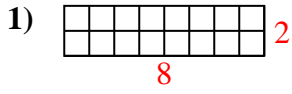
11. \_\_\_\_\_

12. \_\_\_\_\_

13. \_\_\_\_\_

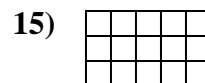

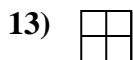
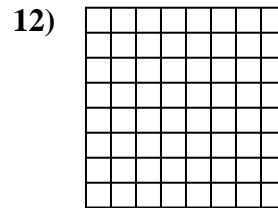
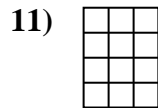
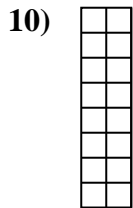
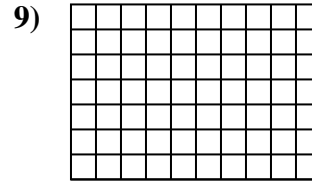
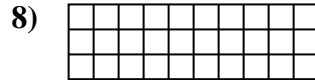
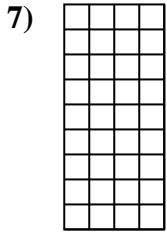
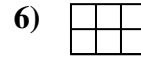
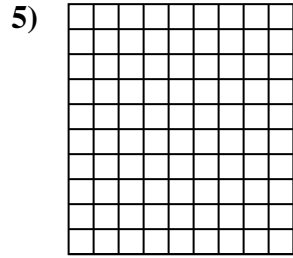
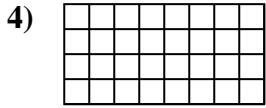
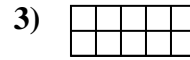
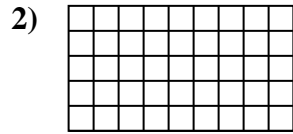
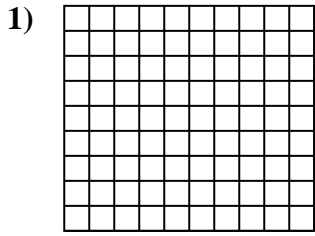
14. \_\_\_\_\_

15. \_\_\_\_\_

Calculez l'Aire. Chaque bloque = 1 unité ( $u^2$ ).**Réponses**1. 16  $u^2$ 2. 54  $u^2$ 3. 21  $u^2$ 4. 18  $u^2$ 5. 12  $u^2$ 6. 80  $u^2$ 7. 90  $u^2$ 8. 20  $u^2$ 9. 8  $u^2$ 10. 18  $u^2$ 11. 50  $u^2$ 12. 72  $u^2$ 13. 50  $u^2$ 14. 36  $u^2$ 15. 24  $u^2$

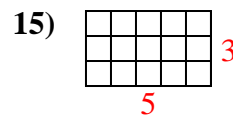
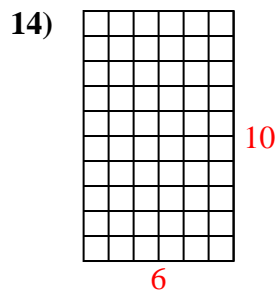
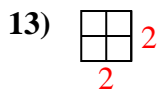
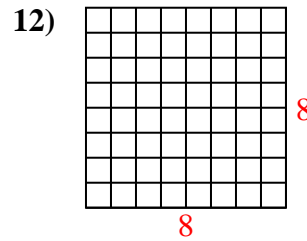
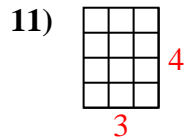
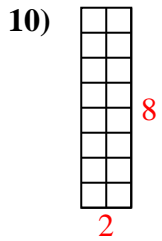
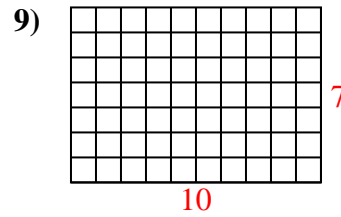
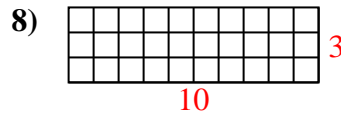
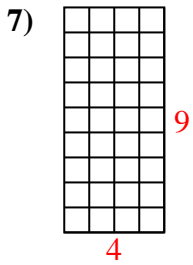
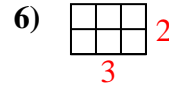
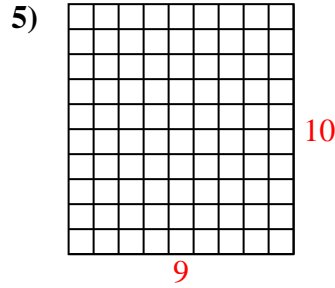
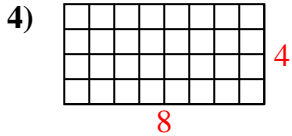
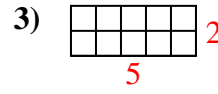
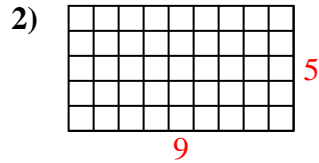
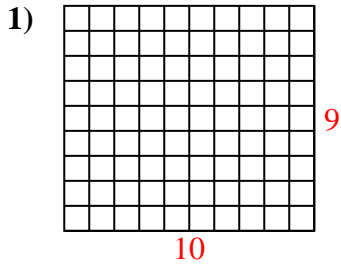


Calculez l'Aire. Chaque bloque = 1 unité (u<sup>2</sup>).



**Réponses**

1. \_\_\_\_\_
2. \_\_\_\_\_
3. \_\_\_\_\_
4. \_\_\_\_\_
5. \_\_\_\_\_
6. \_\_\_\_\_
7. \_\_\_\_\_
8. \_\_\_\_\_
9. \_\_\_\_\_
10. \_\_\_\_\_
11. \_\_\_\_\_
12. \_\_\_\_\_
13. \_\_\_\_\_
14. \_\_\_\_\_
15. \_\_\_\_\_

Calculez l'Aire. Chaque bloque = 1 unité ( $u^2$ ).**Réponses**1. 90  $u^2$ 2. 45  $u^2$ 3. 10  $u^2$ 4. 32  $u^2$ 5. 90  $u^2$ 6. 6  $u^2$ 7. 36  $u^2$ 8. 30  $u^2$ 9. 70  $u^2$ 10. 16  $u^2$ 11. 12  $u^2$ 12. 64  $u^2$ 13. 4  $u^2$ 14. 60  $u^2$ 15. 15  $u^2$