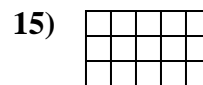
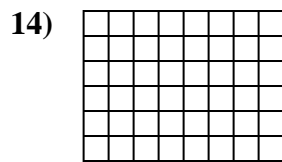
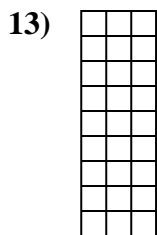
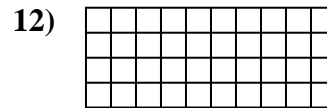
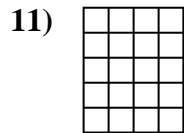
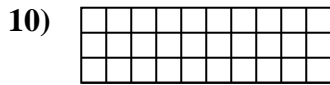
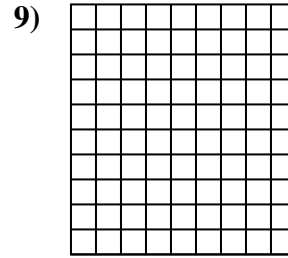
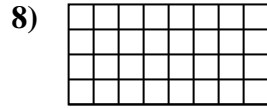
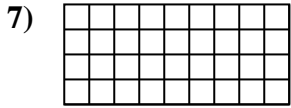
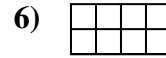
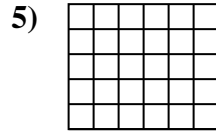
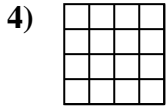
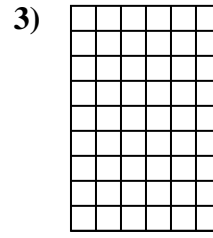
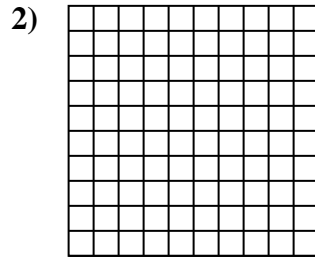
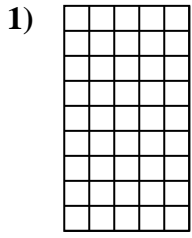


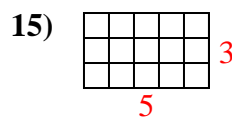
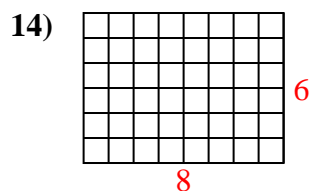
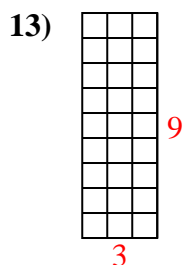
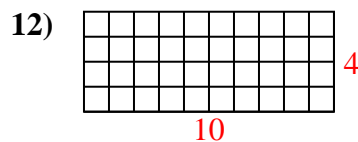
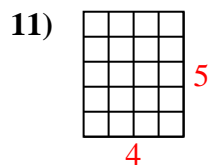
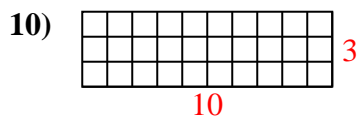
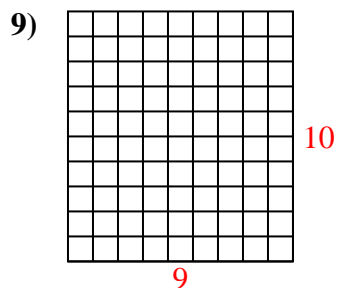
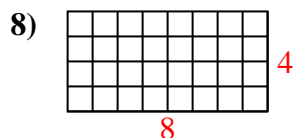
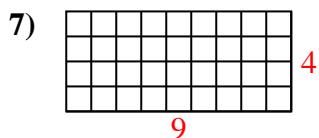
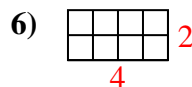
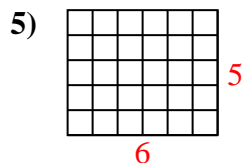
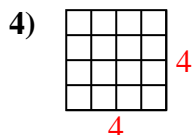
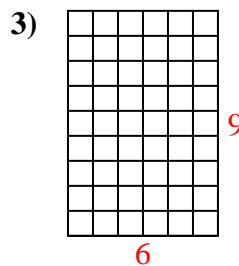
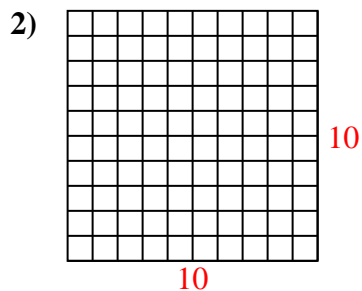
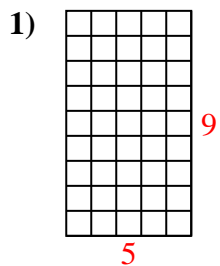


Calculez l'Aire. Chaque bloque = 1 unité (u²).



Réponses

1. _____
2. _____
3. _____
4. _____
5. _____
6. _____
7. _____
8. _____
9. _____
10. _____
11. _____
12. _____
13. _____
14. _____
15. _____

Calculez l'Aire. Chaque bloque = 1 unité (u^2).**Réponses**1. 45 u^2 2. 100 u^2 3. 54 u^2 4. 16 u^2 5. 30 u^2 6. 8 u^2 7. 36 u^2 8. 32 u^2 9. 90 u^2 10. 30 u^2 11. 20 u^2 12. 40 u^2 13. 27 u^2 14. 48 u^2 15. 15 u^2