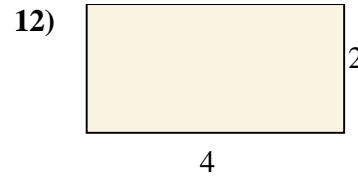
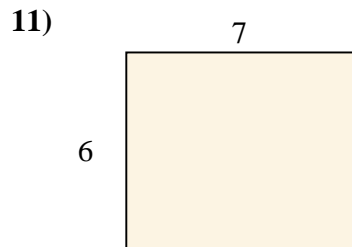
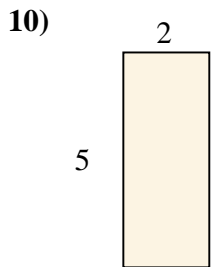
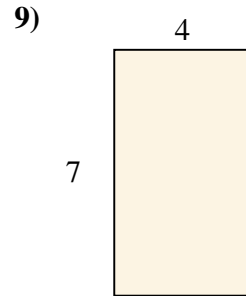
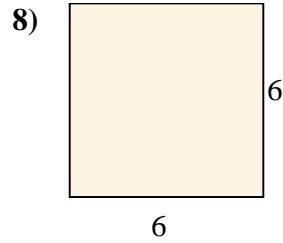
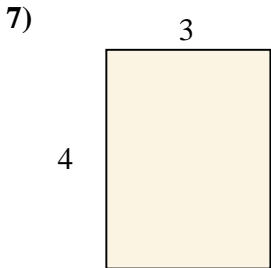
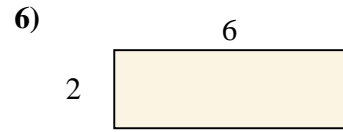
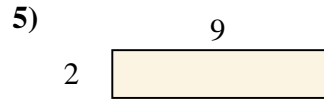
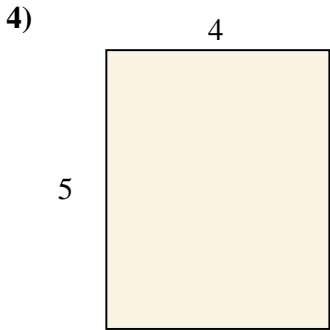
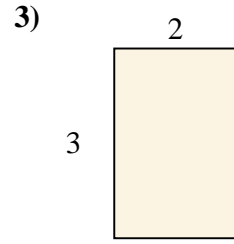
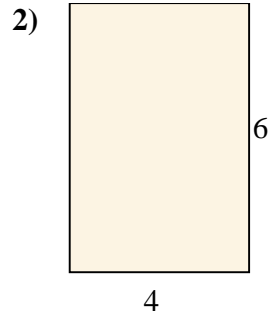
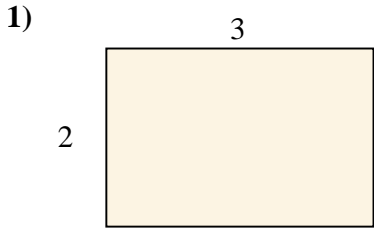




calculez l'aire de chaque rectangle (en  $\text{cm}^2$ )

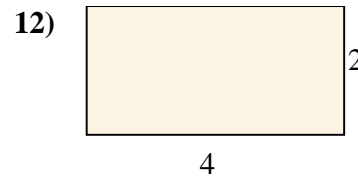
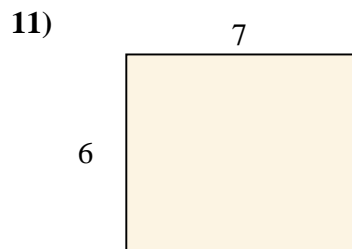
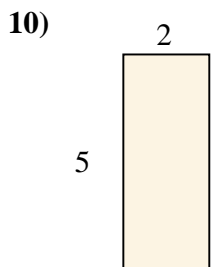
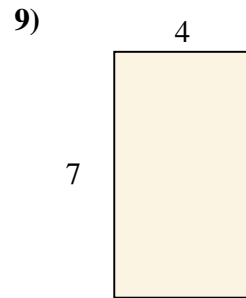
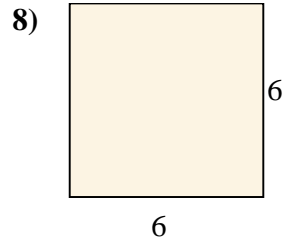
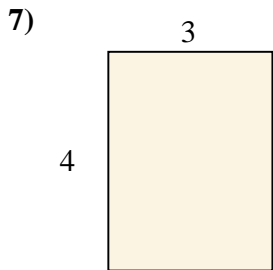
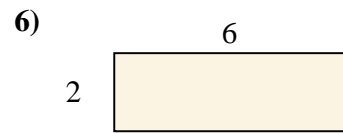
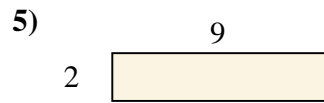
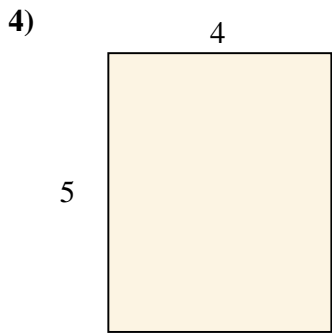
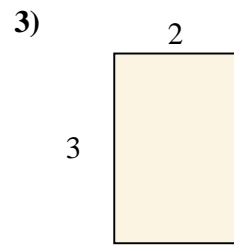
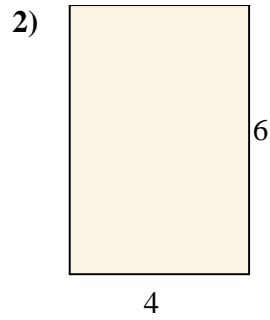
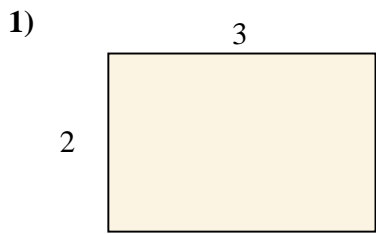


**Réponses**

- 1. \_\_\_\_\_
- 2. \_\_\_\_\_
- 3. \_\_\_\_\_
- 4. \_\_\_\_\_
- 5. \_\_\_\_\_
- 6. \_\_\_\_\_
- 7. \_\_\_\_\_
- 8. \_\_\_\_\_
- 9. \_\_\_\_\_
- 10. \_\_\_\_\_
- 11. \_\_\_\_\_
- 12. \_\_\_\_\_



calculez l'aire de chaque rectangle (en cm<sup>2</sup>)



**Réponses**

1. 6

2. 24

3. 6

4. 20

5. 18

6. 12

7. 12

8. 36

9. 28

10. 10

11. 42

12. 8