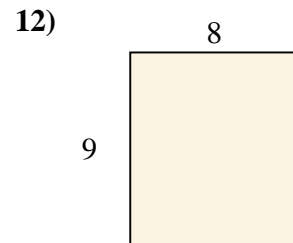
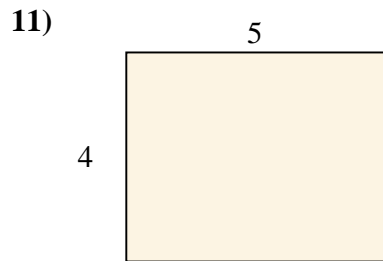
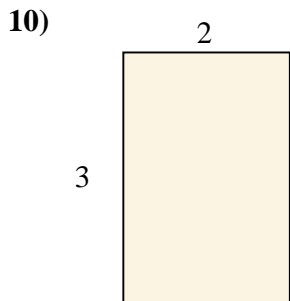
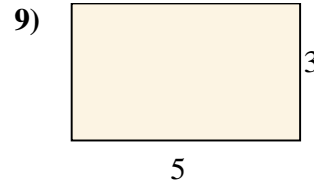

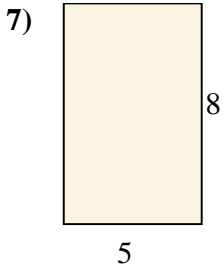
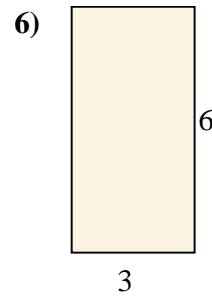
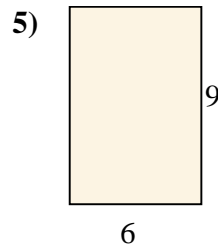
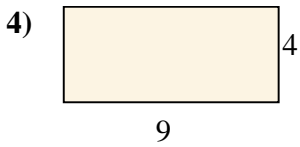
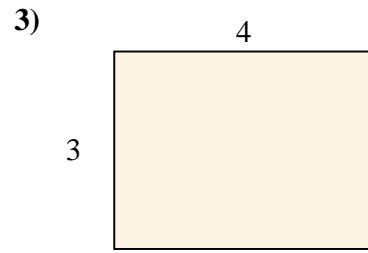
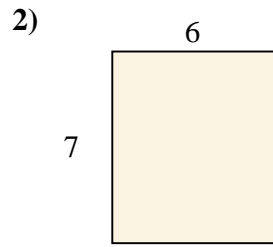
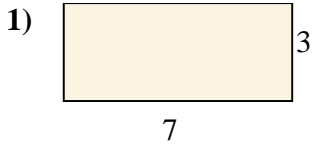




calculez l'aire de chaque rectangle (en  $\text{cm}^2$ )

**Réponses**

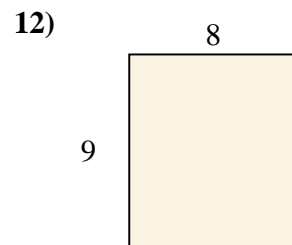
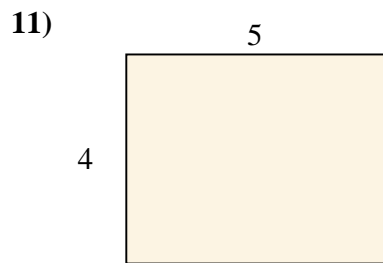
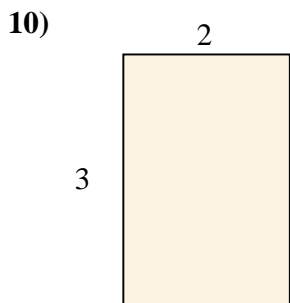
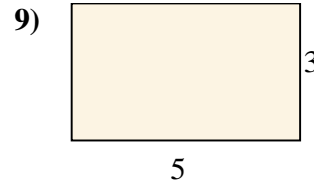

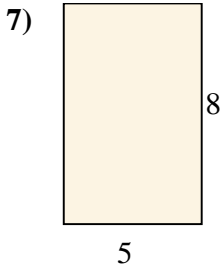
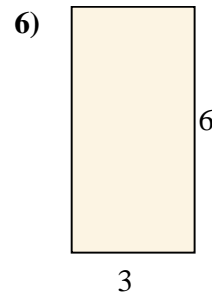
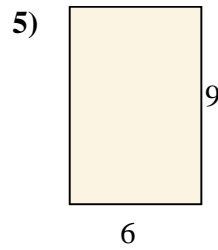
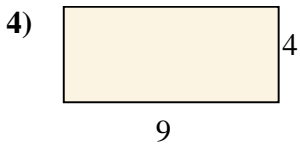
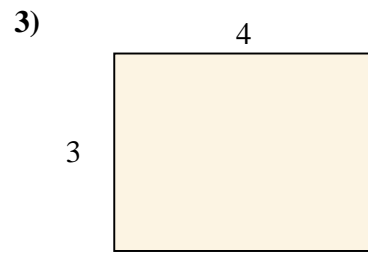
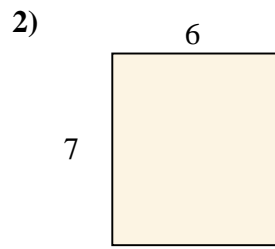
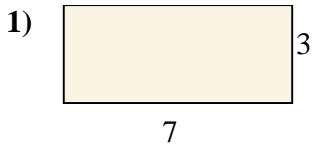


- 1. \_\_\_\_\_
- 2. \_\_\_\_\_
- 3. \_\_\_\_\_
- 4. \_\_\_\_\_
- 5. \_\_\_\_\_
- 6. \_\_\_\_\_
- 7. \_\_\_\_\_
- 8. \_\_\_\_\_
- 9. \_\_\_\_\_
- 10. \_\_\_\_\_
- 11. \_\_\_\_\_
- 12. \_\_\_\_\_



calculez l'aire de chaque rectangle (en cm<sup>2</sup>)

**Réponses**



1. 21

2. 42

3. 12

4. 36

5. 54

6. 18

7. 40

8. 14

9. 15

10. 6

11. 20

12. 72