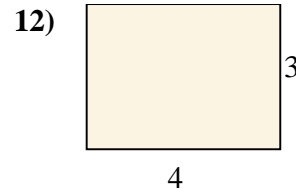
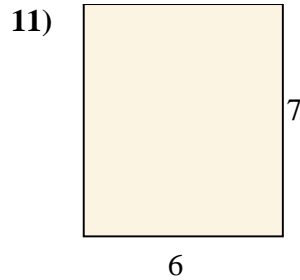
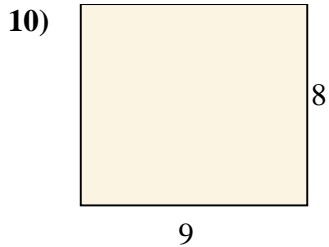
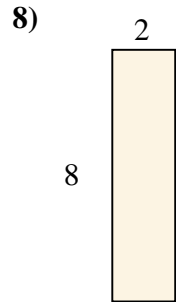
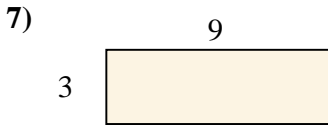
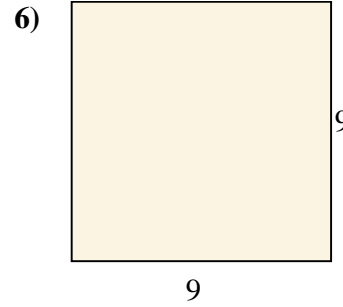
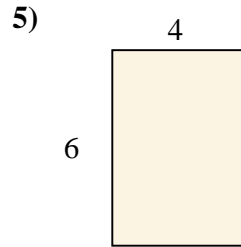
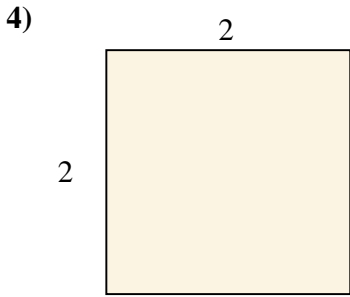
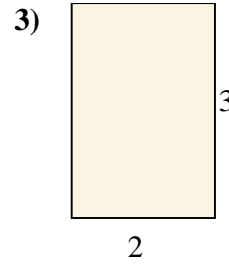
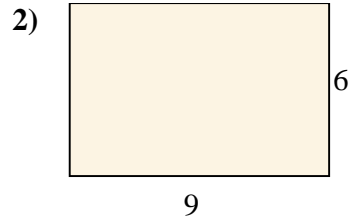
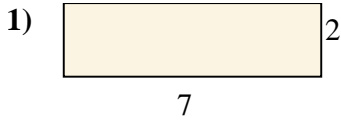




calculez l'aire de chaque rectangle (en cm<sup>2</sup>)

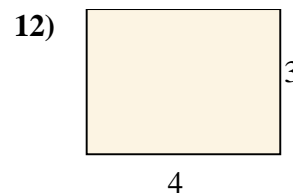
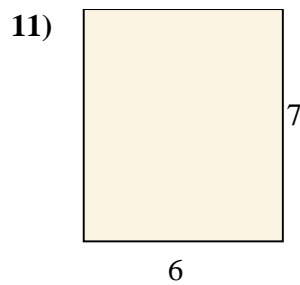
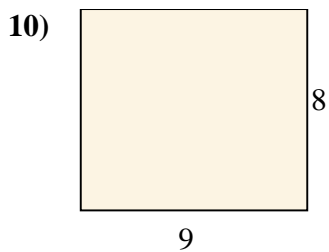
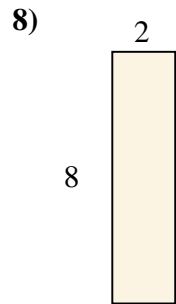
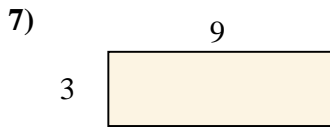
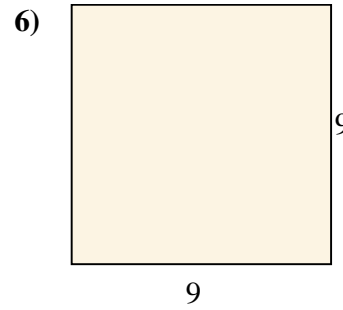
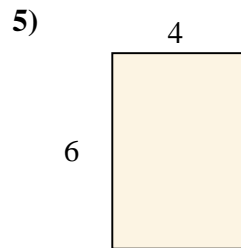
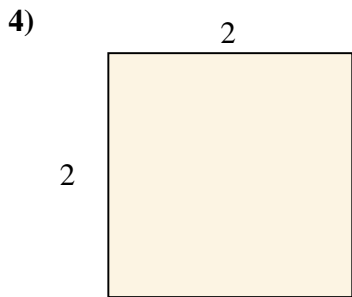
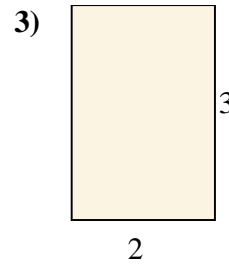
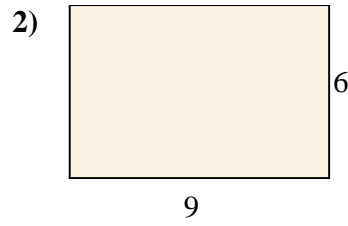
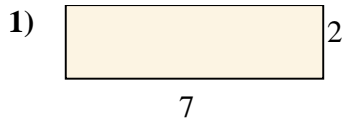


**Réponses**

- 1. \_\_\_\_\_
- 2. \_\_\_\_\_
- 3. \_\_\_\_\_
- 4. \_\_\_\_\_
- 5. \_\_\_\_\_
- 6. \_\_\_\_\_
- 7. \_\_\_\_\_
- 8. \_\_\_\_\_
- 9. \_\_\_\_\_
- 10. \_\_\_\_\_
- 11. \_\_\_\_\_
- 12. \_\_\_\_\_



calculez l'aire de chaque rectangle (en cm<sup>2</sup>)



**Réponses**

1. 14

2. 54

3. 6

4. 4

5. 24

6. 81

7. 27

8. 16

9. 28

10. 72

11. 42

12. 12