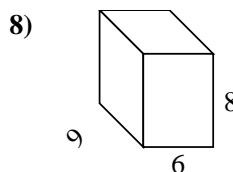
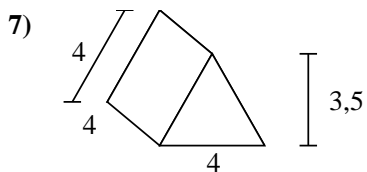
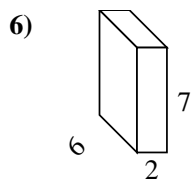
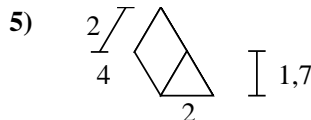
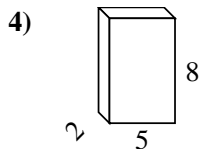
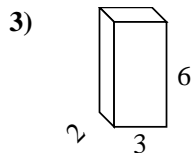
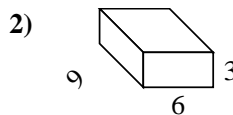
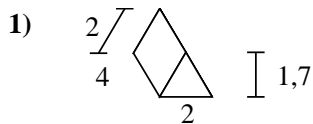
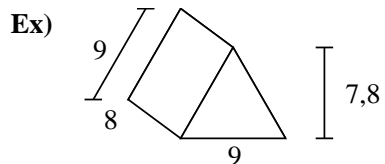




Calculez la surface de chaque figure géométrique. Les unités sont en cm.



Réponses

Ex. **286,2 cm²**

1. _____

2. _____

3. _____

4. _____

5. _____

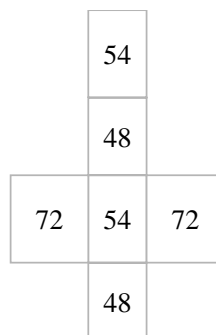
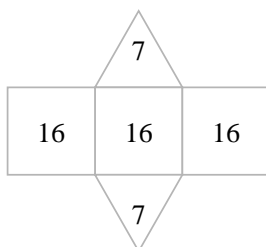
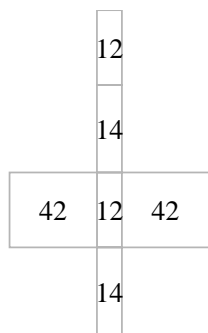
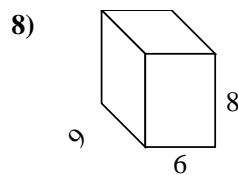
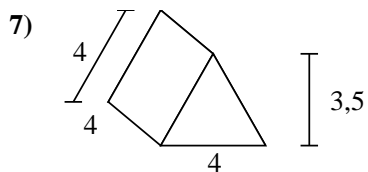
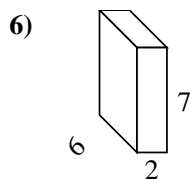
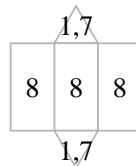
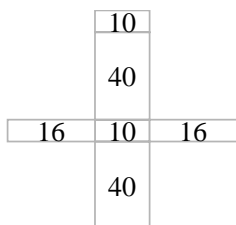
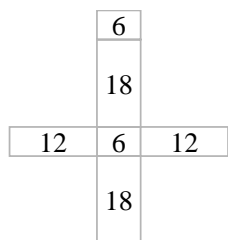
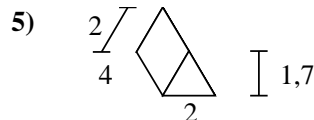
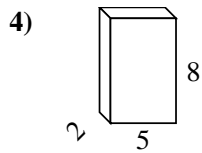
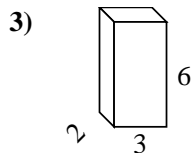
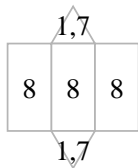
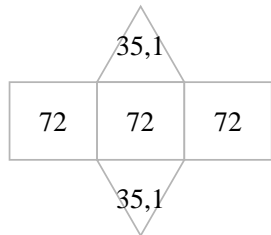
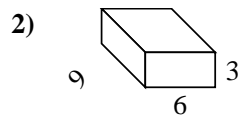
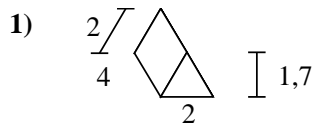
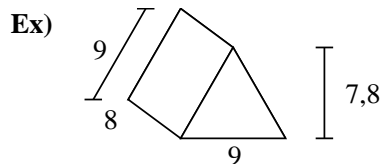
6. _____

7. _____

8. _____



Calculez la surface de chaque figure géométrique. Les unités sont en cm.

**Réponses**Ex. 286,2 cm²1. 27,4 cm²2. 198 cm²3. 72 cm²4. 132 cm²5. 27,4 cm²6. 136 cm²7. 62 cm²8. 348 cm²