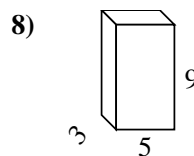
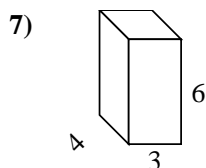
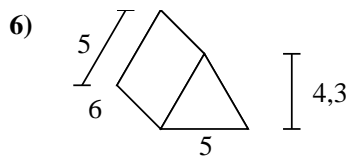
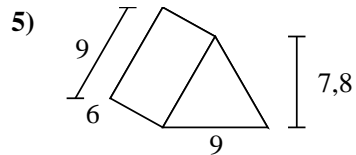
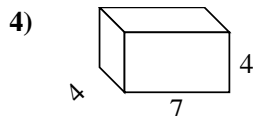
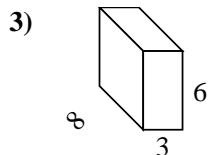
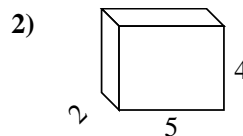
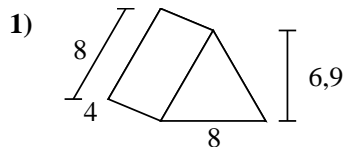
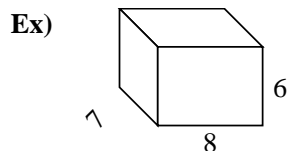




Calculez la surface de chaque figure géométrique. Les unités sont en cm.



Réponses

Ex. 292 cm²

1. _____

2. _____

3. _____

4. _____

5. _____

6. _____

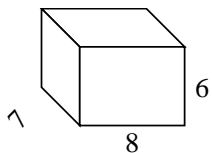
7. _____

8. _____

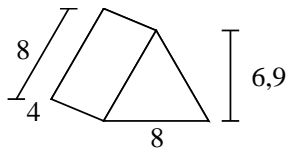


Calculez la surface de chaque figure géométrique. Les unités sont en cm.

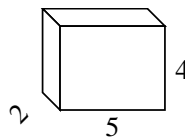
Ex)



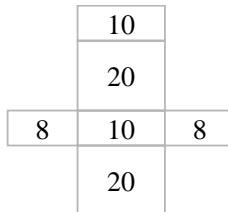
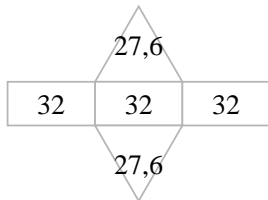
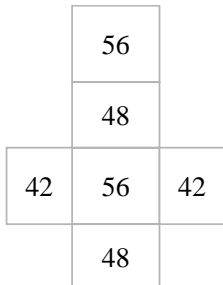
1)



2)



Ex.

292 cm²

1.

151,2 cm²

2.

76 cm²

3.

180 cm²

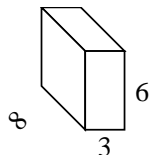
4.

144 cm²

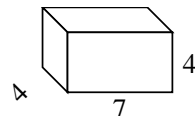
5.

232,2 cm²

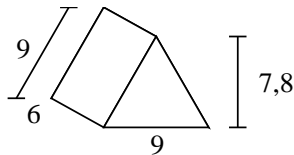
3)



4)



5)



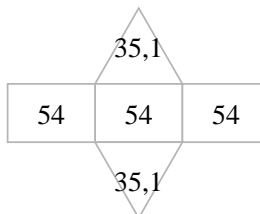
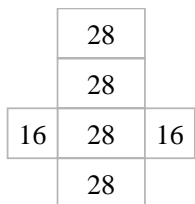
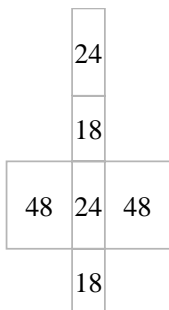
6.

111,5 cm²

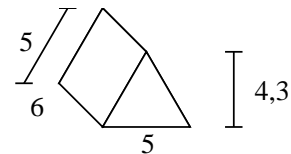
7.

108 cm²

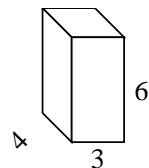
8.

174 cm²

6)



7)



8)

