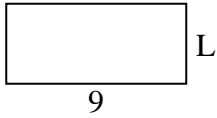




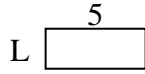
Déterminez la valeur de 'L'.

Réponses


1) Aire = $36u^2$



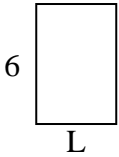
2) Aire = $10u^2$



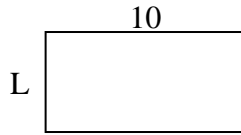
3) Aire = $14u^2$



4) Aire = $24u^2$



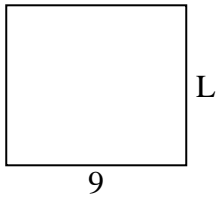
5) Aire = $50u^2$



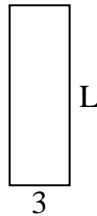
6) Aire = $6u^2$



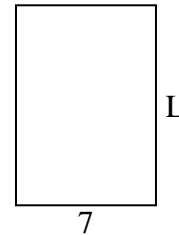
7) Aire = $72u^2$



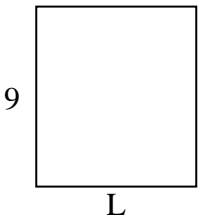
8) Aire = $27u^2$



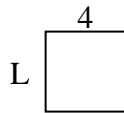
9) Aire = $70u^2$



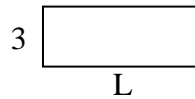
10) Aire = $72u^2$




11) Aire = $16u^2$



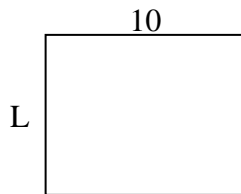
12) Aire = $24u^2$




13) Aire = $14u^2$



14) Aire = $80u^2$



15) Aire = $27u^2$



1. _____

2. _____

3. _____

4. _____

5. _____

6. _____

7. _____

8. _____

9. _____

10. _____

11. _____

12. _____

13. _____

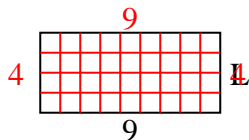
14. _____

15. _____

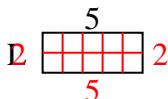


Déterminez la valeur de 'L'.

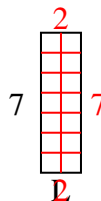
1) Aire = $36u^2$



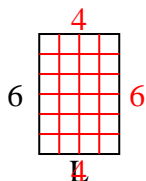
2) Aire = $10u^2$



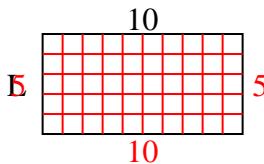
3) Aire = $14u^2$



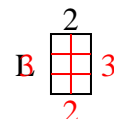
4) Aire = $24u^2$



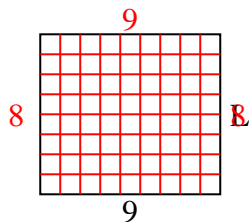
5) Aire = $50u^2$



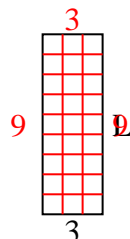
6) Aire = $6u^2$



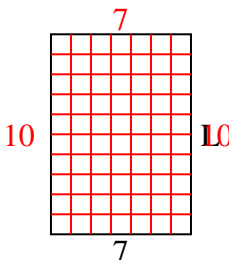
7) Aire = $72u^2$



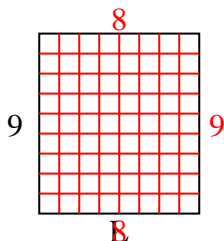
8) Aire = $27u^2$



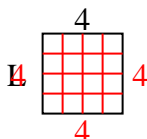
9) Aire = $70u^2$



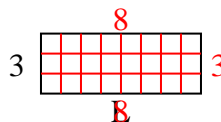
10) Aire = $72u^2$



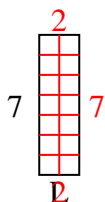
11) Aire = $16u^2$



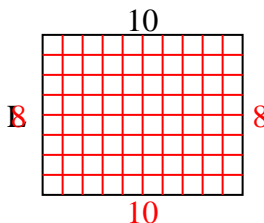
12) Aire = $24u^2$



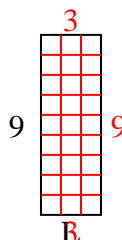
13) Aire = $14u^2$



14) Aire = $80u^2$



15) Aire = $27u^2$

**Réponses**1. **4**2. **2**3. **2**4. **4**5. **5**6. **3**7. **8**8. **9**9. **10**10. **8**11. **4**12. **8**13. **2**14. **8**15. **3**