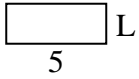




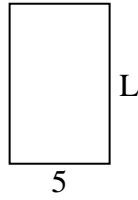
Déterminez la valeur de 'L'.

Réponses

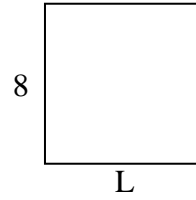
1) Aire = $10u^2$



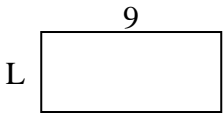
2) Aire = $40u^2$



3) Aire = $64u^2$



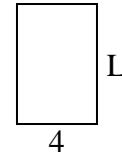
4) Aire = $36u^2$



5) Aire = $12u^2$




6) Aire = $24u^2$



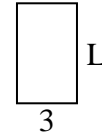
7) Aire = $12u^2$



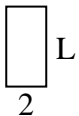
8) Aire = $20u^2$



9) Aire = $15u^2$



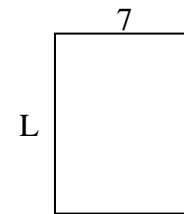
10) Aire = $8u^2$



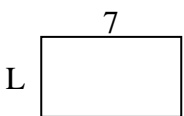
11) Aire = $10u^2$



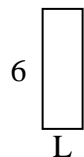
12) Aire = $63u^2$



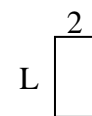
13) Aire = $28u^2$



14) Aire = $12u^2$



15) Aire = $8u^2$

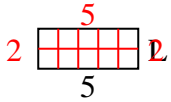


1. _____
2. _____
3. _____
4. _____
5. _____
6. _____
7. _____
8. _____
9. _____
10. _____
11. _____
12. _____
13. _____
14. _____
15. _____

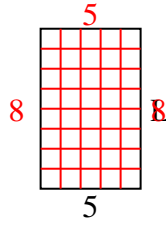


Déterminez la valeur de 'L'.

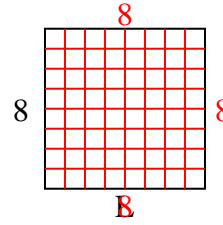
1) Aire = $10u^2$



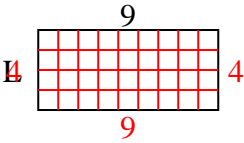
2) Aire = $40u^2$



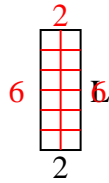
3) Aire = $64u^2$



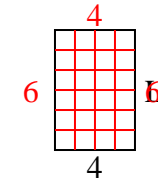
4) Aire = $36u^2$



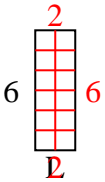
5) Aire = $12u^2$



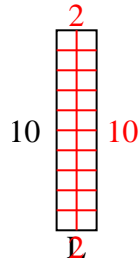
6) Aire = $24u^2$



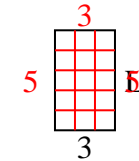
7) Aire = $12u^2$



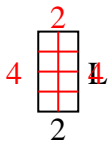
8) Aire = $20u^2$



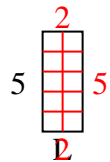
9) Aire = $15u^2$



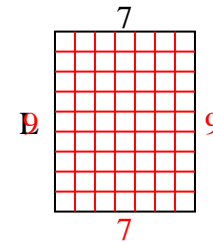
10) Aire = $8u^2$



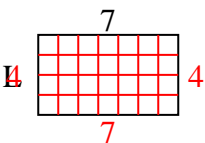
11) Aire = $10u^2$



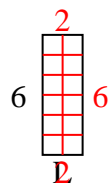
12) Aire = $63u^2$



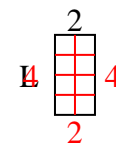
13) Aire = $28u^2$



14) Aire = $12u^2$



15) Aire = $8u^2$

**Réponses**1. **2**2. **8**3. **8**4. **4**5. **6**6. **6**7. **2**8. **2**9. **5**10. **4**11. **2**12. **9**13. **4**14. **2**15. **4**