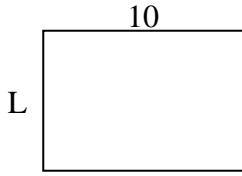




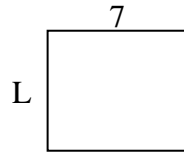
Déterminez la valeur de 'L'.

Réponses

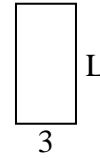
1) Aire = $70u^2$



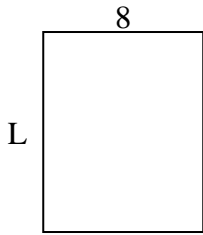
2) Aire = $42u^2$



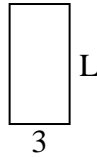
3) Aire = $18u^2$



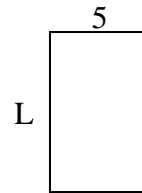
4) Aire = $80u^2$



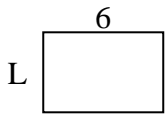
5) Aire = $18u^2$



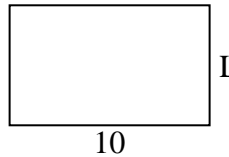
6) Aire = $40u^2$



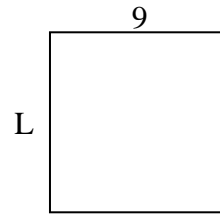
7) Aire = $24u^2$



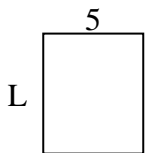
8) Aire = $60u^2$



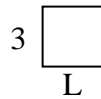
9) Aire = $81u^2$



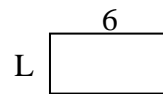
10) Aire = $30u^2$



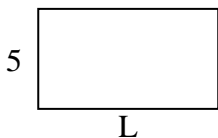
11) Aire = $9u^2$



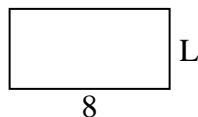
12) Aire = $18u^2$



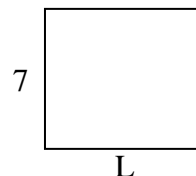
13) Aire = $45u^2$



14) Aire = $32u^2$



15) Aire = $56u^2$

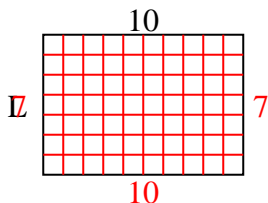


1. _____
2. _____
3. _____
4. _____
5. _____
6. _____
7. _____
8. _____
9. _____
10. _____
11. _____
12. _____
13. _____
14. _____
15. _____

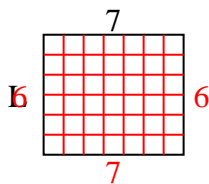


Déterminez la valeur de 'L'.

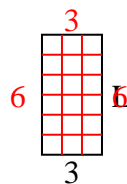
1) Aire = $70u^2$



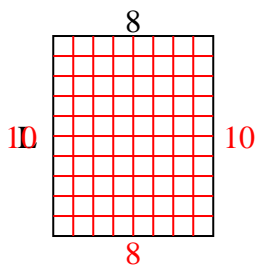
2) Aire = $42u^2$



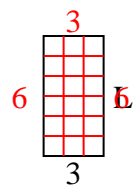
3) Aire = $18u^2$



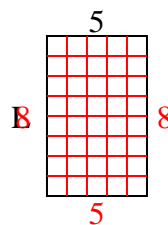
4) Aire = $80u^2$



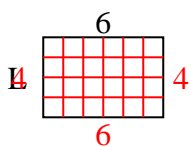
5) Aire = $18u^2$



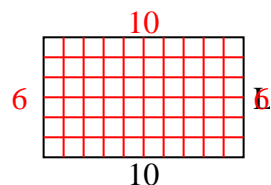
6) Aire = $40u^2$



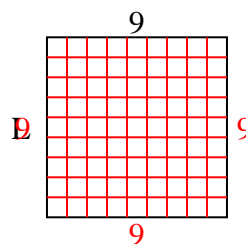
7) Aire = $24u^2$



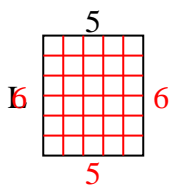
8) Aire = $60u^2$



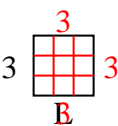
9) Aire = $81u^2$



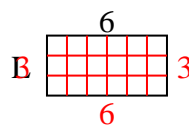
10) Aire = $30u^2$



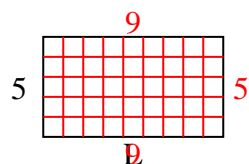
11) Aire = $9u^2$



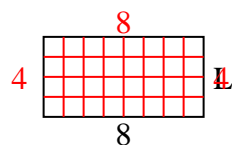
12) Aire = $18u^2$



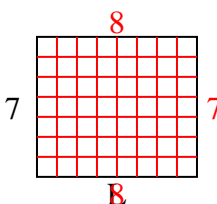
13) Aire = $45u^2$



14) Aire = $32u^2$



15) Aire = $56u^2$

**Réponses**1. 72. 63. 64. 105. 66. 87. 48. 69. 910. 611. 312. 313. 914. 415. 8