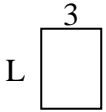




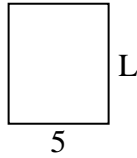
Déterminez la valeur de 'L'.

Réponses

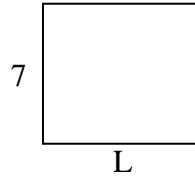
1) Aire = $12u^2$



2) Aire = $30u^2$



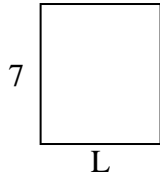
3) Aire = $56u^2$



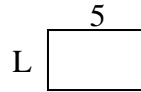
4) Aire = $20u^2$



5) Aire = $42u^2$



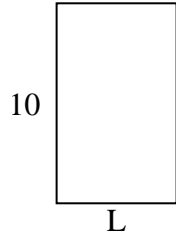
6) Aire = $15u^2$




7) Aire = $12u^2$



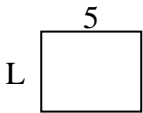
8) Aire = $60u^2$



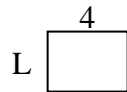
9) Aire = $36u^2$




10) Aire = $20u^2$



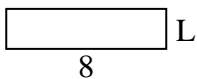
11) Aire = $12u^2$



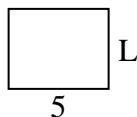
12) Aire = $32u^2$



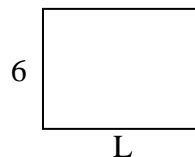
13) Aire = $16u^2$



14) Aire = $20u^2$



15) Aire = $48u^2$



1. _____

2. _____

3. _____

4. _____

5. _____

6. _____

7. _____

8. _____

9. _____

10. _____

11. _____

12. _____

13. _____

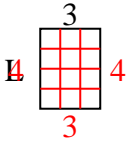
14. _____

15. _____

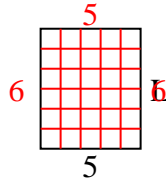


Déterminez la valeur de 'L'.

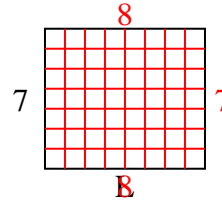
1) Aire = $12u^2$



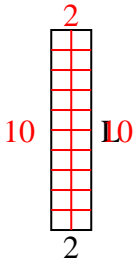
2) Aire = $30u^2$



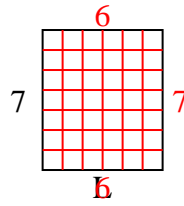
3) Aire = $56u^2$



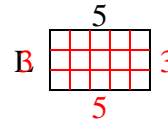
4) Aire = $20u^2$



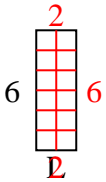
5) Aire = $42u^2$



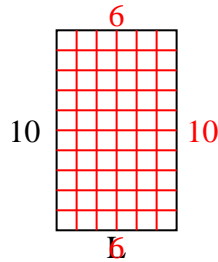
6) Aire = $15u^2$



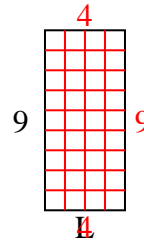
7) Aire = $12u^2$



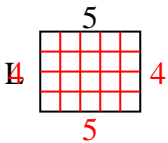
8) Aire = $60u^2$



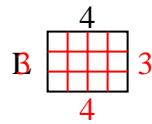
9) Aire = $36u^2$



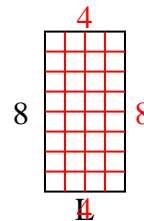
10) Aire = $20u^2$



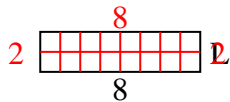
11) Aire = $12u^2$



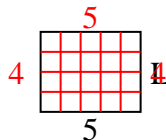
12) Aire = $32u^2$



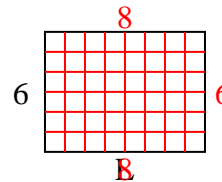
13) Aire = $16u^2$



14) Aire = $20u^2$



15) Aire = $48u^2$

**Réponses**1. **4**2. **6**3. **8**4. **10**5. **6**6. **3**7. **2**8. **6**9. **4**10. **4**11. **3**12. **4**13. **2**14. **4**15. **8**