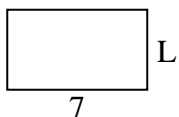




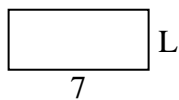
Déterminez la valeur de 'L'.

Réponses

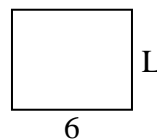
1) Aire = $28u^2$



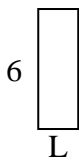
2) Aire = $21u^2$



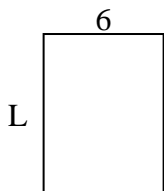
3) Aire = $30u^2$



4) Aire = $12u^2$



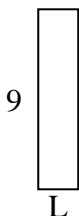
5) Aire = $48u^2$



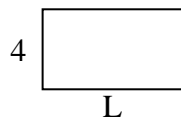
6) Aire = $6u^2$



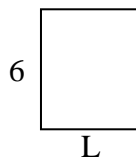
7) Aire = $18u^2$



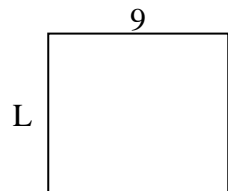
8) Aire = $28u^2$



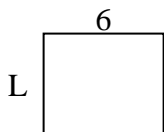
9) Aire = $30u^2$



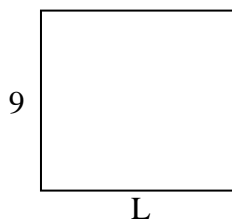
10) Aire = $72u^2$



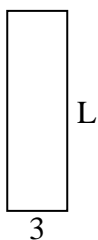
11) Aire = $30u^2$



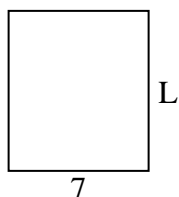
12) Aire = $90u^2$



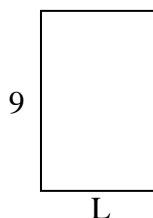
13) Aire = $30u^2$



14) Aire = $56u^2$



15) Aire = $54u^2$



1. _____

2. _____

3. _____

4. _____

5. _____

6. _____

7. _____

8. _____

9. _____

10. _____

11. _____

12. _____

13. _____

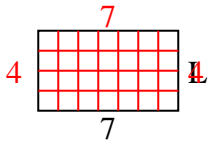
14. _____

15. _____

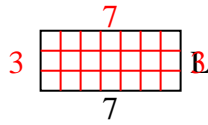


Déterminez la valeur de 'L'.

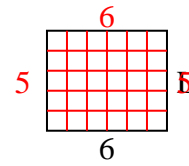
1) Aire = $28u^2$



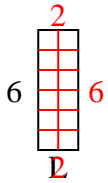
2) Aire = $21u^2$



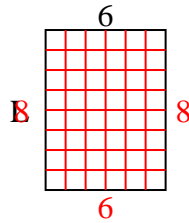
3) Aire = $30u^2$



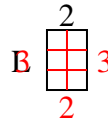
4) Aire = $12u^2$



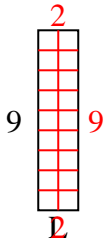
5) Aire = $48u^2$



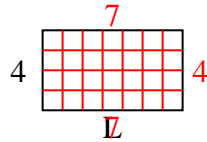
6) Aire = $6u^2$



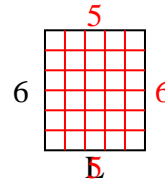
7) Aire = $18u^2$



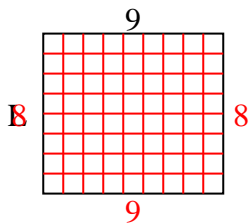
8) Aire = $28u^2$



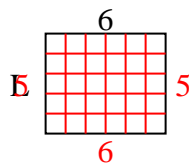
9) Aire = $30u^2$



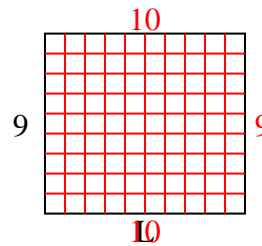
10) Aire = $72u^2$



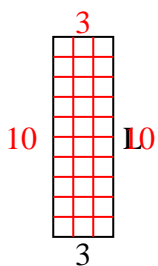
11) Aire = $30u^2$



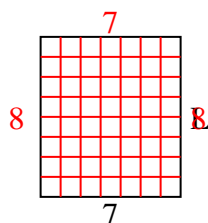
12) Aire = $90u^2$



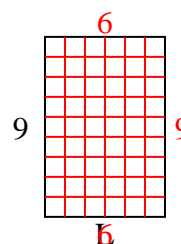
13) Aire = $30u^2$



14) Aire = $56u^2$



15) Aire = $54u^2$

**Réponses**1. 42. 33. 54. 25. 86. 37. 28. 79. 510. 811. 512. 1013. 1014. 815. 6