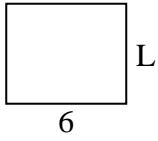




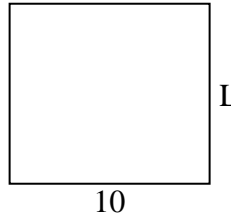
Déterminez la valeur de 'L'.

Réponses

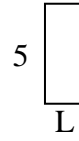
1) Aire = $30u^2$



2) Aire = $90u^2$



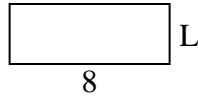
3) Aire = $10u^2$



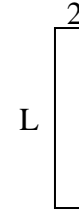
4) Aire = $14u^2$



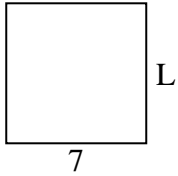
5) Aire = $24u^2$



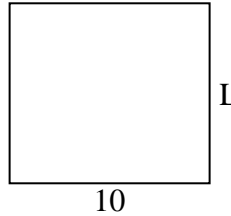
6) Aire = $18u^2$



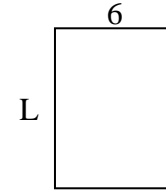
7) Aire = $49u^2$



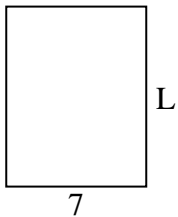
8) Aire = $90u^2$



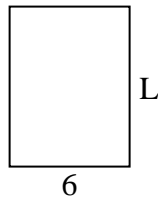
9) Aire = $48u^2$



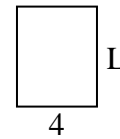
10) Aire = $63u^2$



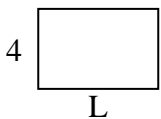
11) Aire = $48u^2$



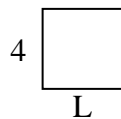
12) Aire = $20u^2$



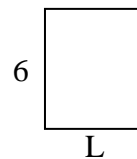
13) Aire = $24u^2$



14) Aire = $16u^2$



15) Aire = $30u^2$

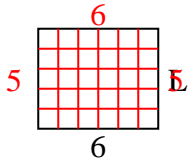


1. _____
2. _____
3. _____
4. _____
5. _____
6. _____
7. _____
8. _____
9. _____
10. _____
11. _____
12. _____
13. _____
14. _____
15. _____

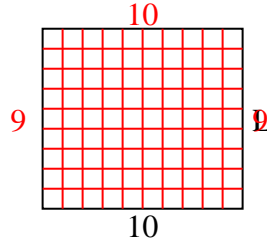


Déterminez la valeur de 'L'.

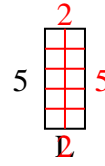
1) Aire = $30u^2$



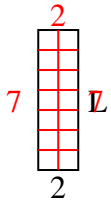
2) Aire = $90u^2$



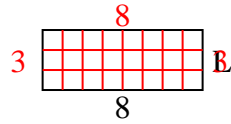
3) Aire = $10u^2$



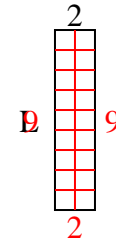
4) Aire = $14u^2$



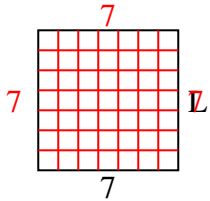
5) Aire = $24u^2$



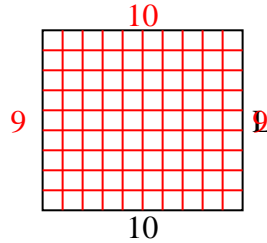
6) Aire = $18u^2$



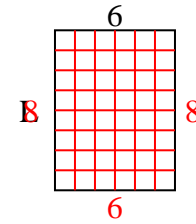
7) Aire = $49u^2$



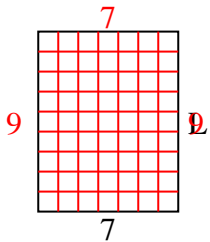
8) Aire = $90u^2$



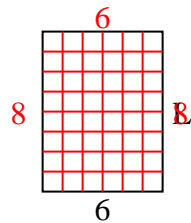
9) Aire = $48u^2$



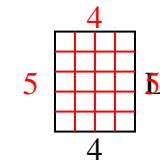
10) Aire = $63u^2$



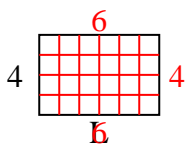
11) Aire = $48u^2$



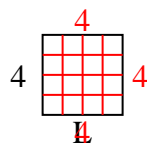
12) Aire = $20u^2$



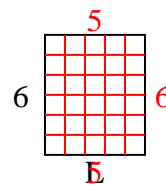
13) Aire = $24u^2$



14) Aire = $16u^2$



15) Aire = $30u^2$

**Réponses**1. 52. 93. 24. 75. 36. 97. 78. 99. 810. 911. 812. 513. 614. 415. 5