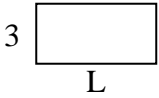




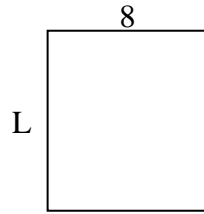
Déterminez la valeur de 'L'.

Réponses

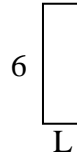
1) Aire = $18u^2$



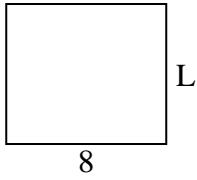
2) Aire = $72u^2$



3) Aire = $12u^2$



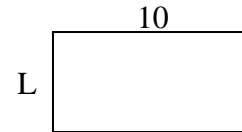
4) Aire = $56u^2$



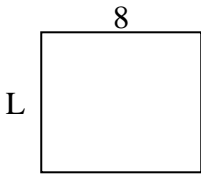
5) Aire = $6u^2$



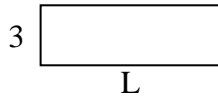
6) Aire = $50u^2$



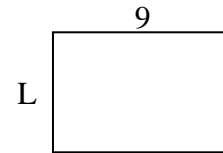
7) Aire = $56u^2$



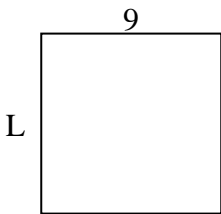
8) Aire = $27u^2$



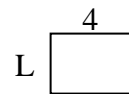
9) Aire = $54u^2$



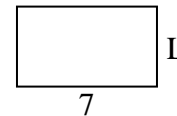
10) Aire = $81u^2$



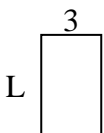
11) Aire = $12u^2$




12) Aire = $28u^2$



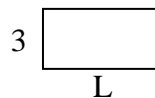
13) Aire = $15u^2$



14) Aire = $20u^2$



15) Aire = $18u^2$

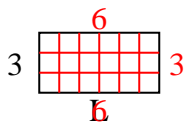


1. _____
2. _____
3. _____
4. _____
5. _____
6. _____
7. _____
8. _____
9. _____
10. _____
11. _____
12. _____
13. _____
14. _____
15. _____

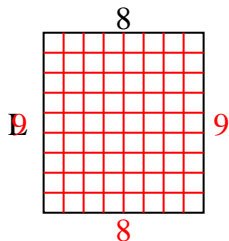


Déterminez la valeur de 'L'.

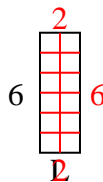
1) Aire = $18u^2$



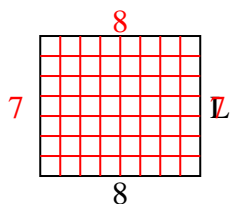
2) Aire = $72u^2$



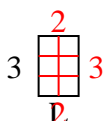
3) Aire = $12u^2$



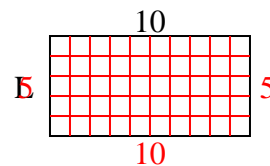
4) Aire = $56u^2$



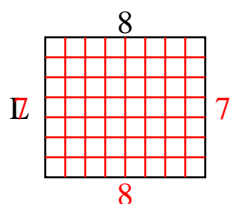
5) Aire = $6u^2$



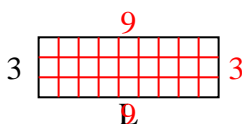
6) Aire = $50u^2$



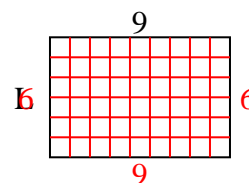
7) Aire = $56u^2$



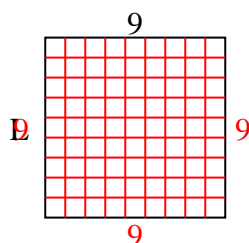
8) Aire = $27u^2$



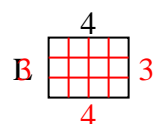
9) Aire = $54u^2$



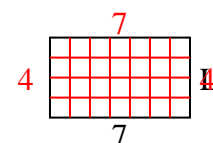
10) Aire = $81u^2$



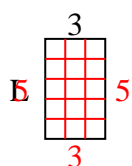
11) Aire = $12u^2$



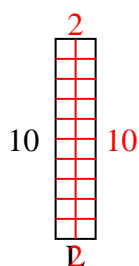
12) Aire = $28u^2$



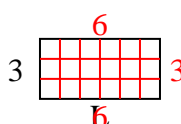
13) Aire = $15u^2$



14) Aire = $20u^2$



15) Aire = $18u^2$

**Réponses**1. **6**2. **9**3. **2**4. **7**5. **2**6. **5**7. **7**8. **9**9. **6**10. **9**11. **3**12. **4**13. **5**14. **2**15. **6**