




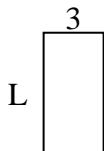
Déterminez la valeur de 'L'.

**Réponses**

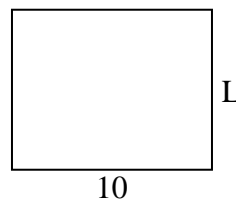
1) Aire =  $20u^2$



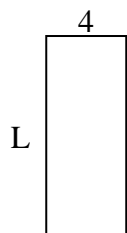
2) Aire =  $18u^2$



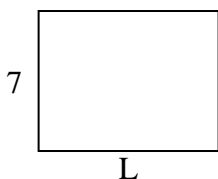
3) Aire =  $80u^2$



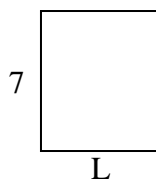
4) Aire =  $40u^2$



5) Aire =  $63u^2$



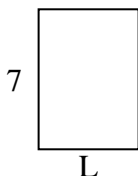
6) Aire =  $42u^2$



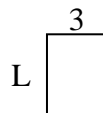
7) Aire =  $8u^2$



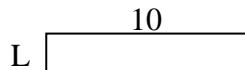
8) Aire =  $35u^2$



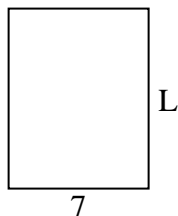
9) Aire =  $12u^2$



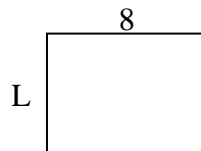
10) Aire =  $20u^2$



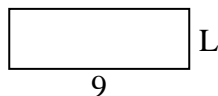
11) Aire =  $63u^2$




12) Aire =  $48u^2$



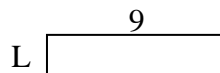
13) Aire =  $27u^2$



14) Aire =  $12u^2$



15) Aire =  $18u^2$



1. \_\_\_\_\_

2. \_\_\_\_\_

3. \_\_\_\_\_

4. \_\_\_\_\_

5. \_\_\_\_\_

6. \_\_\_\_\_

7. \_\_\_\_\_

8. \_\_\_\_\_

9. \_\_\_\_\_

10. \_\_\_\_\_

11. \_\_\_\_\_

12. \_\_\_\_\_

13. \_\_\_\_\_

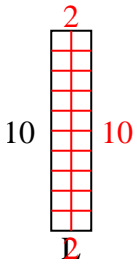
14. \_\_\_\_\_

15. \_\_\_\_\_

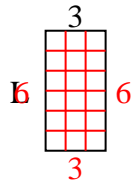


Déterminez la valeur de 'L'.

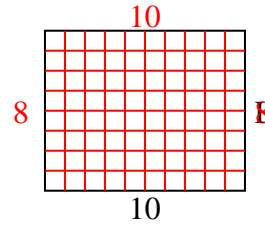
1) Aire =  $20u^2$



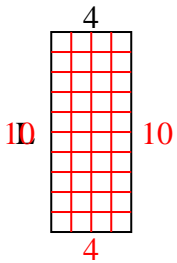
2) Aire =  $18u^2$



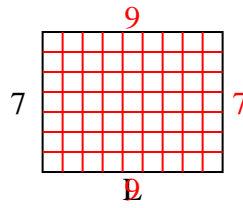
3) Aire =  $80u^2$



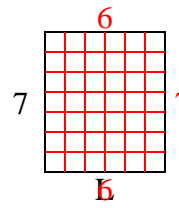
4) Aire =  $40u^2$



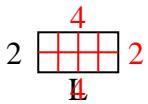
5) Aire =  $63u^2$



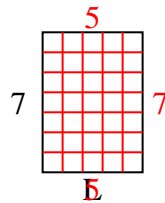
6) Aire =  $42u^2$



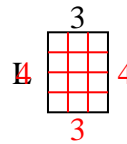
7) Aire =  $8u^2$



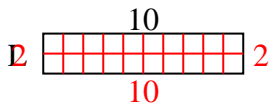
8) Aire =  $35u^2$



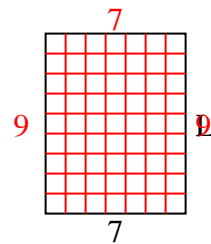
9) Aire =  $12u^2$



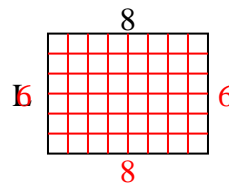
10) Aire =  $20u^2$



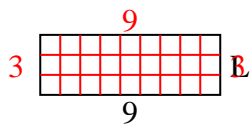
11) Aire =  $63u^2$



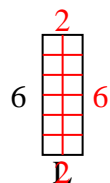
12) Aire =  $48u^2$



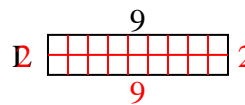
13) Aire =  $27u^2$



14) Aire =  $12u^2$



15) Aire =  $18u^2$

**Réponses**1. 22. 63. 84. 105. 96. 67. 48. 59. 410. 211. 912. 613. 314. 215. 2