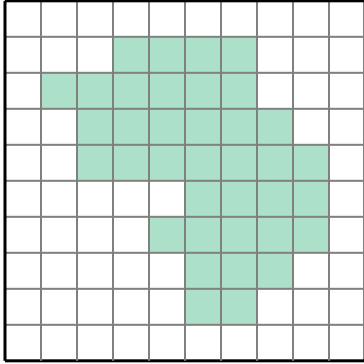




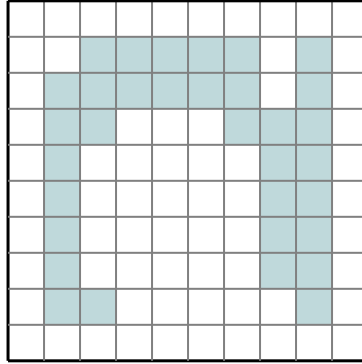
Calculez le périmètre représenté par les blocs colorés. Chaque bloc représente 1 unité (u).

**Réponses**

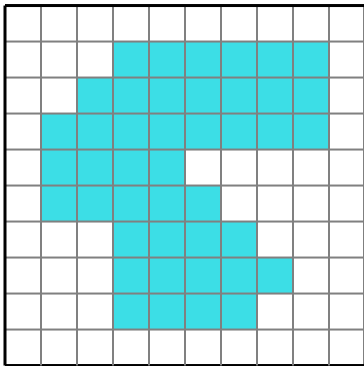
1)



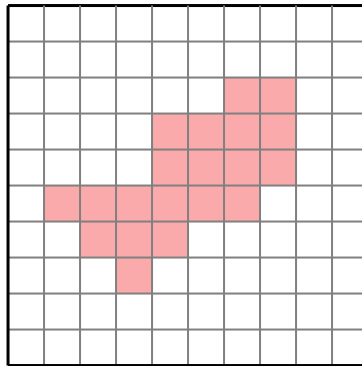
2)



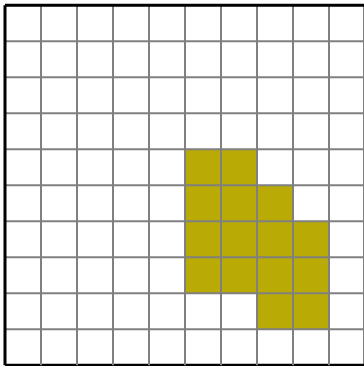
3)



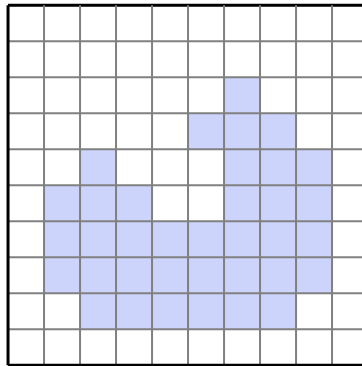
4)



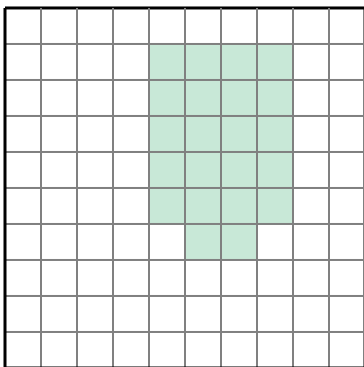
5)



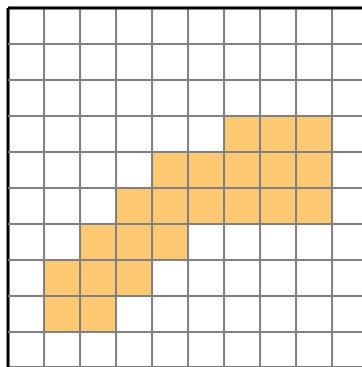
6)



7)



8)

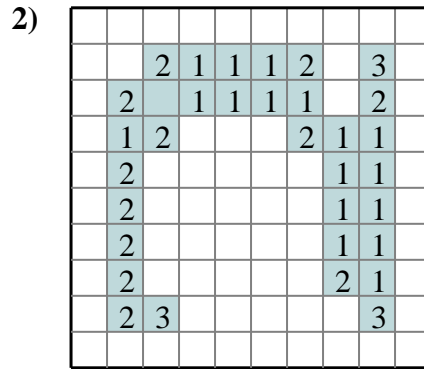
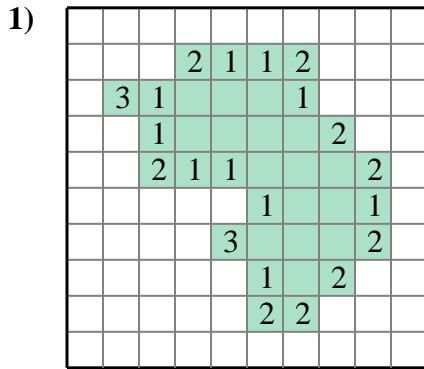


- 1. \_\_\_\_\_
- 2. \_\_\_\_\_
- 3. \_\_\_\_\_
- 4. \_\_\_\_\_
- 5. \_\_\_\_\_
- 6. \_\_\_\_\_
- 7. \_\_\_\_\_
- 8. \_\_\_\_\_



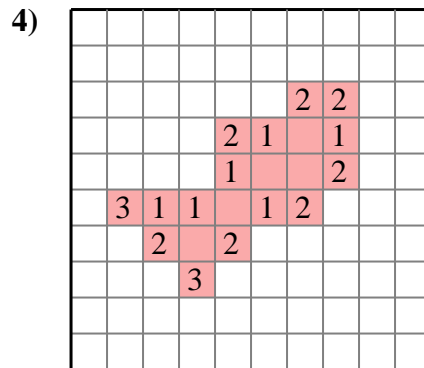
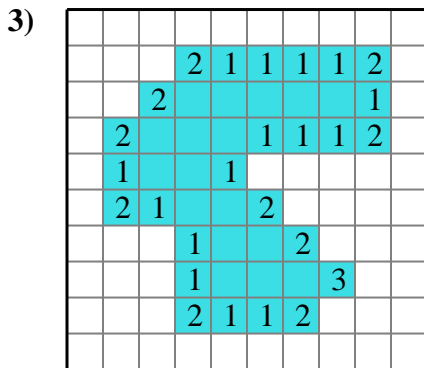
Calculez le périmètre représenté par les blocs colorés. Chaque bloc représente 1 unité (u).

**Réponses**



1. **34**

2. **50**



3. **38**

4. **26**

5. **18**

6. **36**

7. **20**

8. **28**

