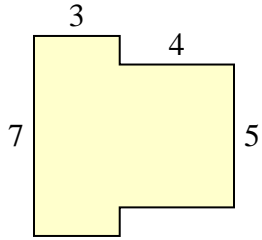




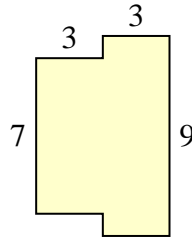
Calculez l'aire totale de chaque figure. Les mesures sont en millimètres (mm).

Réponses

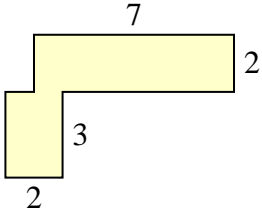
1)



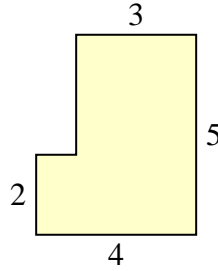
2)



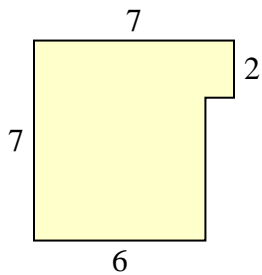
3)



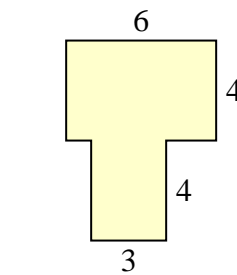
4)



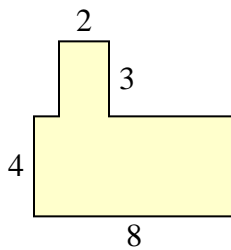
5)



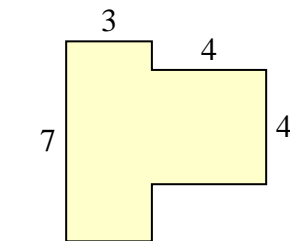
6)



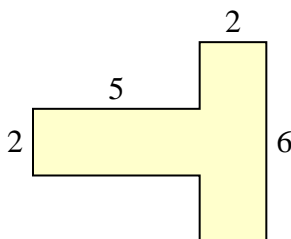
7)



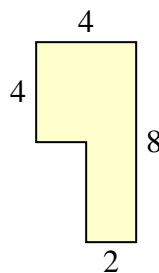
8)



9)



10)

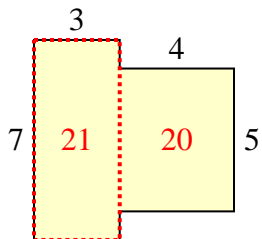


- 1. _____
- 2. _____
- 3. _____
- 4. _____
- 5. _____
- 6. _____
- 7. _____
- 8. _____
- 9. _____
- 10. _____

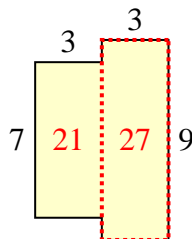


Calculez l'aire totale de chaque figure. Les mesures sont en millimètres (mm).

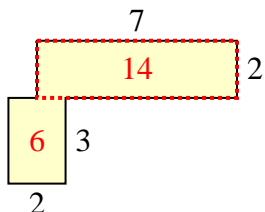
1)



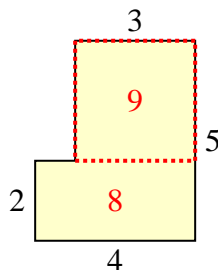
2)



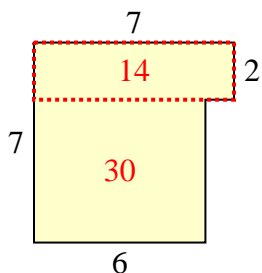
3)



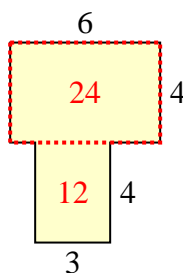
4)



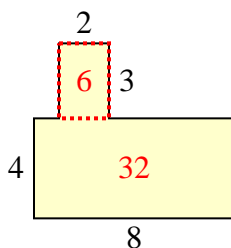
5)



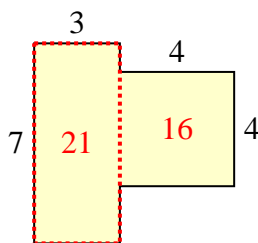
6)



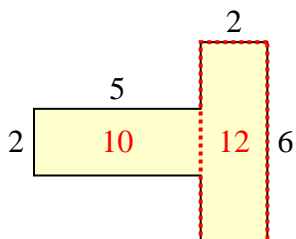
7)



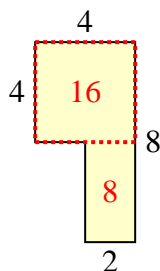
8)



9)



10)

**Réponses**

1. 41 mm²
2. 48 mm²
3. 20 mm²
4. 17 mm²
5. 44 mm²
6. 36 mm²
7. 38 mm²
8. 37 mm²
9. 22 mm²
10. 24 mm²