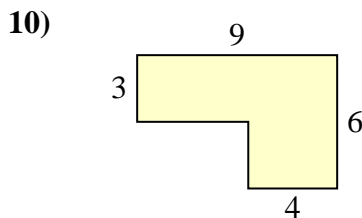
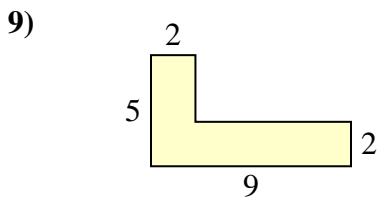
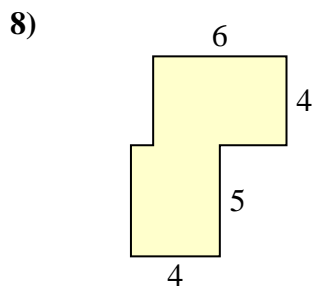
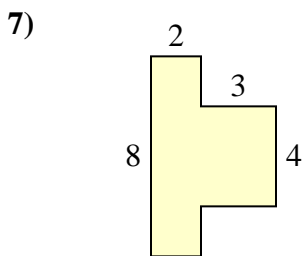
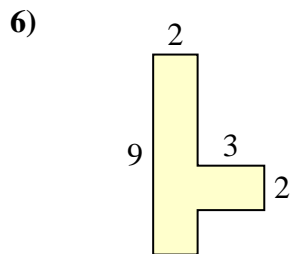
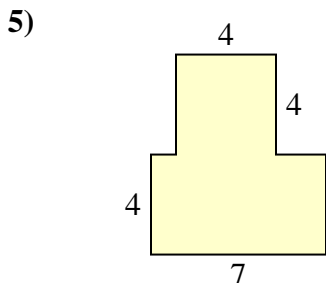
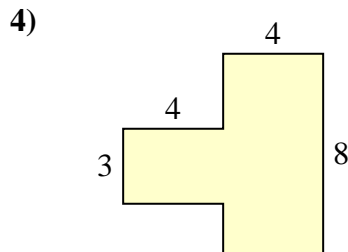
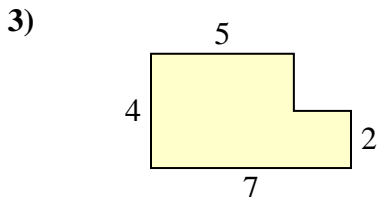
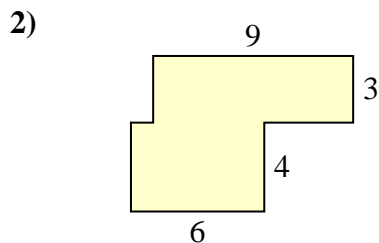
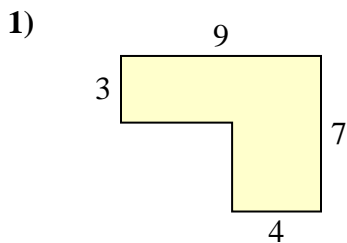




Calculez l'aire totale de chaque figure. Les mesures sont en millimètres (mm).

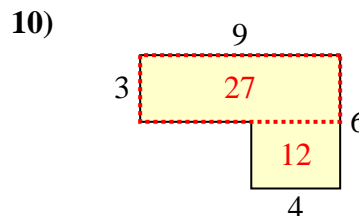
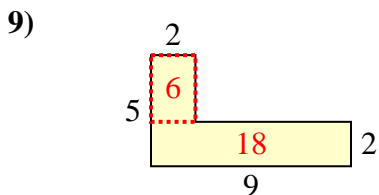
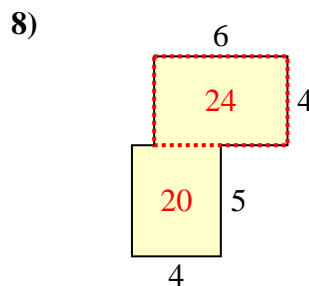
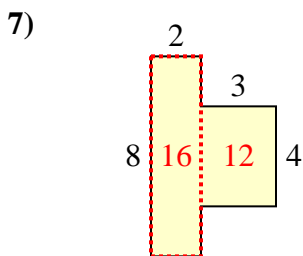
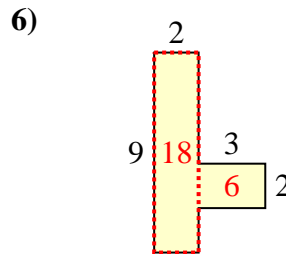
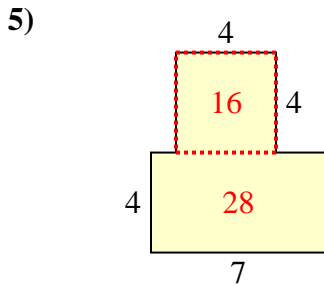
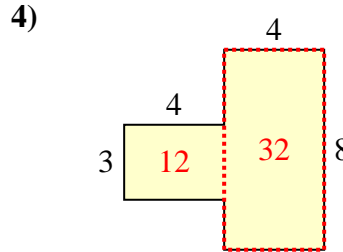
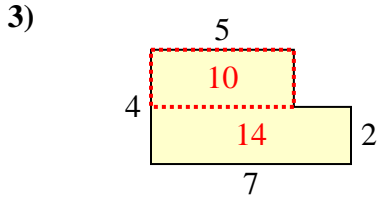
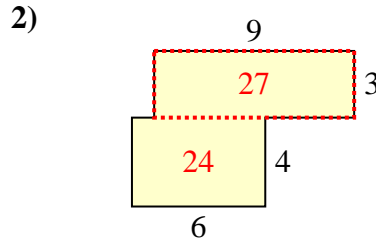
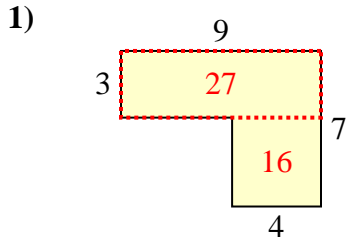
**Réponses**



- 1. \_\_\_\_\_
- 2. \_\_\_\_\_
- 3. \_\_\_\_\_
- 4. \_\_\_\_\_
- 5. \_\_\_\_\_
- 6. \_\_\_\_\_
- 7. \_\_\_\_\_
- 8. \_\_\_\_\_
- 9. \_\_\_\_\_
- 10. \_\_\_\_\_



Calculez l'aire totale de chaque figure. Les mesures sont en millimètres (mm).

**Réponses**

1. 43 mm<sup>2</sup>

2. 51 mm<sup>2</sup>

3. 24 mm<sup>2</sup>

4. 44 mm<sup>2</sup>

5. 44 mm<sup>2</sup>

6. 24 mm<sup>2</sup>

7. 28 mm<sup>2</sup>

8. 44 mm<sup>2</sup>

9. 24 mm<sup>2</sup>

10. 39 mm<sup>2</sup>