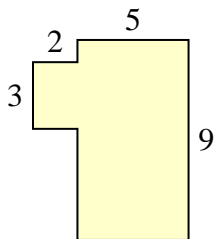




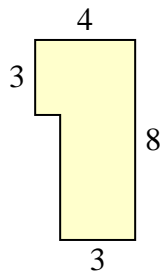
Calculez l'aire totale de chaque figure. Les mesures sont en millimètres (mm).

**Réponses**

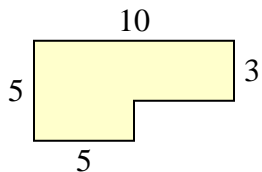
1)



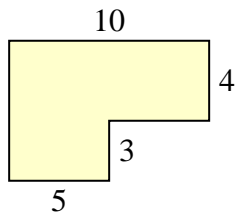
2)



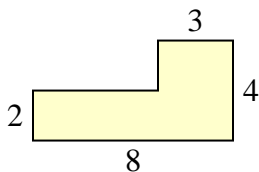
3)



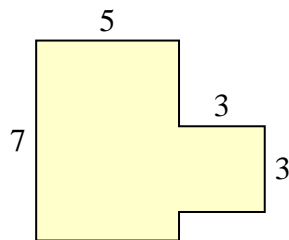
4)



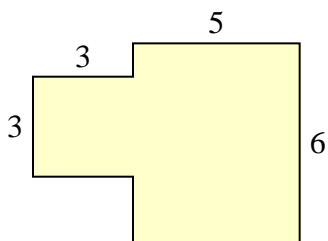
5)



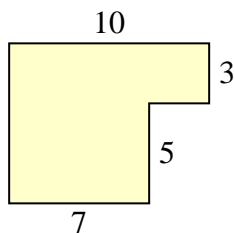
6)



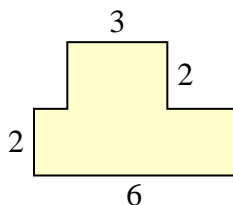
7)



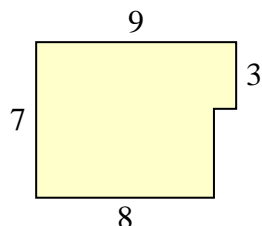
8)



9)



10)



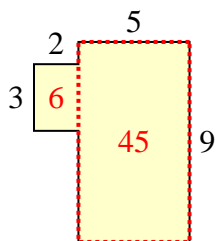
- 1. \_\_\_\_\_
- 2. \_\_\_\_\_
- 3. \_\_\_\_\_
- 4. \_\_\_\_\_
- 5. \_\_\_\_\_
- 6. \_\_\_\_\_
- 7. \_\_\_\_\_
- 8. \_\_\_\_\_
- 9. \_\_\_\_\_
- 10. \_\_\_\_\_



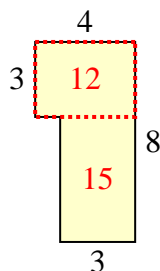
Calculez l'aire totale de chaque figure. Les mesures sont en millimètres (mm).

**Réponses**

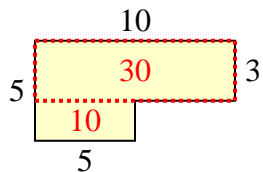
1)



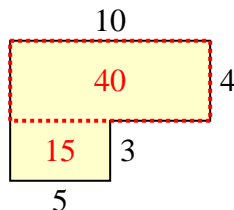
2)



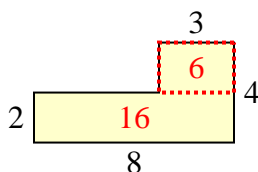
3)



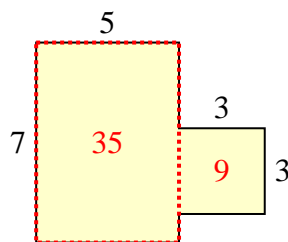
4)



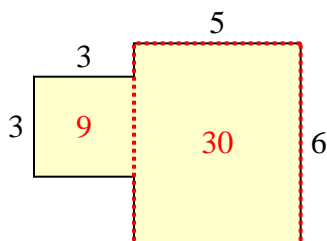
5)



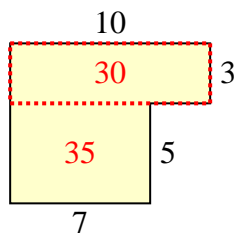
6)



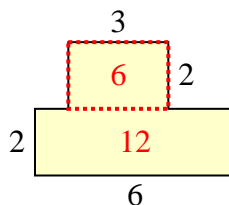
7)



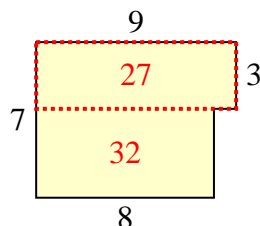
8)



9)



10)



1. 51 mm<sup>2</sup>
2. 27 mm<sup>2</sup>
3. 40 mm<sup>2</sup>
4. 55 mm<sup>2</sup>
5. 22 mm<sup>2</sup>
6. 44 mm<sup>2</sup>
7. 39 mm<sup>2</sup>
8. 65 mm<sup>2</sup>
9. 18 mm<sup>2</sup>
10. 59 mm<sup>2</sup>