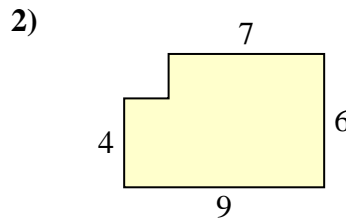
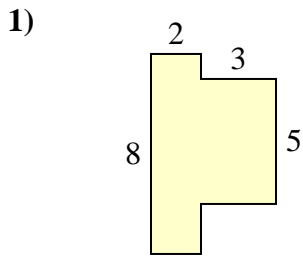


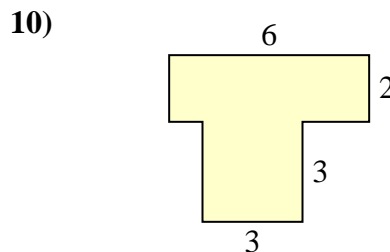
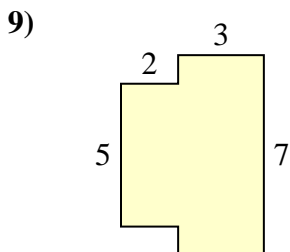
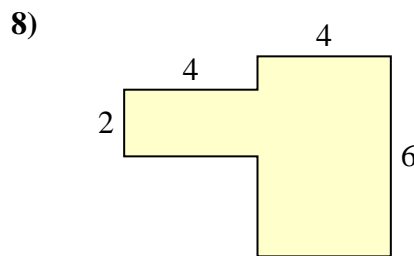
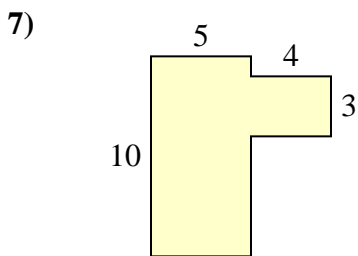
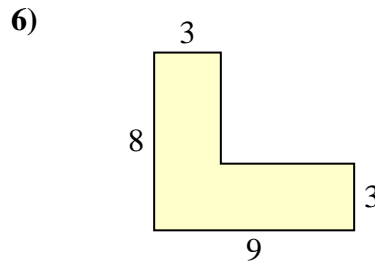
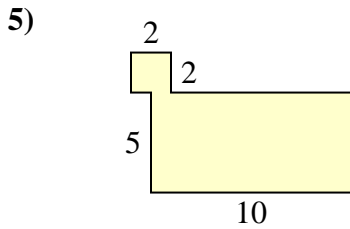
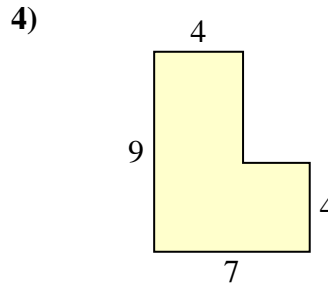
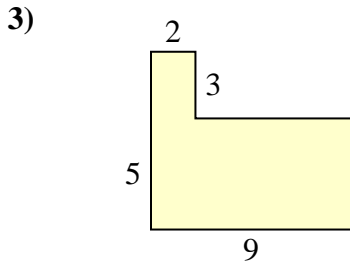


Calculez l'aire totale de chaque figure. Les mesures sont en millimètres (mm).

**Réponses**



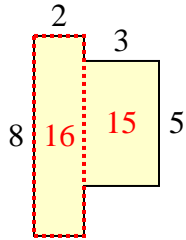
- 1. \_\_\_\_\_
- 2. \_\_\_\_\_
- 3. \_\_\_\_\_
- 4. \_\_\_\_\_
- 5. \_\_\_\_\_
- 6. \_\_\_\_\_
- 7. \_\_\_\_\_
- 8. \_\_\_\_\_
- 9. \_\_\_\_\_
- 10. \_\_\_\_\_



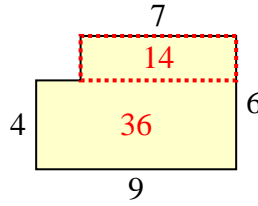


Calculez l'aire totale de chaque figure. Les mesures sont en millimètres (mm).

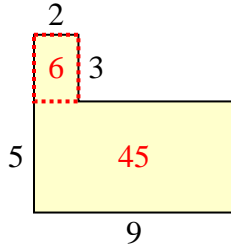
1)



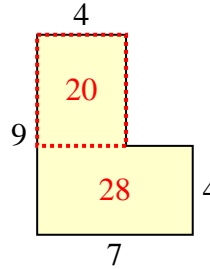
2)



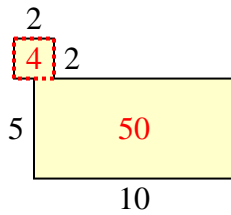
3)



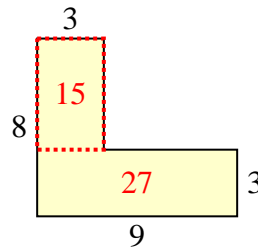
4)



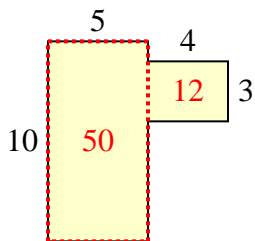
5)



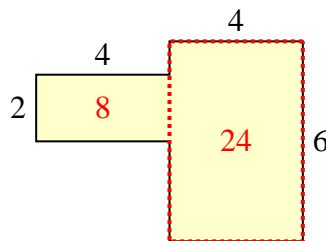
6)



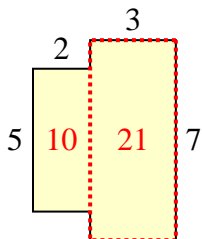
7)



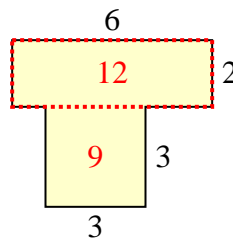
8)



9)



10)

**Réponses**1. 31 mm<sup>2</sup>2. 50 mm<sup>2</sup>3. 51 mm<sup>2</sup>4. 48 mm<sup>2</sup>5. 54 mm<sup>2</sup>6. 42 mm<sup>2</sup>7. 62 mm<sup>2</sup>8. 32 mm<sup>2</sup>9. 31 mm<sup>2</sup>10. 21 mm<sup>2</sup>