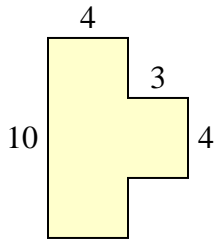


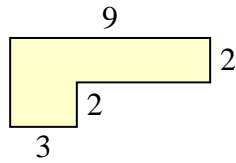


Calculez l'aire totale de chaque figure. Les mesures sont en millimètres (mm).

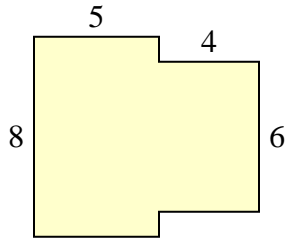
1)



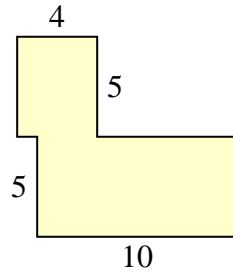
2)



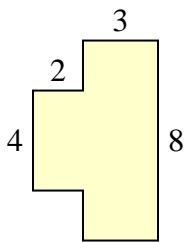
3)



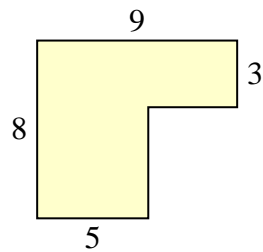
4)



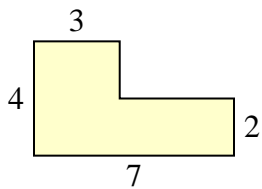
5)



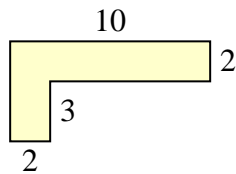
6)



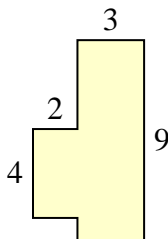
7)



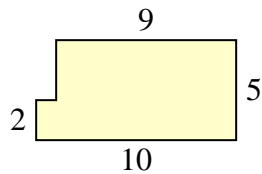
8)



9)



10)



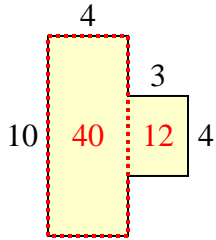
Réponses

- 1. _____
- 2. _____
- 3. _____
- 4. _____
- 5. _____
- 6. _____
- 7. _____
- 8. _____
- 9. _____
- 10. _____

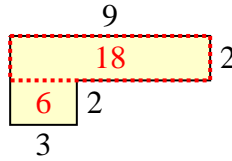


Calculez l'aire totale de chaque figure. Les mesures sont en millimètres (mm).

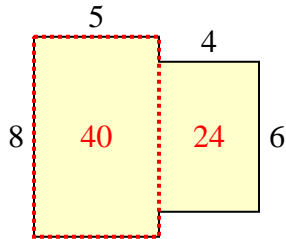
1)



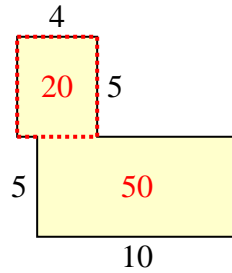
2)



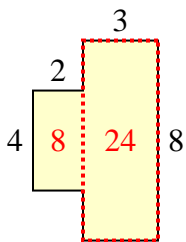
3)



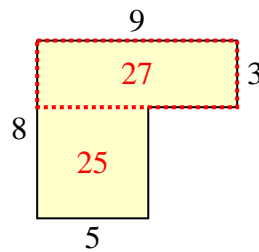
4)



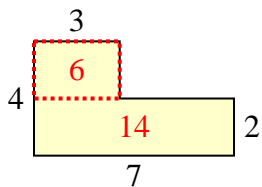
5)



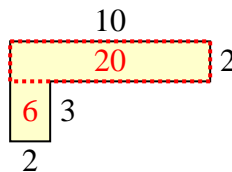
6)



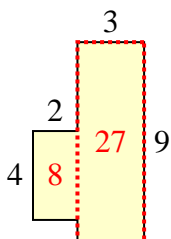
7)



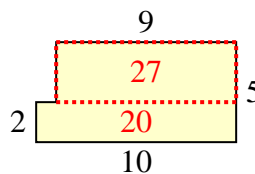
8)



9)



10)

**Réponses**

1. 52 mm²

2. 24 mm²

3. 64 mm²

4. 70 mm²

5. 32 mm²

6. 52 mm²

7. 20 mm²

8. 26 mm²

9. 35 mm²

10. 47 mm²