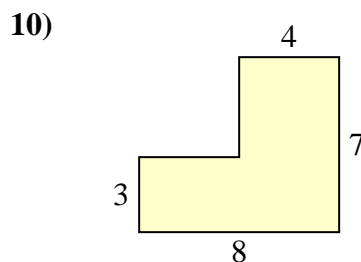
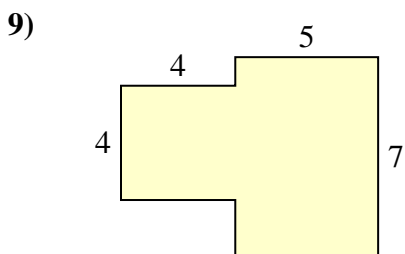
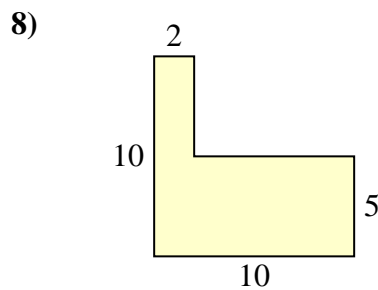
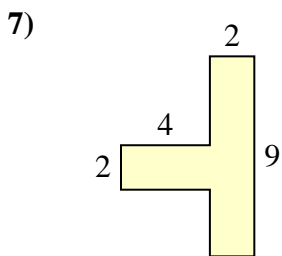
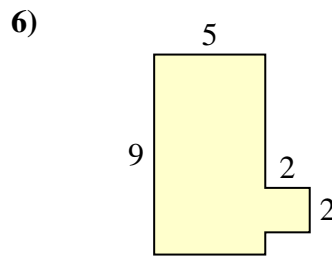
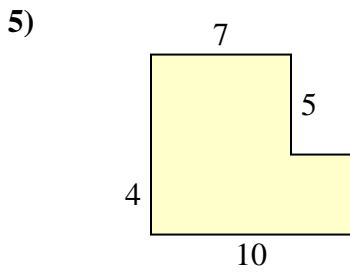
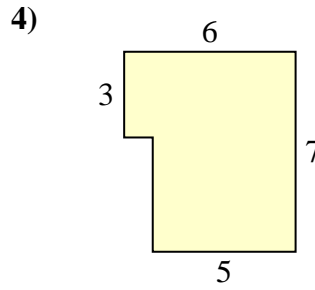
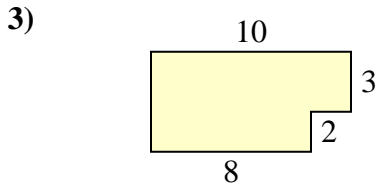
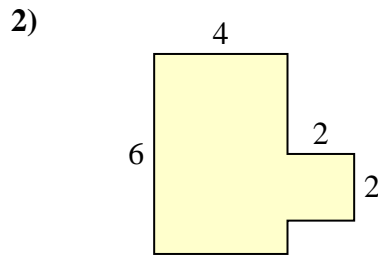
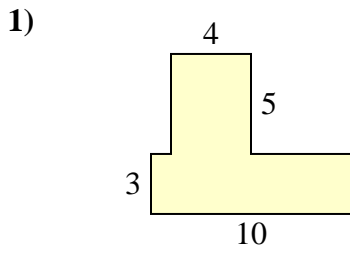




Calculez l'aire totale de chaque figure. Les mesures sont en millimètres (mm).

Réponses

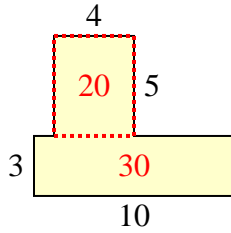


- 1. _____
- 2. _____
- 3. _____
- 4. _____
- 5. _____
- 6. _____
- 7. _____
- 8. _____
- 9. _____
- 10. _____

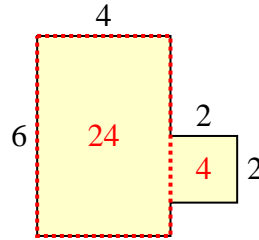


Calculez l'aire totale de chaque figure. Les mesures sont en millimètres (mm).

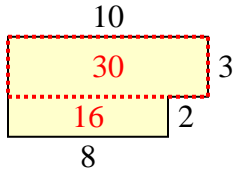
1)



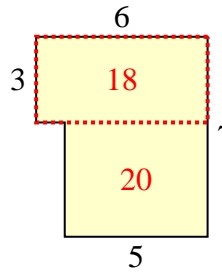
2)



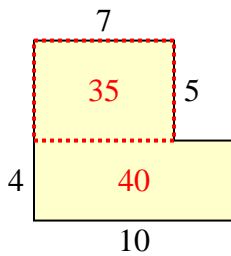
3)



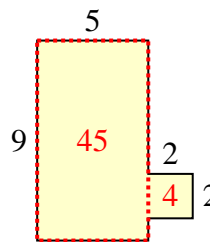
4)



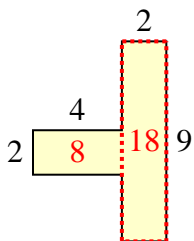
5)



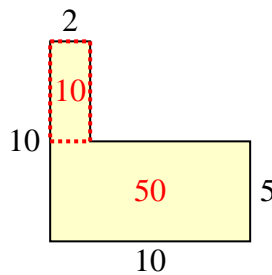
6)



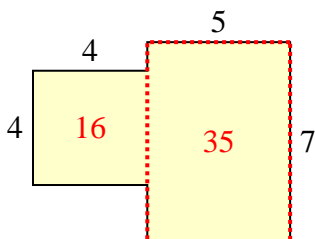
7)



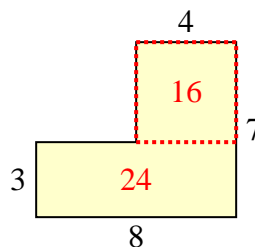
8)



9)



10)

**Réponses**1. 50 mm²2. 28 mm²3. 46 mm²4. 38 mm²5. 75 mm²6. 49 mm²7. 26 mm²8. 60 mm²9. 51 mm²10. 40 mm²