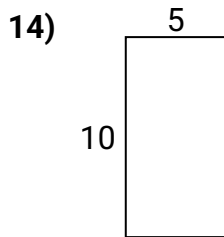
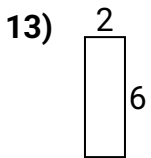
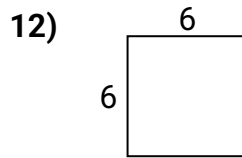
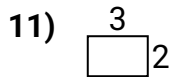
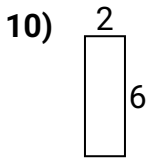

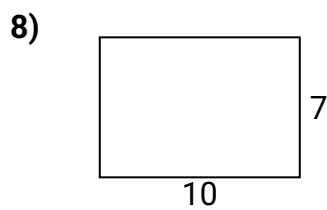
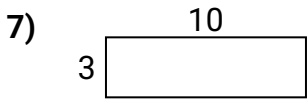
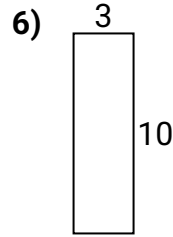
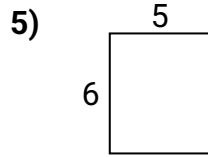
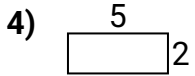
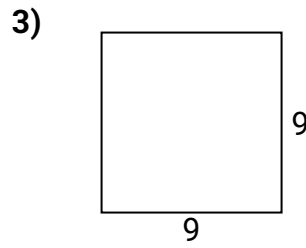
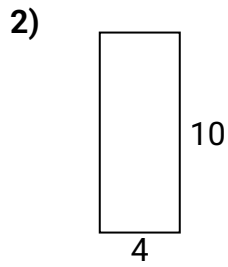





Calculez l'aire et le périmètre de chaque figure. Chaque mesure est en cm.

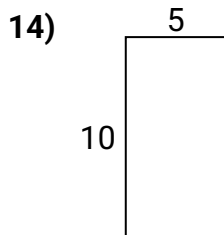
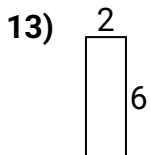
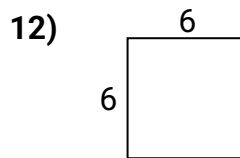
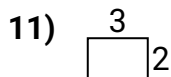
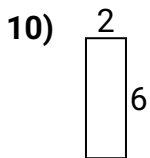
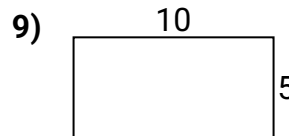
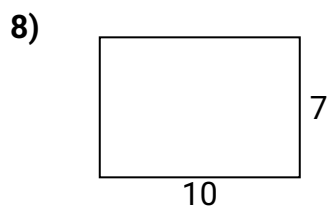
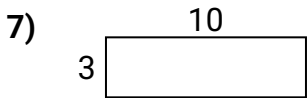
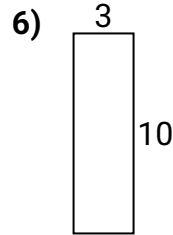
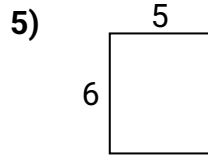
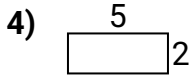
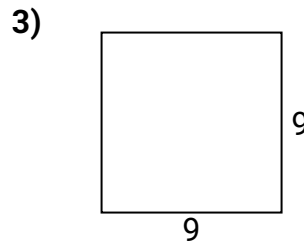
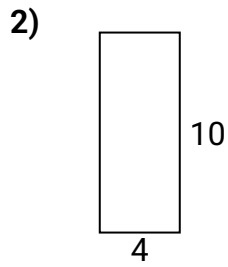



Réponses

- 1. _____
- 2. _____
- 3. _____
- 4. _____
- 5. _____
- 6. _____
- 7. _____
- 8. _____
- 9. _____
- 10. _____
- 11. _____
- 12. _____
- 13. _____
- 14. _____
- 15. _____



Calculez l'aire et le périmètre de chaque figure. Chaque mesure est en cm.


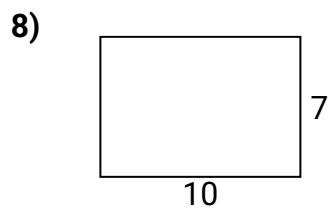
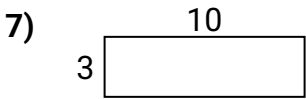
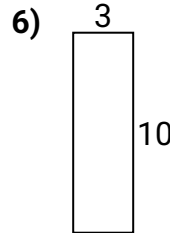
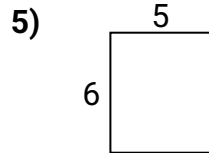
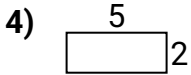
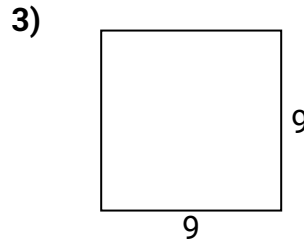
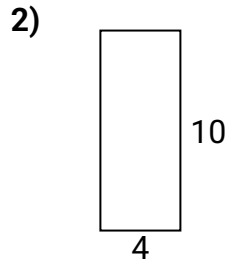



Réponses

1.	<u>26</u>	<u>36</u>
2.	<u>28</u>	<u>40</u>
3.	<u>36</u>	<u>81</u>
4.	<u>14</u>	<u>10</u>
5.	<u>22</u>	<u>30</u>
6.	<u>26</u>	<u>30</u>
7.	<u>26</u>	<u>30</u>
8.	<u>34</u>	<u>70</u>
9.	<u>30</u>	<u>50</u>
10.	<u>16</u>	<u>12</u>
11.	<u>10</u>	<u>6</u>
12.	<u>24</u>	<u>36</u>
13.	<u>16</u>	<u>12</u>
14.	<u>30</u>	<u>50</u>
15.	<u>24</u>	<u>20</u>



Calculez l'aire et le périmètre de chaque figure. Chaque mesure est en cm.



Réponses

- 1. _____
- 2. _____
- 3. _____
- 4. _____
- 5. _____
- 6. _____
- 7. _____
- 8. _____
- 9. _____
- 10. _____
- 11. _____
- 12. _____
- 13. _____
- 14. _____
- 15. _____