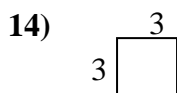
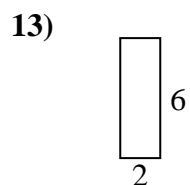
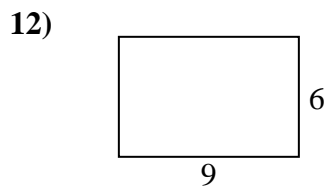
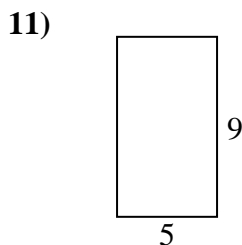
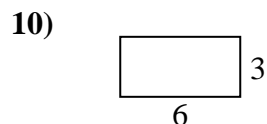
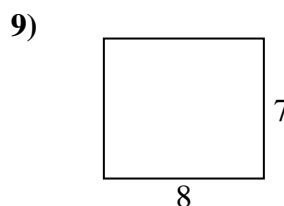
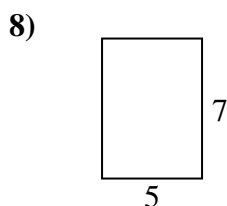
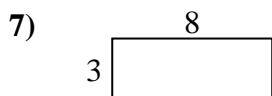
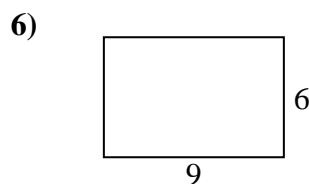
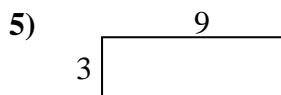
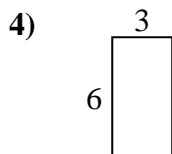
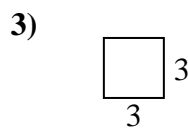

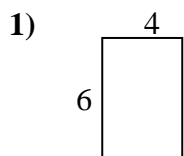




Calculez l'aire et le périmètre de chaque figure. Chaque mesure est en cm.

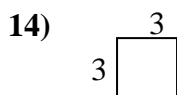
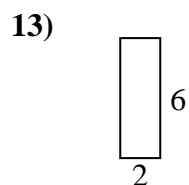
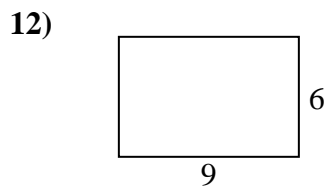
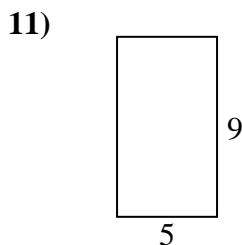
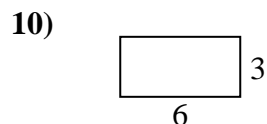
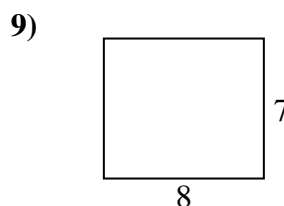
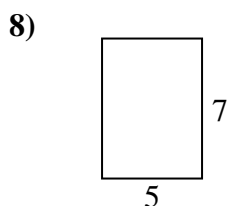
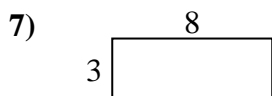
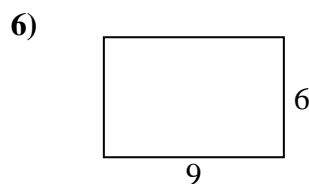
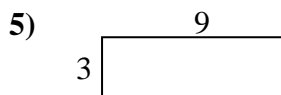
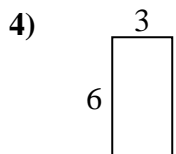
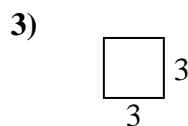

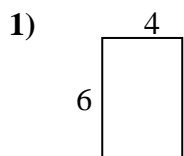


**Réponses**

- 1. \_\_\_\_\_
- 2. \_\_\_\_\_
- 3. \_\_\_\_\_
- 4. \_\_\_\_\_
- 5. \_\_\_\_\_
- 6. \_\_\_\_\_
- 7. \_\_\_\_\_
- 8. \_\_\_\_\_
- 9. \_\_\_\_\_
- 10. \_\_\_\_\_
- 11. \_\_\_\_\_
- 12. \_\_\_\_\_
- 13. \_\_\_\_\_
- 14. \_\_\_\_\_
- 15. \_\_\_\_\_



Calculez l'aire et le périmètre de chaque figure. Chaque mesure est en cm.



**Réponses**

1.	<u>20</u>	<u>24</u>
2.	<u>24</u>	<u>20</u>
3.	<u>12</u>	<u>9</u>
4.	<u>18</u>	<u>18</u>
5.	<u>24</u>	<u>27</u>
6.	<u>30</u>	<u>54</u>
7.	<u>22</u>	<u>24</u>
8.	<u>24</u>	<u>35</u>
9.	<u>30</u>	<u>56</u>
10.	<u>18</u>	<u>18</u>
11.	<u>28</u>	<u>45</u>
12.	<u>30</u>	<u>54</u>
13.	<u>16</u>	<u>12</u>
14.	<u>12</u>	<u>9</u>
15.	<u>24</u>	<u>20</u>