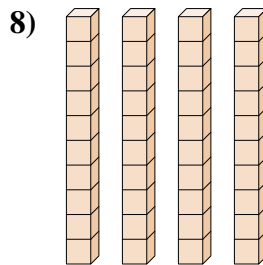
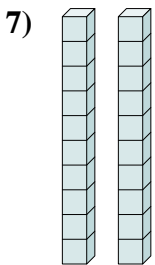
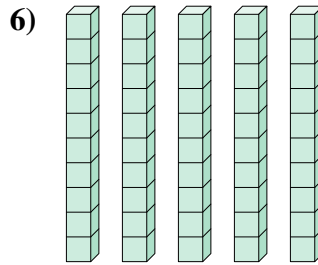

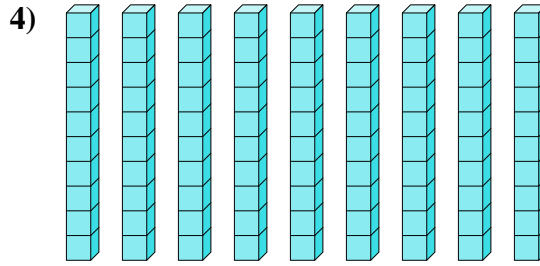
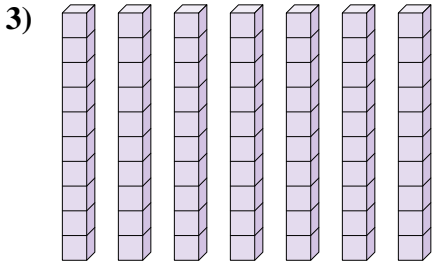

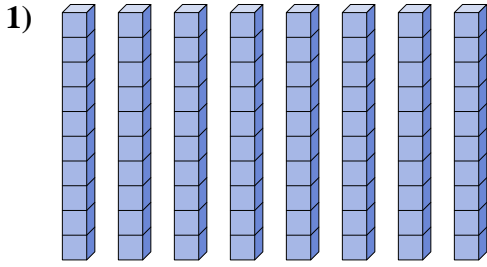




Déterminez la quantité de groupe de dizaines. Et trouvez le nombre total de briques.

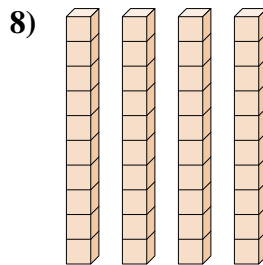
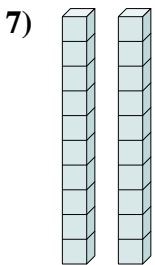
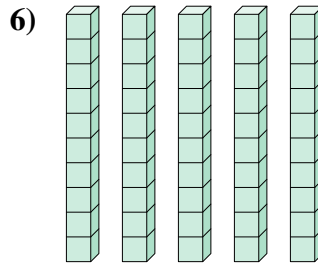

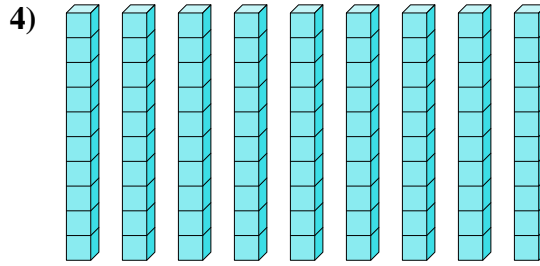
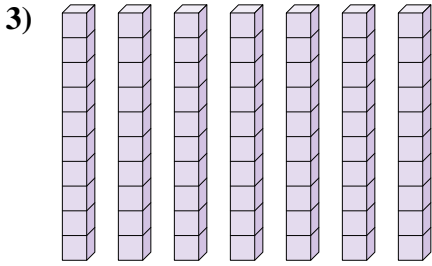

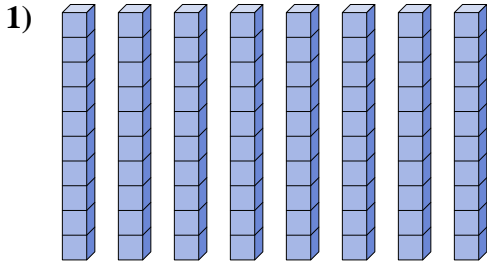
**Réponses**



- 1. \_\_\_\_\_
- 2. \_\_\_\_\_
- 3. \_\_\_\_\_
- 4. \_\_\_\_\_
- 5. \_\_\_\_\_
- 6. \_\_\_\_\_
- 7. \_\_\_\_\_
- 8. \_\_\_\_\_



Déterminez la quantité de groupe de dizaines. Et trouvez le nombre total de briques.



**Réponses**

1. **8**      **80**

2. **3**      **30**

3. **7**      **70**

4. **9**      **90**

5. **6**      **60**

6. **5**      **50**

7. **2**      **20**

8. **4**      **40**