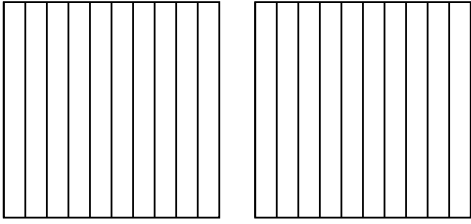


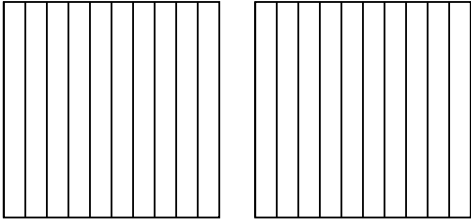


Utilisez la méthode visuelle pour résoudre chaque exercice.

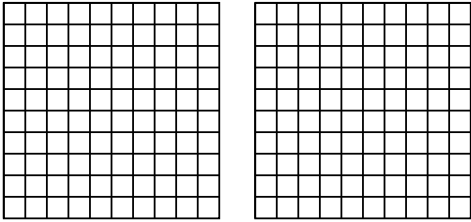
1)  $2 \times 0,9 =$



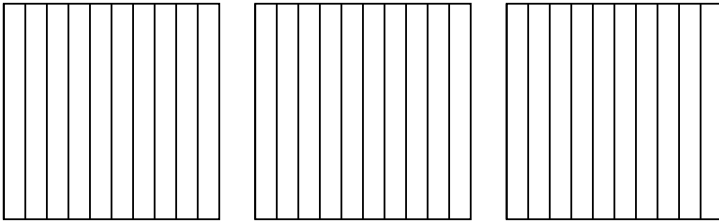
2)  $2 \times 0,3 =$



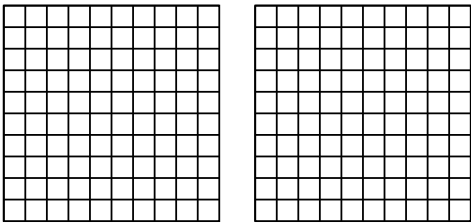
3)  $2 \times 0,46 =$



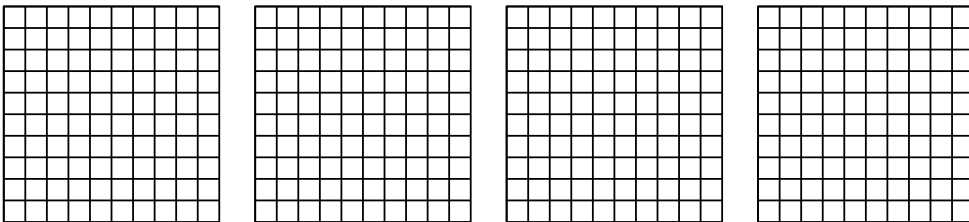
4)  $3 \times 0,2 =$



5)  $2 \times 0,96 =$



6)  $4 \times 0,30 =$



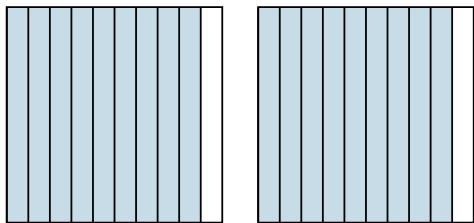
**Réponses**

- 1. \_\_\_\_\_
- 2. \_\_\_\_\_
- 3. \_\_\_\_\_
- 4. \_\_\_\_\_
- 5. \_\_\_\_\_
- 6. \_\_\_\_\_

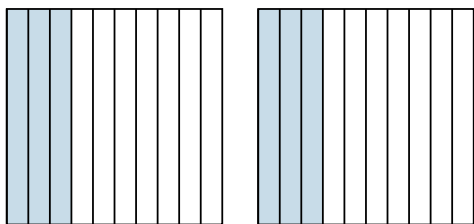


Utilisez la méthode visuelle pour résoudre chaque exercice.

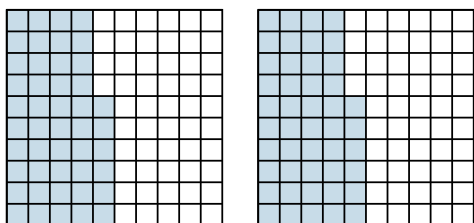
1)  $2 \times 0,9 =$




2)  $2 \times 0,3 =$



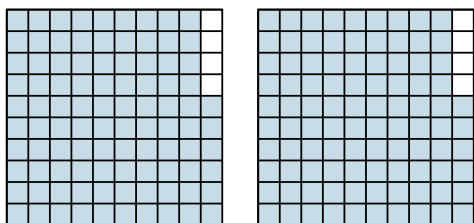
3)  $2 \times 0,46 =$



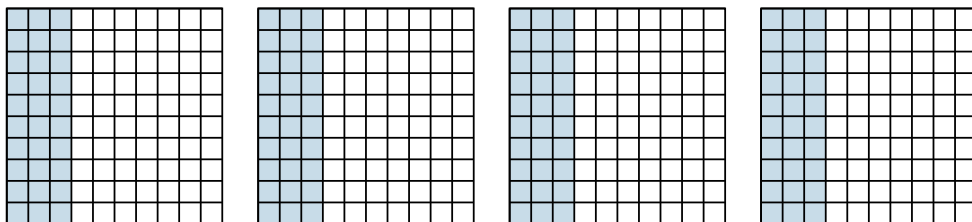
4)  $3 \times 0,2 =$



5)  $2 \times 0,96 =$



6)  $4 \times 0,30 =$



**Réponses**

1.  $\frac{18}{10} = 1,8$

2.  $\frac{6}{10} = 0,6$

3.  $\frac{92}{100} = 0,92$

4.  $\frac{6}{10} = 0,6$

5.  $\frac{192}{100} = 1,92$

6.  $\frac{120}{100} = 1,2$