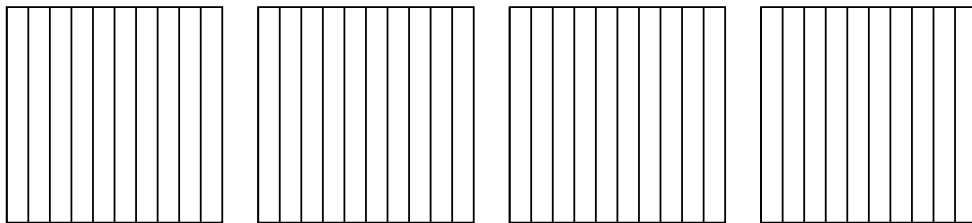


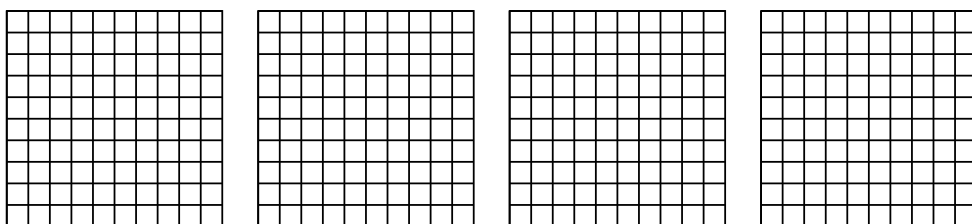


Utilisez la méthode visuelle pour résoudre chaque exercice.


1)  $4 \times 0,5 =$



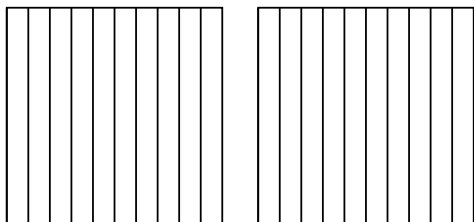
2)  $4 \times 0,92 =$



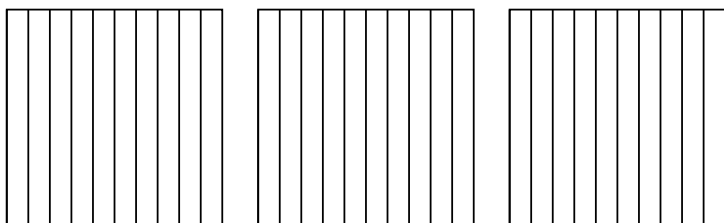
3)  $3 \times 0,36 =$



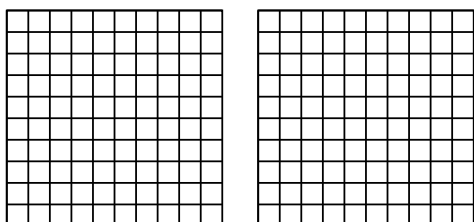
4)  $2 \times 0,2 =$



5)  $3 \times 0,6 =$



6)  $2 \times 0,44 =$



**Réponses**

1. \_\_\_\_\_

2. \_\_\_\_\_

3. \_\_\_\_\_

4. \_\_\_\_\_

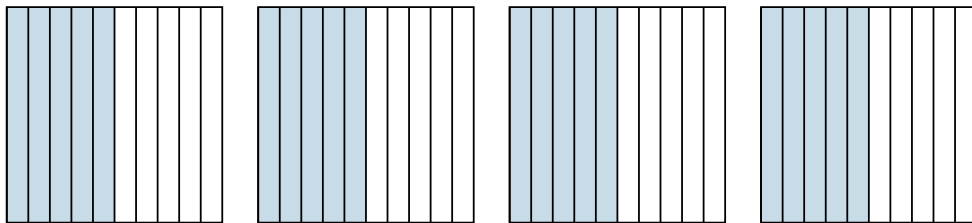
5. \_\_\_\_\_

6. \_\_\_\_\_

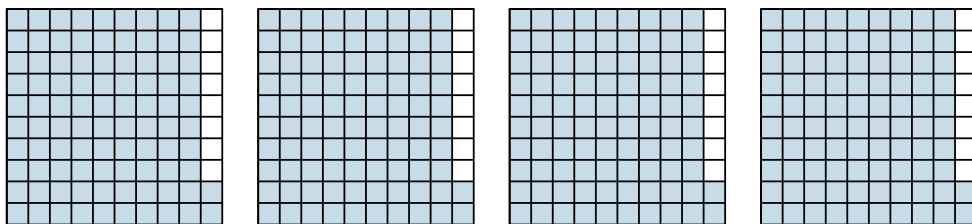


Utilisez la méthode visuelle pour résoudre chaque exercice.

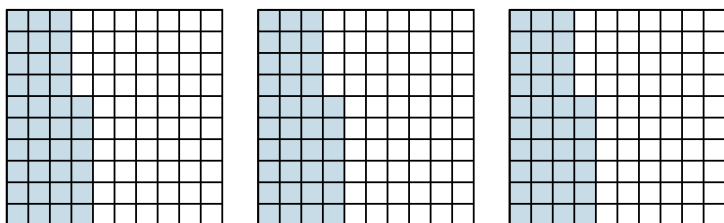
1)  $4 \times 0,5 =$



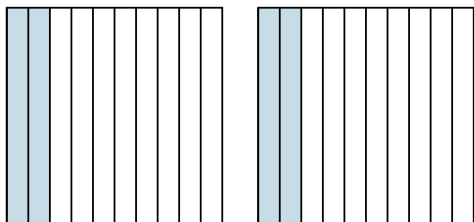
2)  $4 \times 0,92 =$



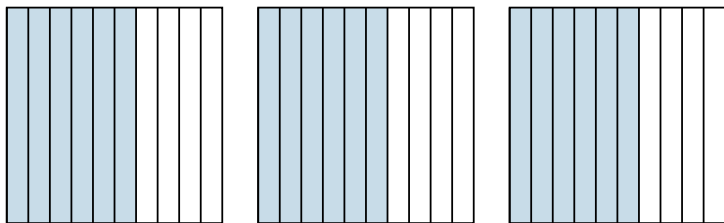
3)  $3 \times 0,36 =$



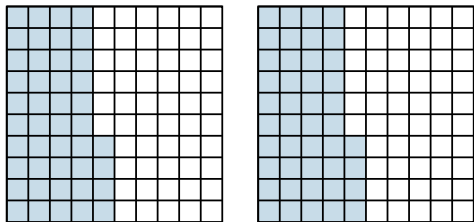
4)  $2 \times 0,2 =$



5)  $3 \times 0,6 =$



6)  $2 \times 0,44 =$



**Réponses**

1.  $\frac{20}{10} = 2$

2.  $\frac{368}{100} = 3,68$

3.  $\frac{108}{100} = 1,08$

4.  $\frac{4}{10} = 0,4$

5.  $\frac{18}{10} = 1,8$

6.  $\frac{88}{100} = 0,88$