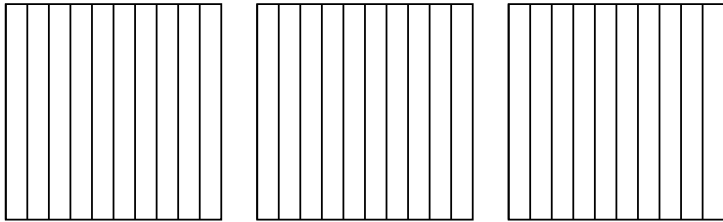


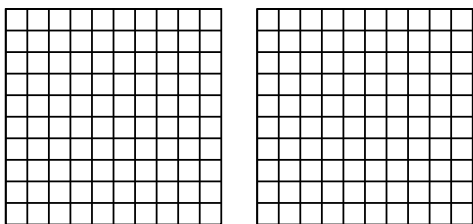


Utilisez la méthode visuelle pour résoudre chaque exercice.

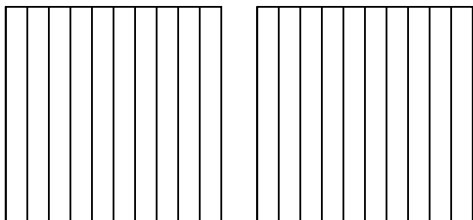
1) $3 \times 0,7 =$



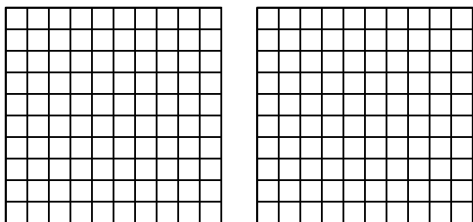
2) $2 \times 0,68 =$



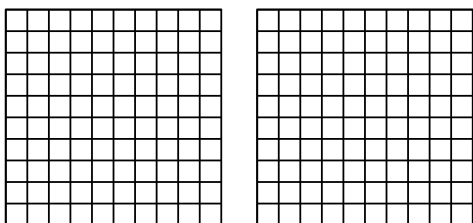
3) $2 \times 0,4 =$



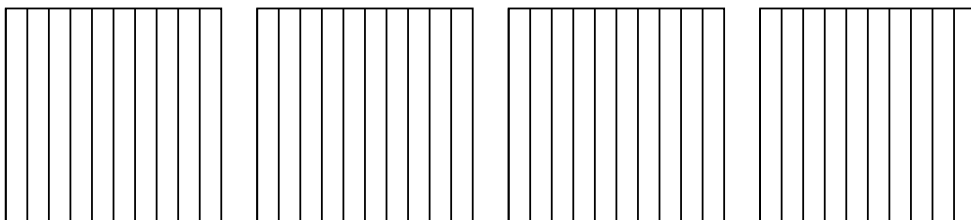
4) $2 \times 0,81 =$



5) $2 \times 0,25 =$



6) $4 \times 0,8 =$

**Réponses**

1. _____

2. _____

3. _____

4. _____

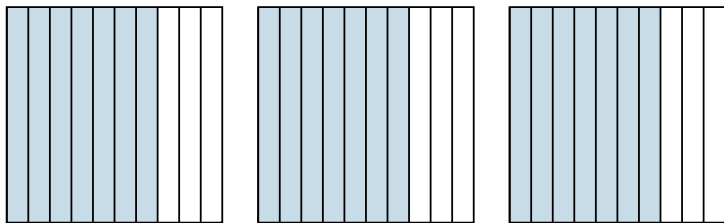
5. _____

6. _____

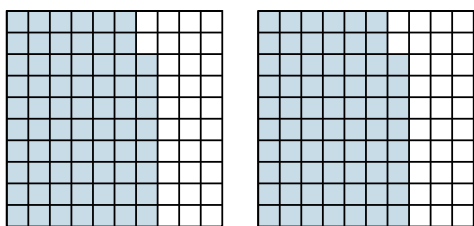


Utilisez la méthode visuelle pour résoudre chaque exercice.

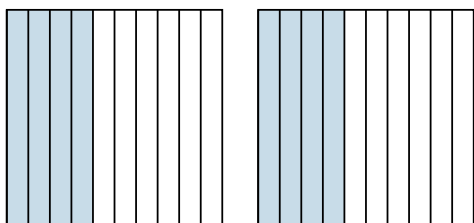
1) $3 \times 0,7 =$



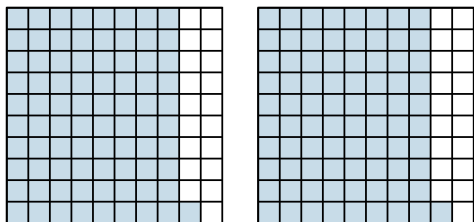
2) $2 \times 0,68 =$



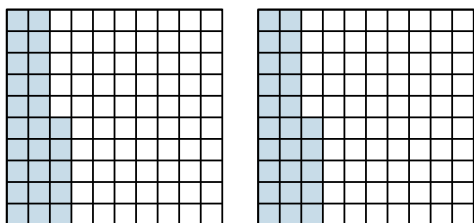
3) $2 \times 0,4 =$



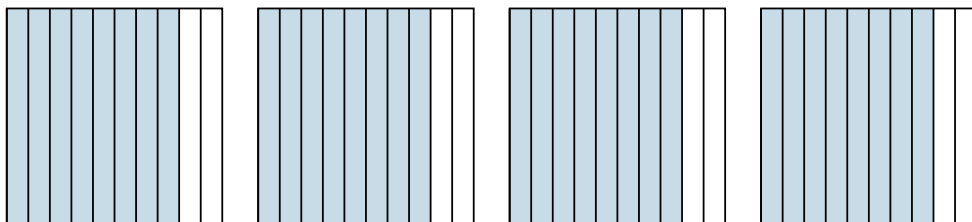
4) $2 \times 0,81 =$



5) $2 \times 0,25 =$



6) $4 \times 0,8 =$



Réponses

1. $\frac{21}{10} = 2,1$

2. $\frac{136}{100} = 1,36$

3. $\frac{8}{10} = 0,8$

4. $\frac{162}{100} = 1,62$

5. $\frac{50}{100} = 0,5$

6. $\frac{32}{10} = 3,2$