







Classer les grilles, en fonction des zones colorées, de la plus petite à la plus grande.

Réponses

Ex) A  B  C  D 

petite 0.2 - B
0.6 - D
0.86 - C
grande 0.91 - A

Ex. **B,D,C,A**

1. _____

2. _____

3. _____

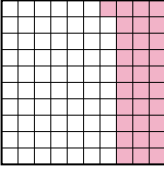
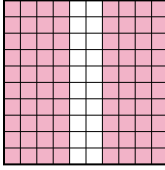
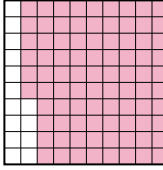
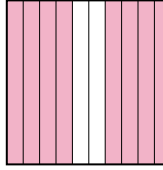
4. _____

5. _____

6. _____


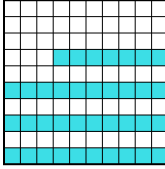

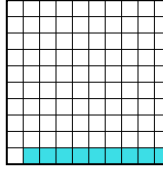
7. _____

8. _____

1) A  B  C  D 



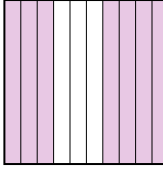
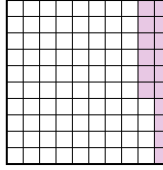
petite _____

grande _____

2) A  B  C  D 





petite _____

grande _____

3) A  B  C  D 


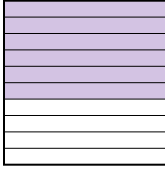
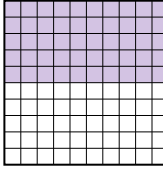
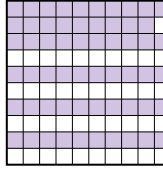
petite _____

grande _____

4) A  B  C  D 


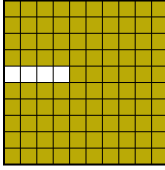


petite _____

grande _____

5) A  B  C  D 

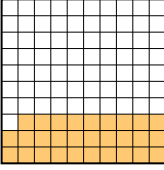

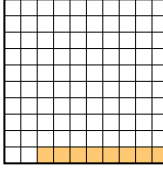
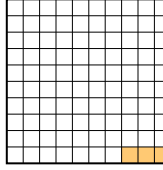
petite _____

grande _____

6) A  B  C  D 

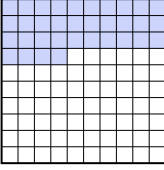
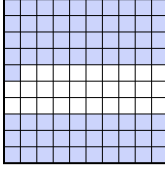
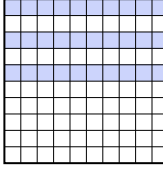

petite _____

grande _____

7) A  B  C  D 

petite _____

grande _____

8) A  B  C  D 

petite _____

grande _____



Classer les grilles, en fonction des zones colorées, de la plus petite à la plus grande.

Ex)	A	B	C	D	petite <u>0.2 - B</u> <u>0.6 - D</u> <u>0.86 - C</u>
				grande <u>0.91 - A</u>	
1)	A	B	C	D	petite <u>0.31 - A</u> <u>0.8 - B</u> <u>0.8 - B</u>
				grande <u>0.86 - C</u>	
2)	A	B	C	D	petite <u>0.09 - D</u> <u>0.37 - B</u> <u>0.6 - A</u>
				grande <u>0.8 - C</u>	
3)	A	B	C	D	petite <u>0.16 - D</u> <u>0.45 - A</u> <u>0.58 - B</u>
				grande <u>0.7 - C</u>	
4)	A	B	C	D	petite <u>0.2 - D</u> <u>0.32 - C</u> <u>0.5 - A</u>
				grande <u>0.8 - B</u>	
5)	A	B	C	D	petite <u>0.5 - C</u> <u>0.59 - D</u> <u>0.6 - B</u>
				grande <u>0.7 - A</u>	
6)	A	B	C	D	petite <u>0.1 - C</u> <u>0.7 - D</u> <u>0.9 - A</u>
				grande <u>0.96 - B</u>	
7)	A	B	C	D	petite <u>0.03 - D</u> <u>0.08 - C</u> <u>0.1 - B</u>
				grande <u>0.29 - A</u>	
8)	A	B	C	D	petite <u>0.3 - C</u> <u>0.34 - A</u> <u>0.71 - B</u>
				grande <u>0.8 - D</u>	


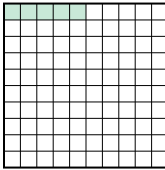


Réponses

- Ex. B,D,C,A
1. A,B,B,C
2. D,B,A,C
3. D,A,B,C
4. D,C,A,B
5. C,D,B,A
6. C,D,A,B
7. D,C,B,A
8. C,A,B,D



Classer les grilles, en fonction des zones colorées, de la plus petite à la plus grande.

Réponses

Ex) A  B  C  D 

petite 0.05 - B
0.57 - D
0.62 - C
grande 0.9 - A

Ex. **B,D,C,A**

1. _____

2. _____

3. _____

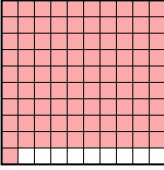

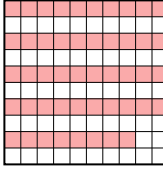

4. _____

5. _____

6. _____

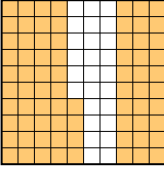
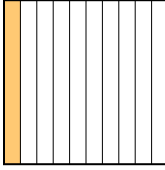
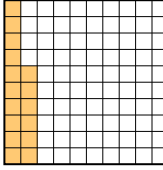
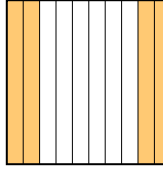
7. _____

8. _____

1) A  B  C  D 

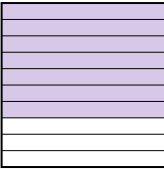
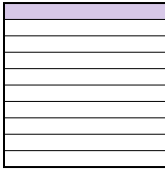
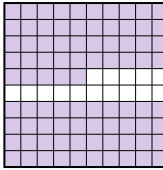
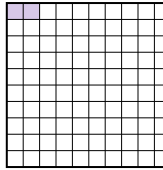
petite _____

grande _____

2) A  B  C  D 

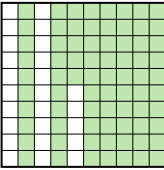
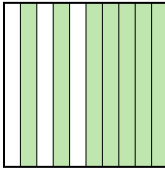

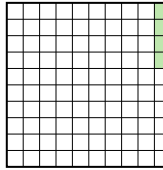
petite _____

grande _____

3) A  B  C  D 



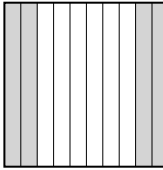

petite _____

grande _____

4) A  B  C  D 


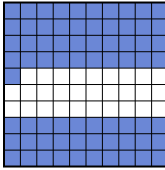


petite _____

grande _____

5) A  B  C  D 

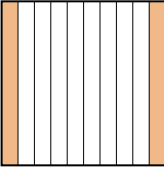
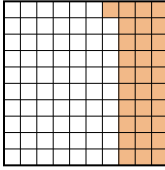
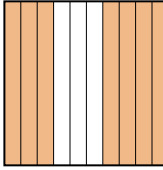
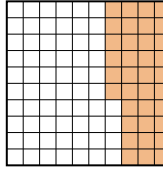
petite _____

grande _____

6) A  B  C  D 




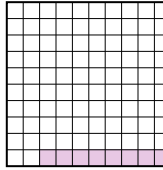
petite _____

grande _____

7) A  B  C  D 

petite _____

grande _____

8) A  B  C  D 

petite _____

grande _____



Classer les grilles, en fonction des zones colorées, de la plus petite à la plus grande.

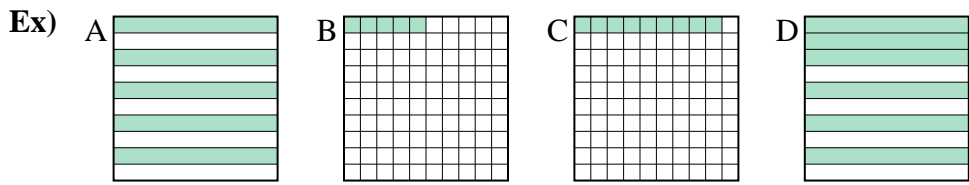
Ex)	A	B	C	D	petite <u>0.05 - B</u> <u>0.57 - D</u> <u>0.62 - C</u> grande <u>0.9 - A</u>
1)	A	B	C	D	petite <u>0.48 - C</u> <u>0.5 - B</u> <u>0.6 - D</u> grande <u>0.91 - A</u>
2)	A	B	C	D	petite <u>0.1 - B</u> <u>0.16 - C</u> <u>0.4 - D</u> grande <u>0.74 - A</u>
3)	A	B	C	D	petite <u>0.02 - D</u> <u>0.1 - B</u> <u>0.7 - A</u> grande <u>0.85 - C</u>
4)	A	B	C	D	petite <u>0.04 - D</u> <u>0.7 - B</u> <u>0.75 - A</u> grande <u>0.8 - C</u>
5)	A	B	C	D	petite <u>0.03 - B</u> <u>0.4 - C</u> <u>0.8 - A</u> grande <u>0.94 - D</u>
6)	A	B	C	D	petite <u>0.06 - A</u> <u>0.6 - C</u> <u>0.7 - D</u> grande <u>0.71 - B</u>
7)	A	B	C	D	petite <u>0.2 - A</u> <u>0.31 - B</u> <u>0.36 - D</u> grande <u>0.7 - C</u>
8)	A	B	C	D	petite <u>0.08 - D</u> <u>0.3 - C</u> <u>0.4 - B</u> grande <u>0.9 - A</u>

Réponses

- Ex. **B,D,C,A**
1. **C,B,D,A**
2. **B,C,D,A**
3. **D,B,A,C**
4. **D,B,A,C**
5. **B,C,A,D**
6. **A,C,D,B**
7. **A,B,D,C**
8. **D,C,B,A**

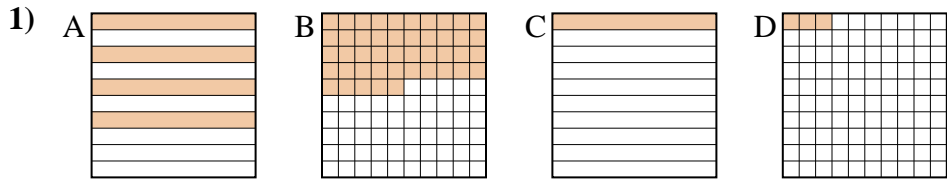


Classer les grilles, en fonction des zones colorées, de la plus petite à la plus grande.



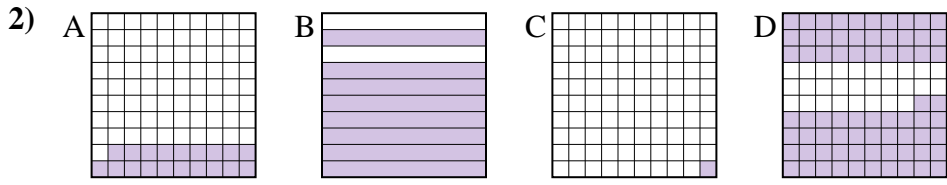
petite 0.05 - B
0.09 - C
0.5 - A
grande 0.6 - D

Réponses
 Ex. B,C,A,D



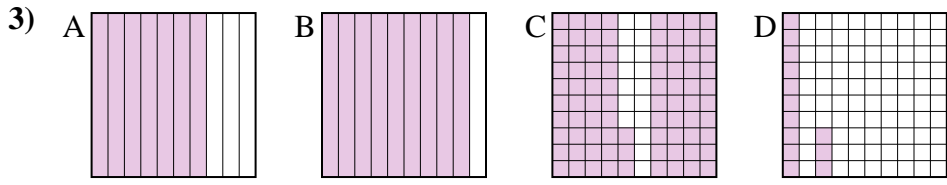
petite _____

grande _____



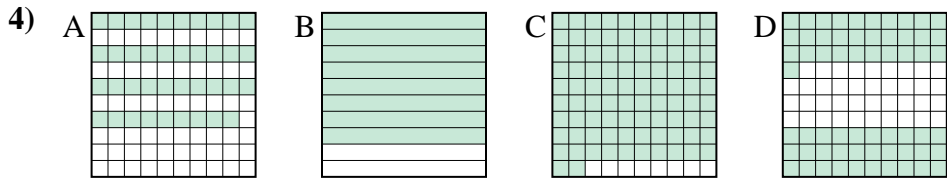
petite _____

grande _____



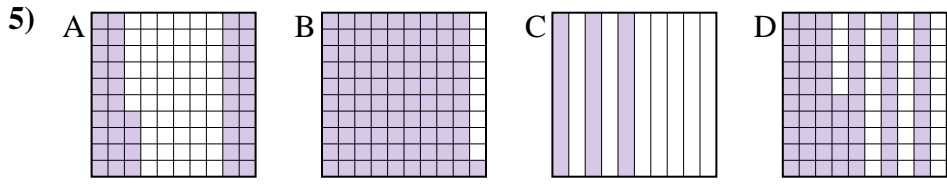
petite _____

grande _____



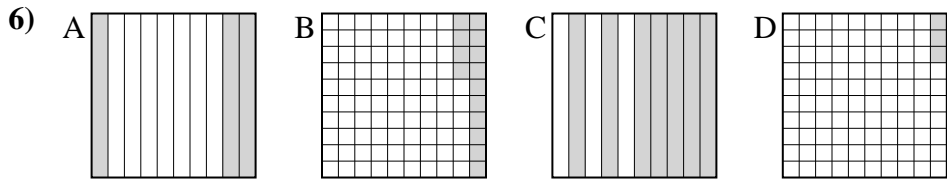
petite _____

grande _____



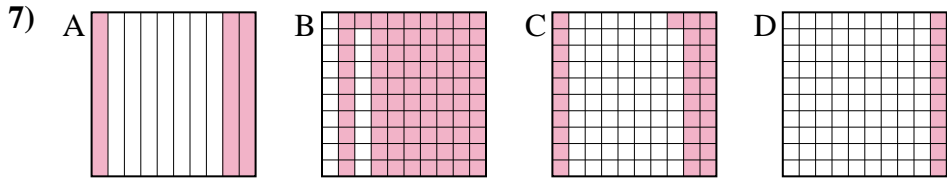
petite _____

grande _____



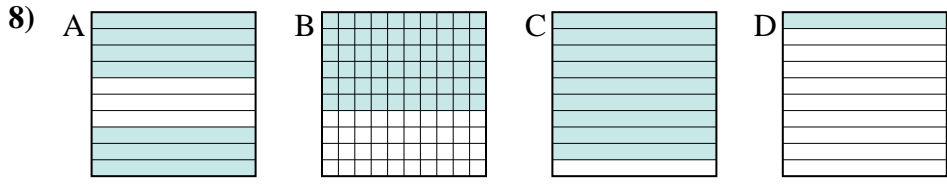
petite _____

grande _____



petite _____

grande _____



petite _____

grande _____

1. _____
2. _____
3. _____
4. _____
5. _____
6. _____
7. _____
8. _____



Classer les grilles, en fonction des zones colorées, de la plus petite à la plus grande.

Ex)	A	B	C	D	petite <u>0.05 - B</u> <u>0.09 - C</u> <u>0.5 - A</u> grande <u>0.6 - D</u>
1)	A	B	C	D	petite <u>0.03 - D</u> <u>0.1 - C</u> <u>0.4 - A</u> grande <u>0.45 - B</u>
2)	A	B	C	D	petite <u>0.01 - C</u> <u>0.19 - A</u> <u>0.72 - D</u> grande <u>0.8 - B</u>
3)	A	B	C	D	petite <u>0.13 - D</u> <u>0.7 - A</u> <u>0.83 - C</u> grande <u>0.9 - B</u>
4)	A	B	C	D	petite <u>0.39 - A</u> <u>0.61 - D</u> <u>0.8 - B</u> grande <u>0.92 - C</u>
5)	A	B	C	D	petite <u>0.3 - C</u> <u>0.44 - A</u> <u>0.65 - D</u> grande <u>0.91 - B</u>
6)	A	B	C	D	petite <u>0.03 - D</u> <u>0.14 - B</u> <u>0.3 - A</u> grande <u>0.7 - C</u>
7)	A	B	C	D	petite <u>0.1 - D</u> <u>0.3 - A</u> <u>0.31 - C</u> grande <u>0.81 - B</u>
8)	A	B	C	D	petite <u>0.1 - D</u> <u>0.6 - B</u> <u>0.7 - A</u> grande <u>0.9 - C</u>

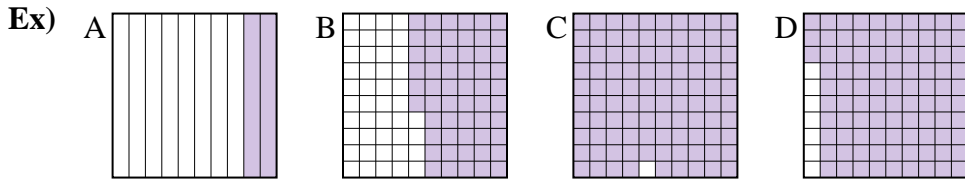
Réponses

- Ex. B,C,A,D
1. D,C,A,B
2. C,A,D,B
3. D,A,C,B
4. A,D,B,C
5. C,A,D,B
6. D,B,A,C
7. D,A,C,B
8. D,B,A,C



Classer les grilles, en fonction des zones colorées, de la plus petite à la plus grande.

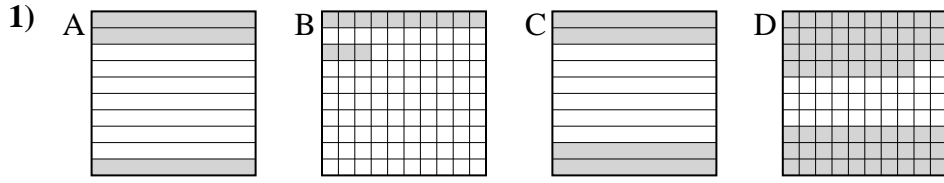
Réponses



petite 0.2 - A
0.56 - B
0.93 - D
grande 0.99 - C

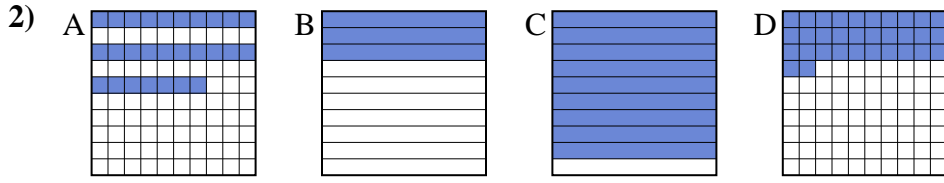
Ex. A,B,D,C

1. _____
2. _____
3. _____
4. _____
5. _____
6. _____
7. _____
8. _____



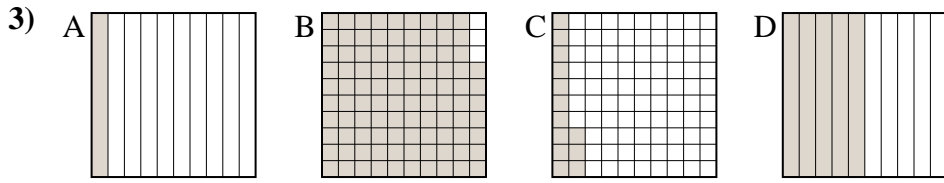
petite _____

grande _____



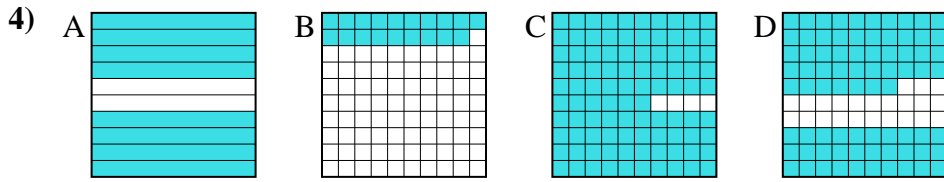
petite _____

grande _____



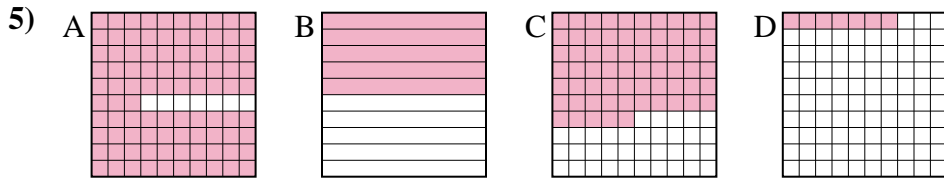
petite _____

grande _____



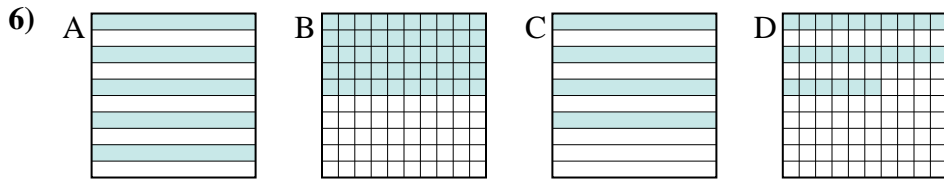
petite _____

grande _____



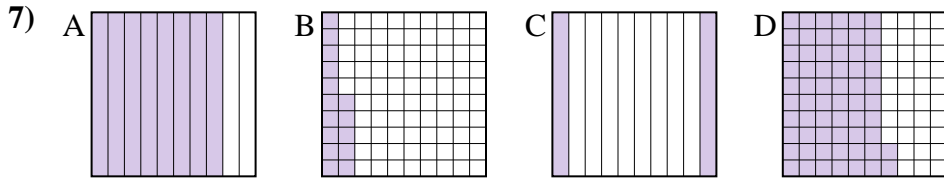
petite _____

grande _____



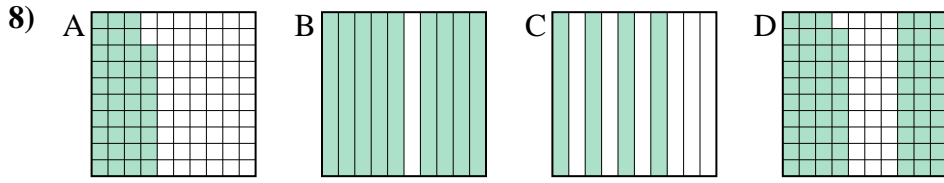
petite _____

grande _____



petite _____

grande _____



petite _____

grande _____



Classer les grilles, en fonction des zones colorées, de la plus petite à la plus grande.

Ex)	A	B	C	D	petite <u>0.2 - A</u> <u>0.56 - B</u> <u>0.93 - D</u>
					grande <u>0.99 - C</u>
1)	A	B	C	D	petite <u>0.13 - B</u> <u>0.3 - A</u> <u>0.4 - C</u>
					grande <u>0.68 - D</u>
2)	A	B	C	D	petite <u>0.27 - A</u> <u>0.3 - B</u> <u>0.32 - D</u>
					grande <u>0.9 - C</u>
3)	A	B	C	D	petite <u>0.1 - A</u> <u>0.13 - C</u> <u>0.5 - D</u>
					grande <u>0.97 - B</u>
4)	A	B	C	D	petite <u>0.19 - B</u> <u>0.77 - D</u> <u>0.8 - A</u>
					grande <u>0.96 - C</u>
5)	A	B	C	D	petite <u>0.07 - D</u> <u>0.5 - B</u> <u>0.65 - C</u>
					grande <u>0.93 - A</u>
6)	A	B	C	D	petite <u>0.26 - D</u> <u>0.4 - C</u> <u>0.5 - A</u>
					grande <u>0.5 - A</u>
7)	A	B	C	D	petite <u>0.15 - B</u> <u>0.2 - C</u> <u>0.62 - D</u>
					grande <u>0.8 - A</u>
8)	A	B	C	D	petite <u>0.38 - A</u> <u>0.4 - C</u> <u>0.69 - D</u>
					grande <u>0.9 - B</u>

Réponses

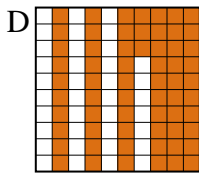
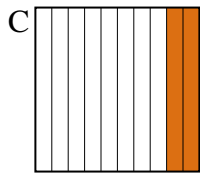
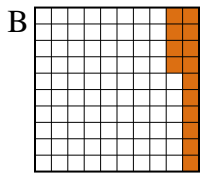
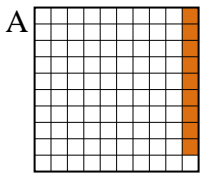
- Ex. A,B,D,C
1. B,A,C,D
2. A,B,D,C
3. A,C,D,B
4. B,D,A,C
5. D,B,C,A
6. D,C,A,A
7. B,C,D,A
8. A,C,D,B



Classer les grilles, en fonction des zones colorées, de la plus petite à la plus grande.

Réponses

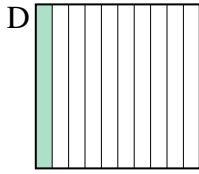
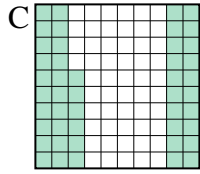
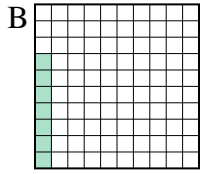
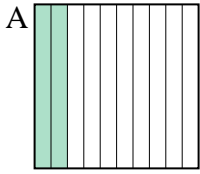
Ex)



petite 0.09 - A
0.14 - B
0.2 - C
grande 0.63 - D

Ex. A,B,C,D

1)



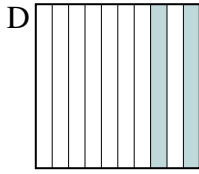
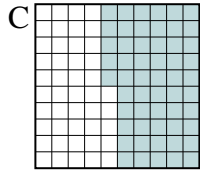
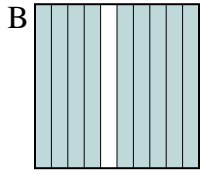
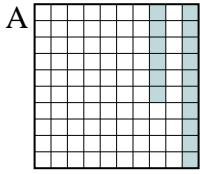
petite _____
grande _____

1. _____

2. _____

3. _____

2)

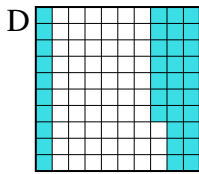
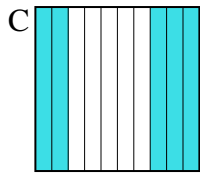
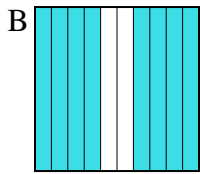
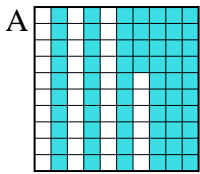


petite _____
grande _____

4. _____

5. _____

3)



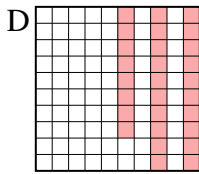
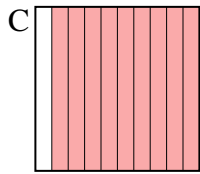
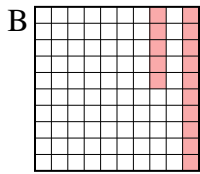
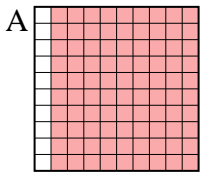
petite _____
grande _____

6. _____

7. _____

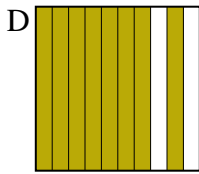
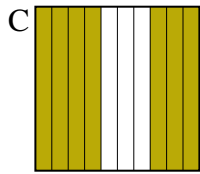
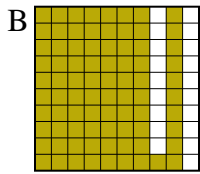
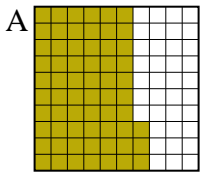
8. _____

4)




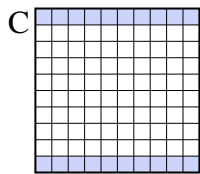

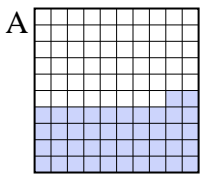
petite _____
grande _____

5)



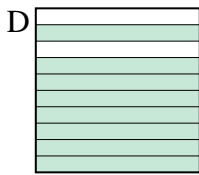
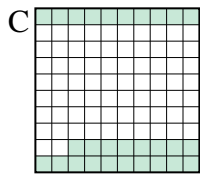
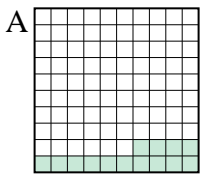
petite _____
grande _____

6)



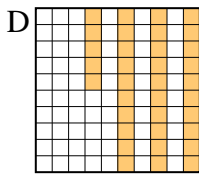
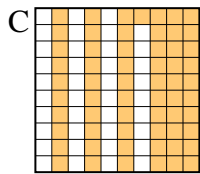
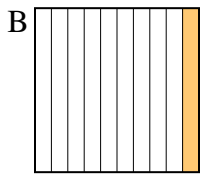
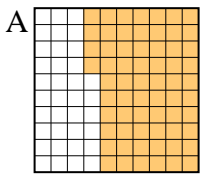
petite _____
grande _____

7)



petite _____
grande _____

8)



petite _____
grande _____



Classer les grilles, en fonction des zones colorées, de la plus petite à la plus grande.

Ex)	A	B	C	D	petite <u>0.09 - A</u> <u>0.14 - B</u> <u>0.2 - C</u>
					grande <u>0.63 - D</u>
1)	A	B	C	D	petite <u>0.07 - B</u> <u>0.1 - D</u> <u>0.2 - A</u>
					grande <u>0.46 - C</u>
2)	A	B	C	D	petite <u>0.16 - A</u> <u>0.2 - D</u> <u>0.55 - C</u>
					grande <u>0.9 - B</u>
3)	A	B	C	D	petite <u>0.37 - D</u> <u>0.5 - C</u> <u>0.64 - A</u>
					grande <u>0.8 - B</u>
4)	A	B	C	D	petite <u>0.15 - B</u> <u>0.28 - D</u> <u>0.9 - A</u>
					grande <u>0.9 - A</u>
5)	A	B	C	D	petite <u>0.63 - A</u> <u>0.7 - C</u> <u>0.8 - D</u>
					grande <u>0.81 - B</u>
6)	A	B	C	D	petite <u>0.1 - B</u> <u>0.2 - C</u> <u>0.42 - A</u>
					grande <u>0.9 - D</u>
7)	A	B	C	D	petite <u>0.14 - A</u> <u>0.2 - B</u> <u>0.28 - C</u>
					grande <u>0.8 - D</u>
8)	A	B	C	D	petite <u>0.1 - B</u> <u>0.35 - D</u> <u>0.61 - C</u>
					grande <u>0.64 - A</u>

Réponses

- Ex. A,B,C,D
1. B,D,A,C
2. A,D,C,B
3. D,C,A,B
4. B,D,A,A
5. A,C,D,B
6. B,C,A,D
7. A,B,C,D
8. B,D,C,A



Classer les grilles, en fonction des zones colorées, de la plus petite à la plus grande.

Ex) A B C D petite 0.07 - B
0.1 - D
0.4 - C
grande 0.98 - A

1) A B C D petite _____
_____ grande _____

2) A B C D petite _____
_____ grande _____

3) A B C D petite _____
_____ grande _____

4) A B C D petite _____
_____ grande _____

5) A B C D petite _____
_____ grande _____

6) A B C D petite _____
_____ grande _____

7) A B C D petite _____
_____ grande _____

8) A B C D petite _____
_____ grande _____

Réponses

- Ex. B,D,C,A
1. _____
2. _____
3. _____
4. _____
5. _____
6. _____
7. _____
8. _____



Classer les grilles, en fonction des zones colorées, de la plus petite à la plus grande.

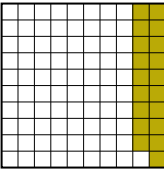


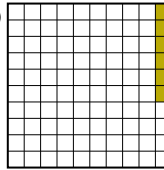
Ex)	A	B	C	D	petite <u>0.07 - B</u> <u>0.1 - D</u> <u>0.4 - C</u> grande <u>0.98 - A</u>
1)	A	B	C	D	petite <u>0.01 - D</u> <u>0.3 - A</u> <u>0.86 - C</u> grande <u>0.9 - B</u>
2)	A	B	C	D	petite <u>0.1 - D</u> <u>0.5 - A</u> <u>0.53 - B</u> grande <u>0.8 - C</u>
3)	A	B	C	D	petite <u>0.2 - D</u> <u>0.4 - B</u> <u>0.5 - A</u> grande <u>0.52 - C</u>
4)	A	B	C	D	petite <u>0.03 - A</u> <u>0.2 - C</u> <u>0.43 - B</u> grande <u>0.9 - D</u>
5)	A	B	C	D	petite <u>0.1 - A</u> <u>0.48 - D</u> <u>0.6 - B</u> grande <u>0.71 - C</u>
6)	A	B	C	D	petite <u>0.5 - D</u> <u>0.6 - C</u> <u>0.8 - B</u> grande <u>0.83 - A</u>
7)	A	B	C	D	petite <u>0.69 - D</u> <u>0.7 - A</u> <u>0.8 - B</u> grande <u>0.9 - C</u>
8)	A	B	C	D	petite <u>0.02 - B</u> <u>0.47 - C</u> <u>0.7 - A</u> grande <u>0.95 - D</u>

Réponses

- Ex. B,D,C,A
1. D,A,C,B
2. D,A,B,C
3. D,B,A,C
4. A,C,B,D
5. A,D,B,C
6. D,C,B,A
7. D,A,B,C
8. B,C,A,D



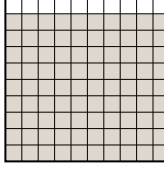



Classer les grilles, en fonction des zones colorées, de la plus petite à la plus grande.

Ex) A  B  C  D 

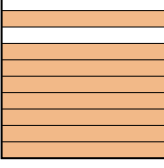
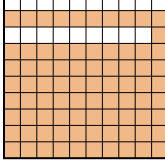

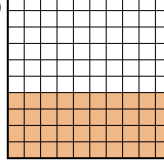
petite 0.06 - D
0.19 - A
0.2 - B
grande 0.4 - C

Réponses
 Ex. D,A,B,C

1) A  B  C  D 

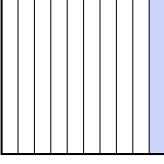

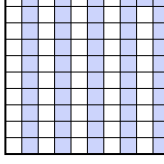
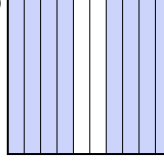
petite _____

 grande _____

2) A  B  C  D 

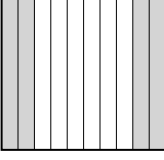
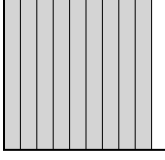


petite _____

 grande _____

3) A  B  C  D 

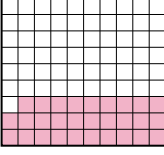


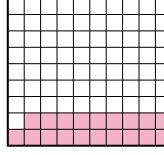
petite _____

 grande _____

4) A  B  C  D 


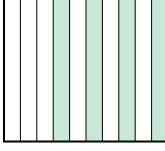
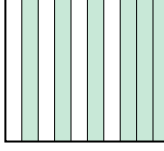

petite _____

 grande _____

5) A  B  C  D 

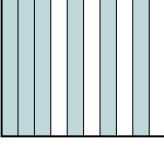


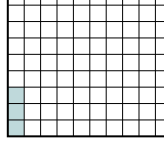
petite _____

 grande _____

6) A  B  C  D 



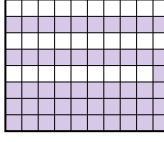

petite _____

 grande _____

7) A  B  C  D 

petite _____

 grande _____

8) A  B  C  D 

petite _____

 grande _____

1. _____
 2. _____
 3. _____
 4. _____
 5. _____
 6. _____
 7. _____
 8. _____



Classer les grilles, en fonction des zones colorées, de la plus petite à la plus grande.

Ex)	A	B	C	D	petite <u>0.06 - D</u> <u>0.19 - A</u> <u>0.2 - B</u> grande <u>0.4 - C</u>
1)	A	B	C	D	petite <u>0.2 - D</u> <u>0.5 - B</u> <u>0.9 - C</u> grande <u>0.96 - A</u>
2)	A	B	C	D	petite <u>0.1 - C</u> <u>0.4 - D</u> <u>0.8 - A</u> grande <u>0.81 - B</u>
3)	A	B	C	D	petite <u>0.1 - A</u> <u>0.51 - C</u> <u>0.6 - B</u> grande <u>0.8 - D</u>
4)	A	B	C	D	petite <u>0.36 - D</u> <u>0.4 - A</u> <u>0.9 - B</u> grande <u>0.93 - C</u>
5)	A	B	C	D	petite <u>0.19 - D</u> <u>0.29 - A</u> <u>0.6 - B</u> grande <u>0.8 - C</u>
6)	A	B	C	D	petite <u>0.4 - B</u> <u>0.6 - C</u> <u>0.67 - A</u> grande <u>0.89 - D</u>
7)	A	B	C	D	petite <u>0.03 - D</u> <u>0.17 - B</u> <u>0.36 - C</u> grande <u>0.6 - A</u>
8)	A	B	C	D	petite <u>0.2 - A</u> <u>0.5 - D</u> <u>0.61 - C</u> grande <u>0.92 - B</u>

Réponses

- Ex. D,A,B,C
1. D,B,C,A
2. C,D,A,B
3. A,C,B,D
4. D,A,B,C
5. D,A,B,C
6. B,C,A,D
7. D,B,C,A
8. A,D,C,B



Classer les grilles, en fonction des zones colorées, de la plus petite à la plus grande.

Ex) A B C D

petite 0.2 - B
0.6 - D
0.83 - A
grande 0.96 - C

Réponses
 Ex. B,D,A,C

1) A B C D

petite _____

grande _____

2) A B C D

petite _____

grande _____

3) A B C D

petite _____

grande _____

4) A B C D

petite _____

grande _____

5) A B C D

petite _____

grande _____

6) A B C D

petite _____

grande _____

7) A B C D

petite _____

grande _____

8) A B C D

petite _____

grande _____

1. _____
2. _____
3. _____
4. _____
5. _____
6. _____
7. _____
8. _____



Classer les grilles, en fonction des zones colorées, de la plus petite à la plus grande.

Ex)	A	B	C	D	petite <u>0.2 - B</u>	
					<u>0.6 - D</u>	
					<u>0.83 - A</u>	
					grande <u>0.96 - C</u>	
1)	A	B	C	D	petite <u>0.3 - D</u>	
					<u>0.62 - A</u>	
					<u>0.7 - B</u>	
					grande <u>0.83 - C</u>	
2)	A	B	C	D	petite <u>0.13 - D</u>	
					<u>0.4 - B</u>	
					<u>0.47 - A</u>	
					grande <u>0.7 - C</u>	
3)	A	B	C	D	petite <u>0.5 - B</u>	
					<u>0.71 - C</u>	
					<u>0.8 - A</u>	
					grande <u>0.9 - D</u>	
4)	A	B	C	D	petite <u>0.1 - C</u>	
					<u>0.2 - A</u>	
					<u>0.6 - B</u>	
					grande <u>0.9 - D</u>	
5)	A	B	C	D	petite <u>0.39 - D</u>	
					<u>0.4 - B</u>	
					<u>0.6 - A</u>	
					grande <u>0.91 - C</u>	
6)	A	B	C	D	petite <u>0.4 - B</u>	
					<u>0.86 - D</u>	
					<u>0.9 - A</u>	
					grande <u>0.94 - C</u>	
7)	A	B	C	D	petite <u>0.4 - A</u>	
					<u>0.53 - B</u>	
					<u>0.55 - C</u>	
					grande <u>0.6 - D</u>	
8)	A	B	C	D	petite <u>0.3 - C</u>	
					<u>0.4 - B</u>	
					<u>0.88 - D</u>	
					grande <u>0.94 - A</u>	

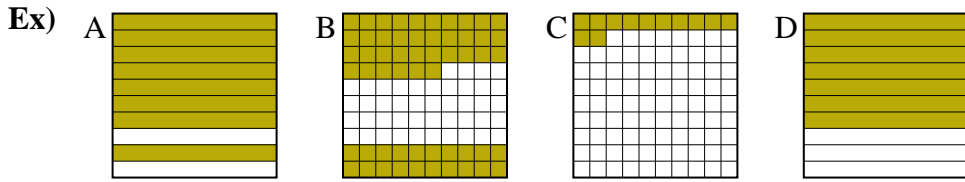
Réponses

- Ex. B,D,A,C
1. D,A,B,C
2. D,B,A,C
3. B,C,A,D
4. C,A,B,D
5. D,B,A,C
6. B,D,A,C
7. A,B,C,D
8. C,B,D,A



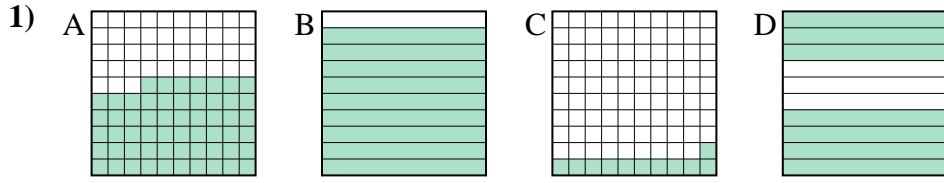
Classer les grilles, en fonction des zones colorées, de la plus petite à la plus grande.

Réponses



petite 0.12 - C
0.56 - B
0.7 - D
grande 0.8 - A

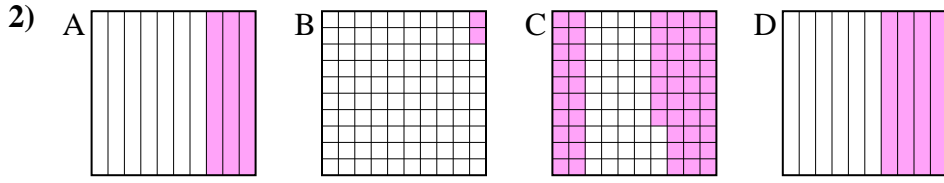
Ex. C,B,D,A



petite _____

grande _____

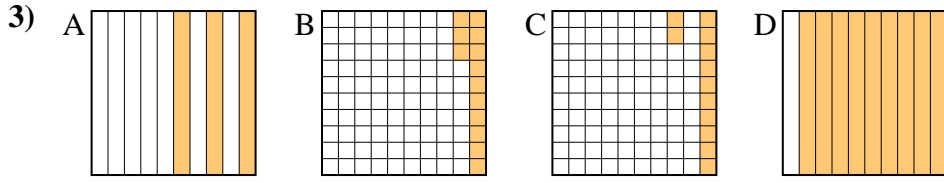
1. _____
2. _____
3. _____



petite _____

grande _____

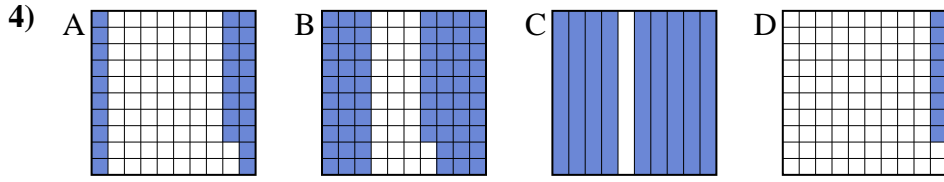
4. _____
5. _____
6. _____



petite _____

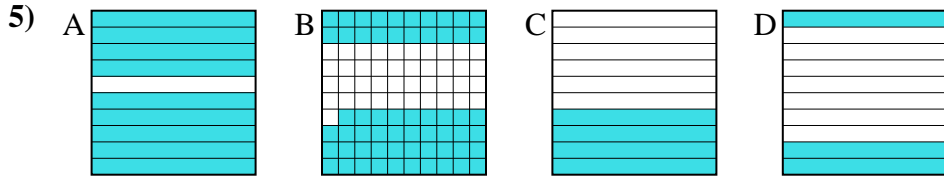
grande _____

7. _____
8. _____



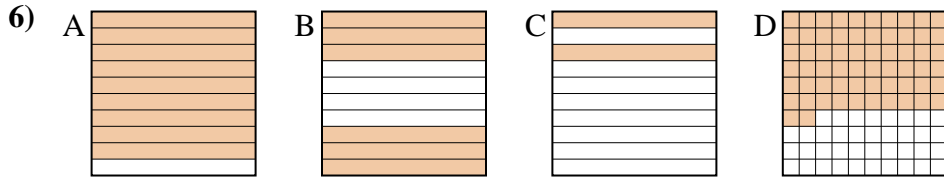
petite _____

grande _____



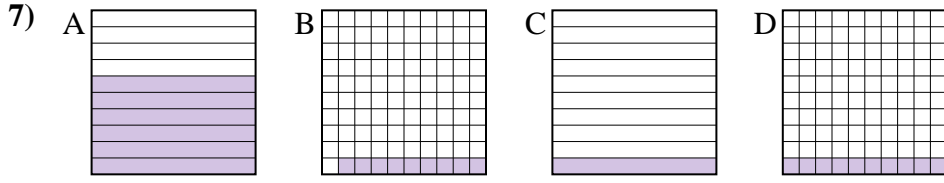
petite _____

grande _____



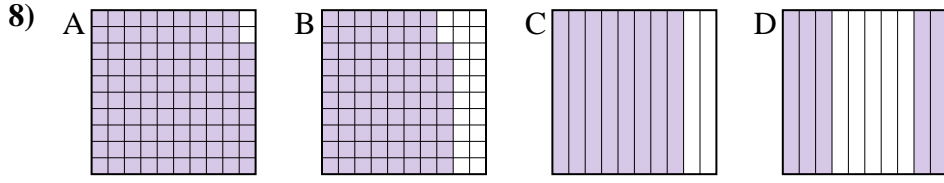
petite _____

grande _____



petite _____

grande _____



petite _____

grande _____



Classer les grilles, en fonction des zones colorées, de la plus petite à la plus grande.



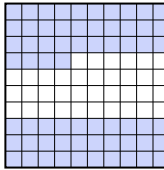
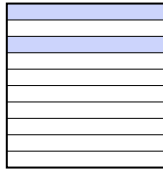
Ex)	A	B	C	D	petite <u>0.12 - C</u> <u>0.56 - B</u> <u>0.7 - D</u>	grande <u>0.8 - A</u>
1)	A	B	C	D	petite <u>0.11 - C</u> <u>0.57 - A</u> <u>0.7 - D</u>	grande <u>0.9 - B</u>
2)	A	B	C	D	petite <u>0.02 - B</u> <u>0.3 - A</u> <u>0.4 - D</u>	grande <u>0.57 - C</u>
3)	A	B	C	D	petite <u>0.12 - C</u> <u>0.13 - B</u> <u>0.3 - A</u>	grande <u>0.9 - D</u>
4)	A	B	C	D	petite <u>0.08 - D</u> <u>0.28 - A</u> <u>0.68 - B</u>	grande <u>0.9 - C</u>
5)	A	B	C	D	petite <u>0.3 - D</u> <u>0.4 - C</u> <u>0.59 - B</u>	grande <u>0.9 - A</u>
6)	A	B	C	D	petite <u>0.2 - C</u> <u>0.6 - B</u> <u>0.62 - D</u>	grande <u>0.9 - A</u>
7)	A	B	C	D	petite <u>0.09 - B</u> <u>0.1 - C</u> <u>0.1 - C</u>	grande <u>0.6 - A</u>
8)	A	B	C	D	petite <u>0.5 - D</u> <u>0.78 - B</u> <u>0.8 - C</u>	grande <u>0.98 - A</u>

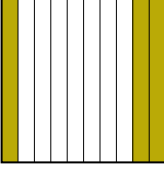
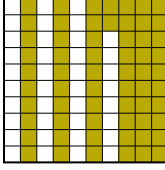
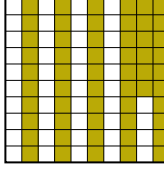
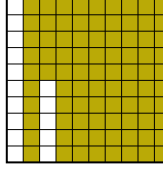
Réponses


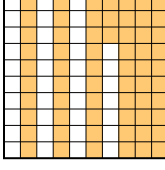
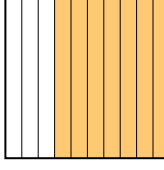
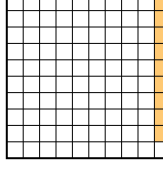
- Ex. C,B,D,A
1. C,A,D,B
2. B,A,D,C
3. C,B,A,D
4. D,A,B,C
5. D,C,B,A
6. C,B,D,A
7. B,C,C,A
8. D,B,C,A

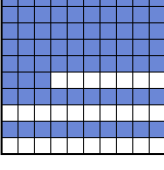

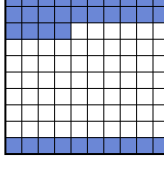






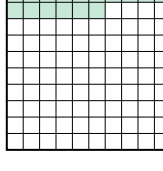
Classer les grilles, en fonction des zones colorées, de la plus petite à la plus grande.





Ex) A  B  C  D  petite 0.2 - D
0.24 - A
0.4 - B
grande 0.64 - C



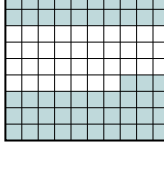
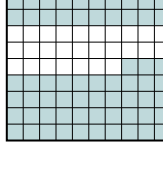
1) A  B  C  D  petite _____
_____ grande _____

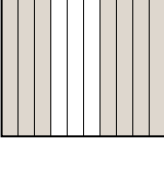
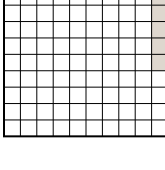
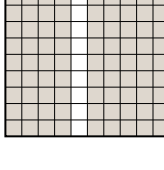
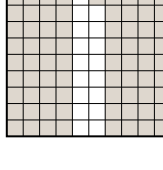
2) A  B  C  D  petite _____
_____ grande _____

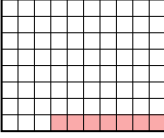
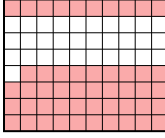


3) A  B  C  D  petite _____
_____ grande _____

4) A  B  C  D  petite _____
_____ grande _____

5) A  B  C  D  petite _____
_____ grande _____

6) A  B  C  D  petite _____
_____ grande _____

7) A  B  C  D  petite _____
_____ grande _____

8) A  B  C  D  petite _____
_____ grande _____

Réponses

- Ex. D,A,B,C
1. _____
2. _____
3. _____
4. _____
5. _____
6. _____
7. _____
8. _____



Classer les grilles, en fonction des zones colorées, de la plus petite à la plus grande.

Ex)	A	B	C	D	petite <u>0.2 - D</u> <u>0.24 - A</u> <u>0.4 - B</u>	
				grande <u>0.64 - C</u>		
1)	A	B	C	D	petite <u>0.3 - A</u> <u>0.56 - C</u> <u>0.62 - B</u>	
				grande <u>0.85 - D</u>		
2)	A	B	C	D	petite <u>0.09 - D</u> <u>0.1 - A</u> <u>0.63 - B</u>	
				grande <u>0.7 - C</u>		
3)	A	B	C	D	petite <u>0.3 - B</u> <u>0.34 - C</u> <u>0.7 - D</u>	
				grande <u>0.73 - A</u>		
4)	A	B	C	D	petite <u>0.16 - D</u> <u>0.4 - B</u> <u>0.57 - A</u>	
				grande <u>0.9 - C</u>		
5)	A	B	C	D	petite <u>0.09 - C</u> <u>0.3 - B</u> <u>0.9 - A</u>	
				grande <u>0.99 - D</u>		
6)	A	B	C	D	petite <u>0.3 - A</u> <u>0.4 - B</u> <u>0.63 - C</u>	
				grande <u>0.73 - D</u>		
7)	A	B	C	D	petite <u>0.06 - B</u> <u>0.7 - A</u> <u>0.82 - D</u>	
				grande <u>0.9 - C</u>		
8)	A	B	C	D	petite <u>0.07 - A</u> <u>0.2 - D</u> <u>0.3 - C</u>	
				grande <u>0.69 - B</u>		

Réponses

- Ex. D,A,B,C
1. A,C,B,D
2. D,A,B,C
3. B,C,D,A
4. D,B,A,C
5. C,B,A,D
6. A,B,C,D
7. B,A,D,C
8. A,D,C,B