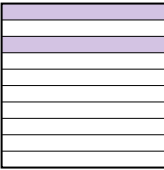

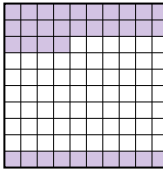
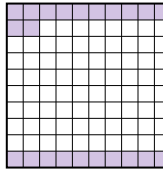




Classer les grilles, en fonction des zones colorées, de la plus petite à la plus grande.

Réponses

Ex) A  B  C  D 

petite 0.2 - A
0.22 - D
0.34 - C
grande 0.93 - B

Ex. A,D,C,B

1. _____

2. _____

3. _____


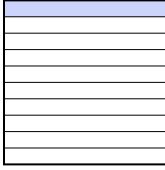

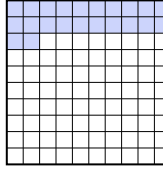
4. _____

5. _____

6. _____

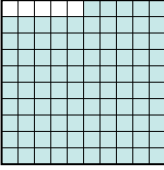
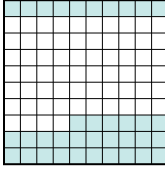

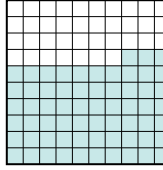
7. _____

8. _____

1) A  B  C  D 

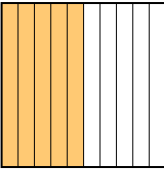
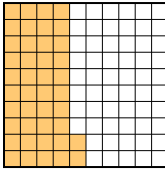
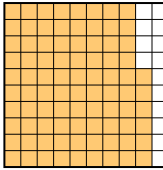
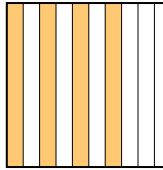
petite _____

grande _____

2) A  B  C  D 





petite _____

grande _____

3) A  B  C  D 

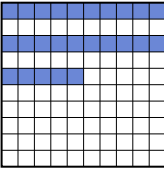



petite _____

grande _____

4) A  B  C  D 


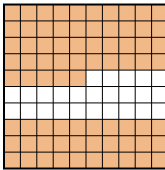

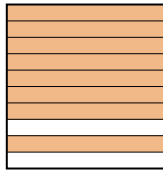
petite _____

grande _____

5) A  B  C  D 



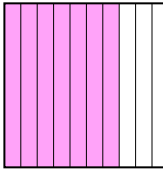
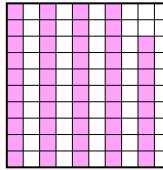
petite _____

grande _____

6) A  B  C  D 


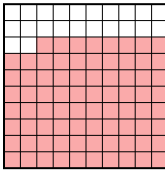

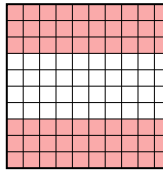
petite _____

grande _____

7) A  B  C  D 

petite _____

grande _____

8) A  B  C  D 

petite _____

grande _____



Classer les grilles, en fonction des zones colorées, de la plus petite à la plus grande.

| | | | | | |
|-----|---|---|---|---|---|
| Ex) | A | B | C | D | petite <u>0.2 - A</u> <u>0.22 - D</u> <u>0.34 - C</u> |
| | | | | | grande <u>0.93 - B</u> |
| 1) | A | B | C | D | petite <u>0.1 - B</u> <u>0.22 - D</u> <u>0.3 - C</u> |
| | | | | | grande <u>0.5 - A</u> |
| 2) | A | B | C | D | petite <u>0.36 - B</u> <u>0.63 - D</u> <u>0.9 - C</u> |
| | | | | | grande <u>0.95 - A</u> |
| 3) | A | B | C | D | petite <u>0.4 - D</u> <u>0.42 - B</u> <u>0.5 - A</u> |
| | | | | | grande <u>0.86 - C</u> |
| 4) | A | B | C | D | petite <u>0.2 - D</u> <u>0.27 - A</u> <u>0.28 - C</u> |
| | | | | | grande <u>0.9 - B</u> |
| 5) | A | B | C | D | petite <u>0.25 - A</u> <u>0.28 - C</u> <u>0.6 - D</u> |
| | | | | | grande <u>0.8 - B</u> |
| 6) | A | B | C | D | petite <u>0.4 - A</u> <u>0.6 - C</u> <u>0.75 - B</u> |
| | | | | | grande <u>0.8 - D</u> |
| 7) | A | B | C | D | petite <u>0.48 - D</u> <u>0.5 - B</u> <u>0.65 - A</u> |
| | | | | | grande <u>0.7 - C</u> |
| 8) | A | B | C | D | petite <u>0.6 - D</u> <u>0.7 - C</u> <u>0.78 - B</u> |
| | | | | | grande <u>0.9 - A</u> |

Réponses

- Ex. A,D,C,B
1. B,D,C,A
2. B,D,C,A
3. D,B,A,C
4. D,A,C,B
5. A,C,D,B
6. A,C,B,D
7. D,B,A,C
8. D,C,B,A