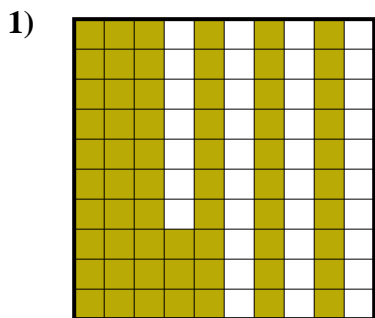


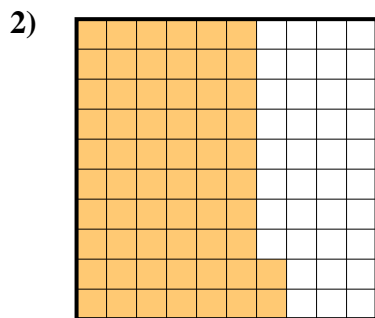


Déterminez quelle lettre représente le mieux la valeur colorée relative à la figure.

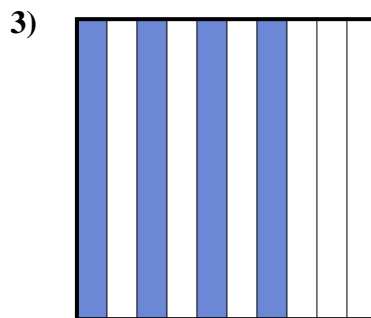
**Réponses**



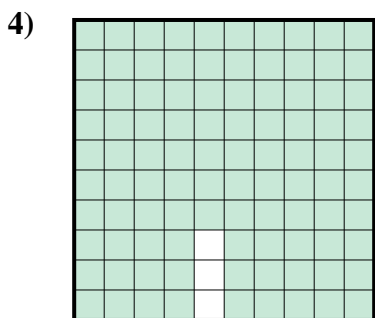
- A. 6,3
- B. 0,063
- C. 630,00
- D. 0,63



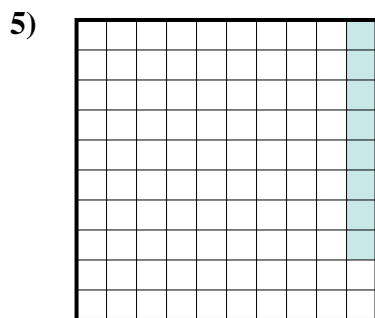
- A. 62
- B. 6,2
- C. 0,62
- D. 620,0



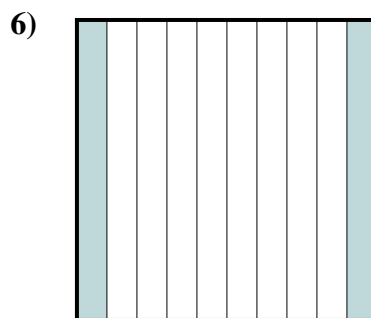
- A. 40
- B. 400,0
- C. 0,04
- D. 0,4



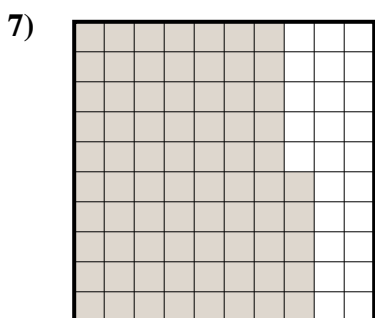
- A. 970,0
- B. 0,097
- C. 0,97
- D. 9,7



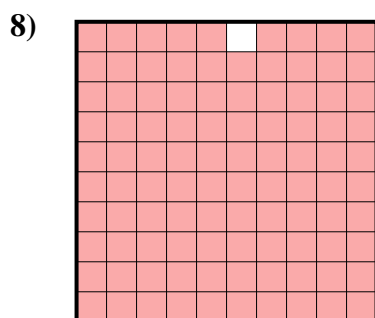
- A. 0,008
- B. 0,8
- C. 8
- D. 0,08




- A. 20
- B. 0,02
- C. 2
- D. 0,2



- A. 0,75
- B. 75
- C. 7,5
- D. 0,075



- A. 0,99
- B. 0,099
- C. 990,0
- D. 9,9



- A. 90
- B. 0,09
- C. 0,9
- D. 9

1. \_\_\_\_\_

2. \_\_\_\_\_

3. \_\_\_\_\_

4. \_\_\_\_\_

5. \_\_\_\_\_

6. \_\_\_\_\_

7. \_\_\_\_\_

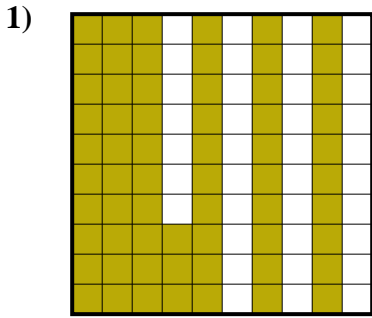
8. \_\_\_\_\_

9. \_\_\_\_\_

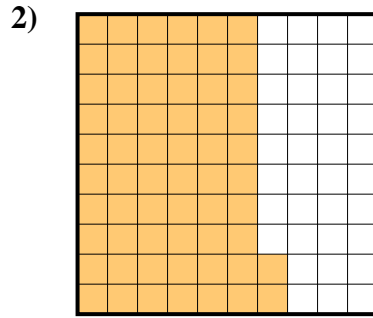


Déterminez quelle lettre représente le mieux la valeur colorée relative à la figure.

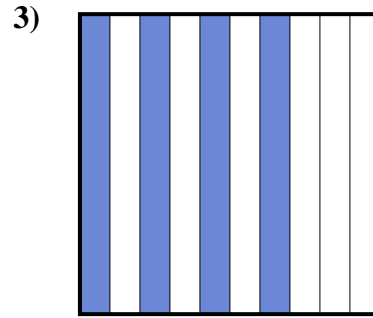
**Réponses**



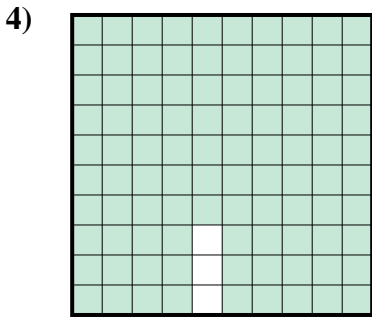
- A. 6,3
- B. 0,063
- C. 630,00
- D. 0,63



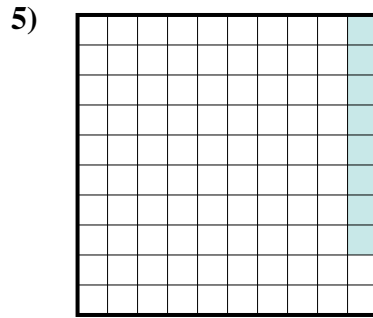
- A. 62
- B. 6,2
- C. 0,62
- D. 620,0



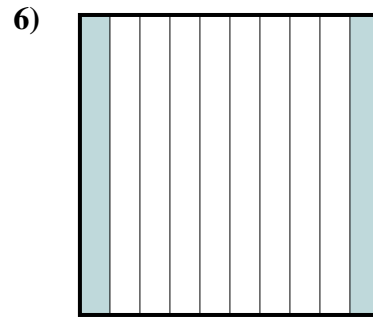
- A. 40
- B. 400,0
- C. 0,04
- D. 0,4



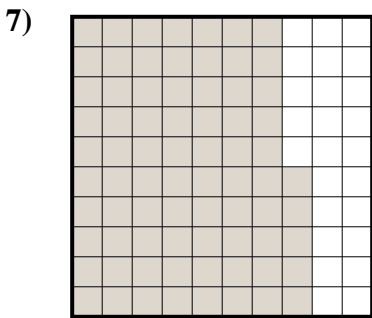
- A. 970,0
- B. 0,097
- C. 0,97
- D. 9,7



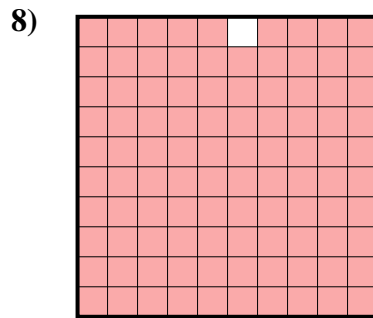
- A. 0,008
- B. 0,8
- C. 8
- D. 0,08



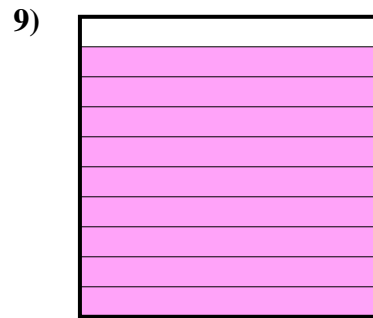
- A. 20
- B. 0,02
- C. 2
- D. 0,2



- A. 0,75
- B. 75
- C. 7,5
- D. 0,075



- A. 0,99
- B. 0,099
- C. 990,0
- D. 9,9



- A. 90
- B. 0,09
- C. 0,9
- D. 9

- 1. **D**
- 2. **C**
- 3. **D**
- 4. **C**
- 5. **D**
- 6. **D**
- 7. **A**
- 8. **A**
- 9. **C**